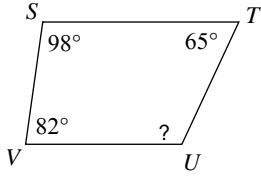


Assignment

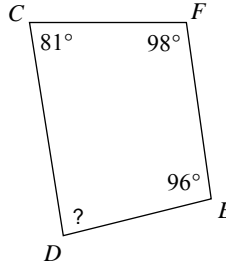
Find the measure of each angle indicated.

1)



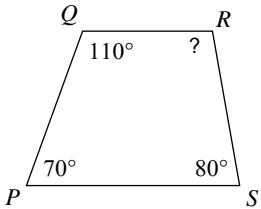
- A) 120°
- B) 60°
- C) 31°
- D) 115°

2)



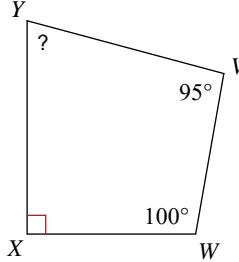
- A) 80°
- B) 45°
- C) 85°
- D) 115°

3)



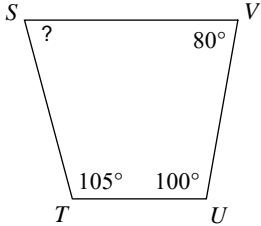
- A) 120°
- B) 114°
- C) 100°
- D) 55°

4)



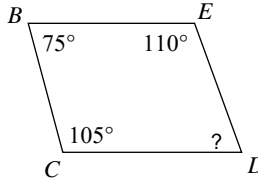
- A) 75°
- B) 104°
- C) 56°
- D) 110°

5)



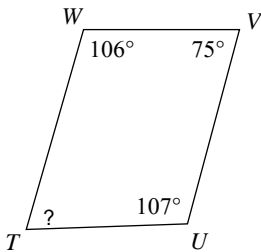
- A) 78°
- B) 65°
- C) 112°
- D) 75°

6)



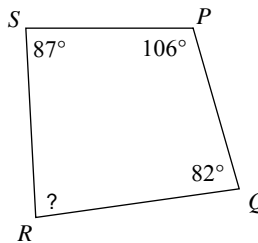
- A) 45°
- B) 110°
- C) 55°
- D) 70°

7)



- A) 72°
- B) 96°
- C) 34°
- D) 50°

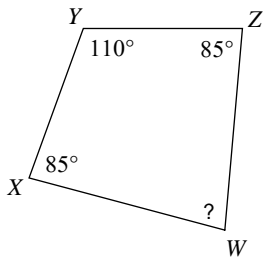
8)



- A) 50°
- B) 85°
- C) 85°
- D) 72°

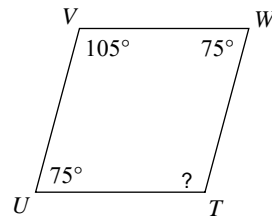


9)



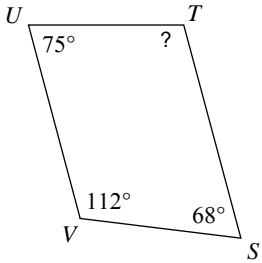
- A) 76° B) 96°
 C) 80° D) 36°

10)



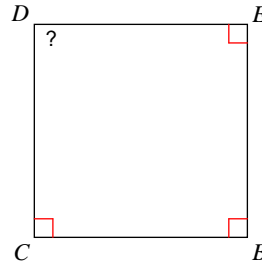
- A) 105° B) 65°
 C) 69° D) 30°

11)



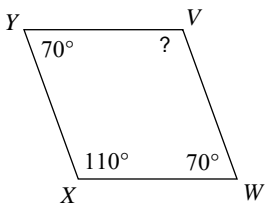
- A) 110° B) 105°
 C) 83° D) 94°

12)



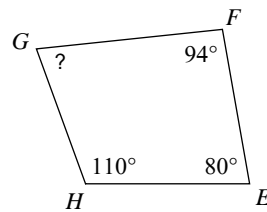
- A) 78° B) 90°
 C) 115° D) 95°

13)



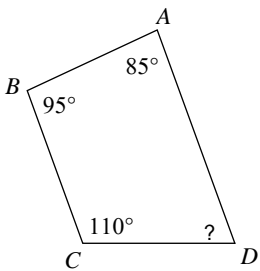
- A) 110° B) 82°
 C) 105° D) 38°

14)



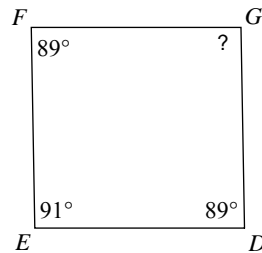
- A) 76° B) 85°
 C) 100° D) 115°

15)



- A) 56° B) 95°
 C) 70° D) 80°

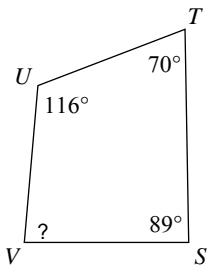
16)



- A) 91° B) 110°
 C) 64° D) 104°

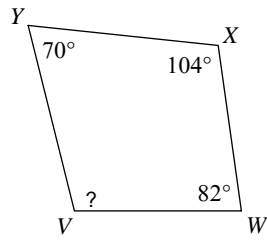


17)



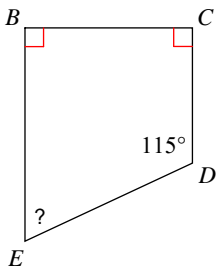
- A) 68° B) 110°
 C) 85° D) 45°

18)



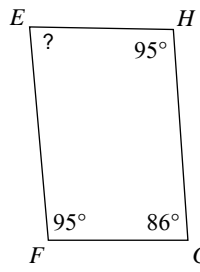
- A) 110° B) 120°
 C) 90° D) 104°

19)



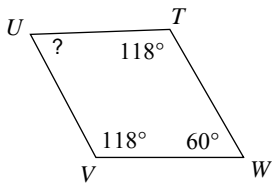
- A) 65° B) 82°
 C) 35° D) 55°

20)



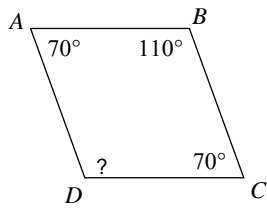
- A) 100° B) 115°
 C) 84° D) 45°

21)



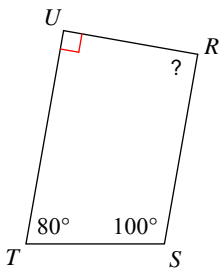
- A) 48° B) 64°
 C) 68° D) 52°

22)



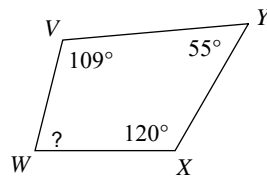
- A) 105° B) 94°
 C) 110° D) 60°

23)



- A) 34° B) 38°
 C) 90° D) 50°

24)



- A) 70° B) 100°
 C) 50° D) 76°



Answers to Assignment (ID: 1)

- 1) D
- 5) D
- 9) C
- 13) A
- 17) C
- 21) B

- 2) C
- 6) D
- 10) A
- 14) A
- 18) D
- 22) C

- 3) C
- 7) A
- 11) B
- 15) C
- 19) A
- 23) C

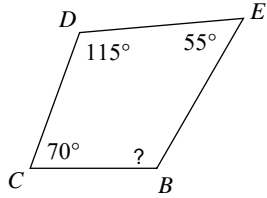
- 4) A
- 8) C
- 12) B
- 16) A
- 20) C
- 24) D



Assignment

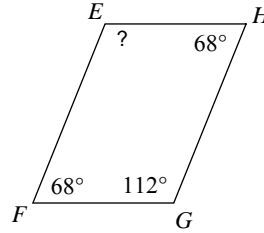
Find the measure of each angle indicated.

1)



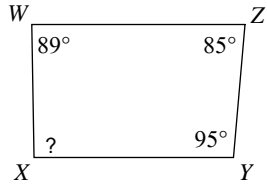
- A) 40°
- B) 120°
- C) 75°
- D) 102°

2)



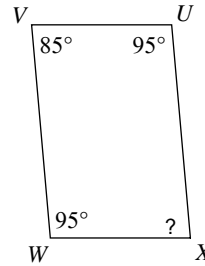
- A) 112°
- B) 60°
- C) 52°
- D) 35°

3)



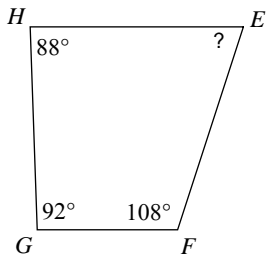
- A) 91°
- B) 60°
- C) 45°
- D) 105°

4)



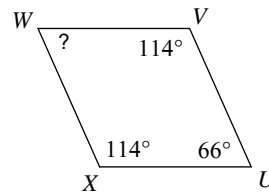
- A) 105°
- B) 85°
- C) 95°
- D) 110°

5)



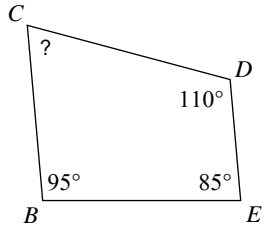
- A) 100°
- B) 81°
- C) 72°
- D) 40°

6)



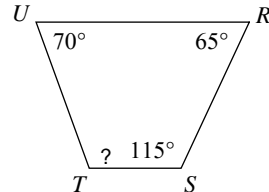
- A) 88°
- B) 69°
- C) 70°
- D) 66°

7)



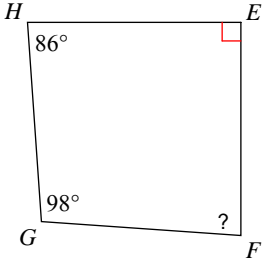
- A) 56°
- B) 58°
- C) 70°
- D) 95°

8)

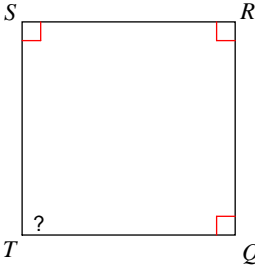


- A) 110°
- B) 60°
- C) 66°
- D) 77°

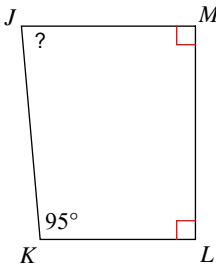


- 9) 

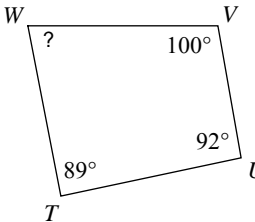
 A) 86° B) 80°
 C) 76° D) 119°

- 10) 

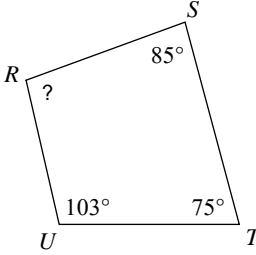
 A) 90° B) 80°
 C) 105° D) 78°

- 11) 

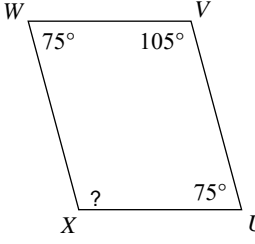
 A) 85° B) 90°
 C) 62° D) 70°

- 12) 

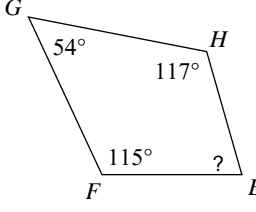
 A) 93° B) 30°
 C) 95° D) 79°

- 13) 

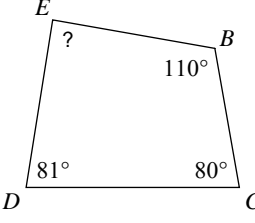
 A) 41° B) 97°
 C) 54° D) 85°

- 14) 

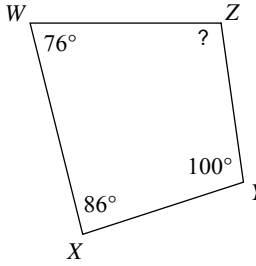
 A) 42° B) 115°
 C) 105° D) 102°

- 15) 

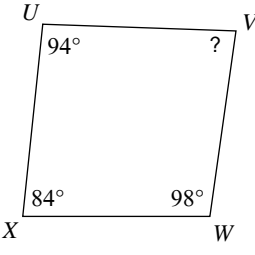
 A) 75° B) 40°
 C) 74° D) 50°

- 16) 

 A) 89° B) 115°
 C) 85° D) 76°

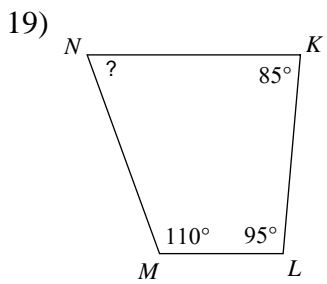
- 17) 

 A) 50° B) 96°

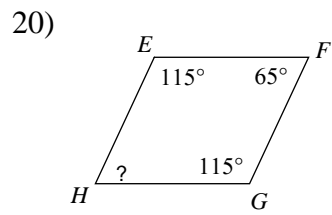
- 18) 

 A) 86° B) 60°
 C) 82° D) 84°

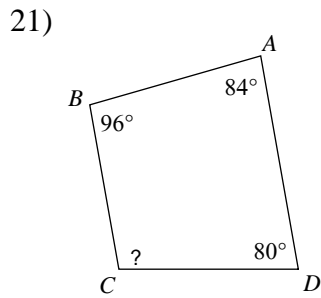




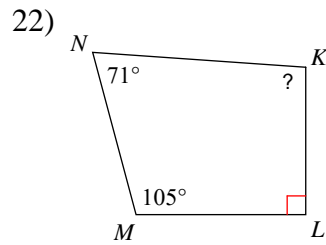
- A) 70° B) 85°
 C) 55° D) 32°



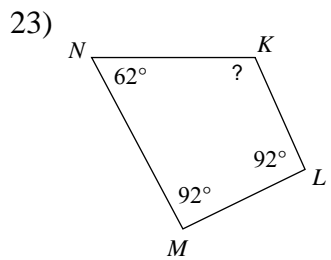
- A) 70° B) 95°
 C) 65° D) 105°



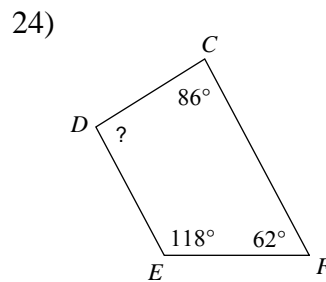
- A) 101° B) 55°
 C) 95° D) 100°



- A) 95° B) 94°
 C) 110° D) 50°



- A) 35° B) 98°
 C) 114° D) 45°



- A) 94° B) 114°
 C) 44° D) 36°



Answers to Assignment (ID: 2)

- 1) B
- 5) C
- 9) A
- 13) B
- 17) D
- 21) D

- 2) A
- 6) D
- 10) A
- 14) C
- 18) D
- 22) B

- 3) A
- 7) C
- 11) A
- 15) C
- 19) A
- 23) C

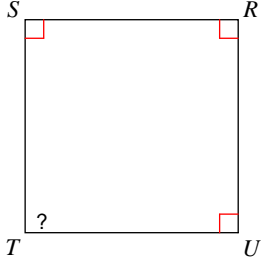
- 4) B
- 8) A
- 12) D
- 16) A
- 20) C
- 24) A



Assignment

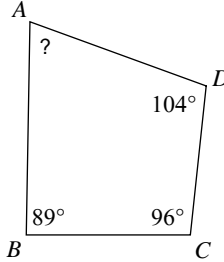
Find the measure of each angle indicated.

1)



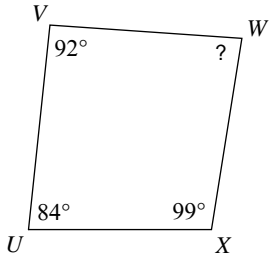
- A) 90° B) 65°
 C) 80° D) 30°

2)



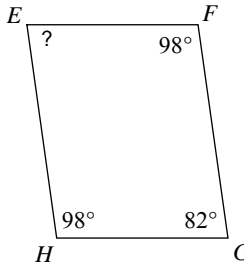
- A) 115° B) 38°
 C) 71° D) 120°

3)



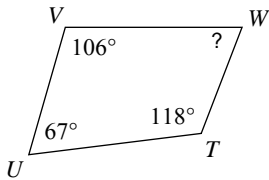
- A) 85° B) 85°
 C) 52° D) 32°

4)



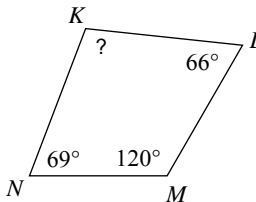
- A) 63° B) 82°
 C) 115° D) 35°

5)



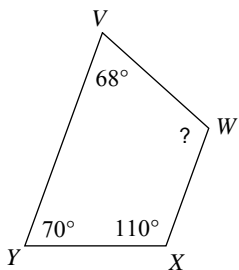
- A) 50° B) 65°
 C) 96° D) 69°

6)



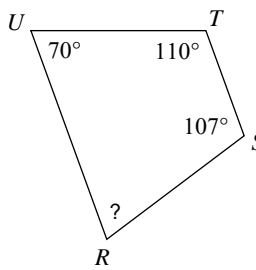
- A) 52° B) 113°
 C) 105° D) 80°

7)



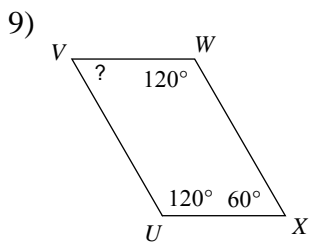
- A) 60° B) 80°
 C) 94° D) 112°

8)

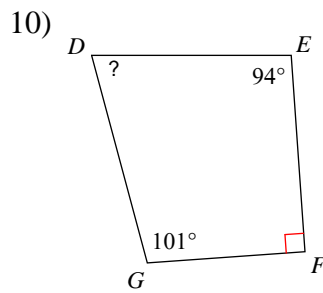


- A) 95° B) 46°
 C) 73° D) 120°

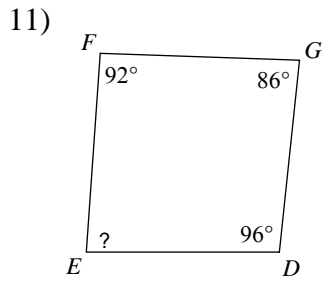




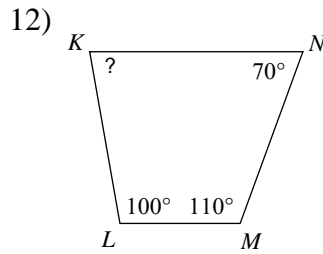
- A) 60° B) 50°
 C) 70° D) 72°



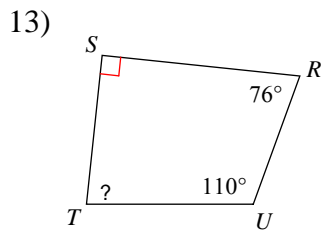
- A) 81° B) 75°
 C) 56° D) 39°



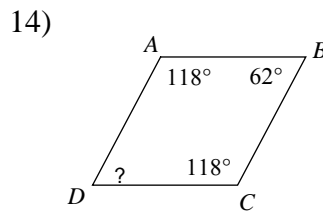
- A) 86° B) 100°
 C) 78° D) 71°



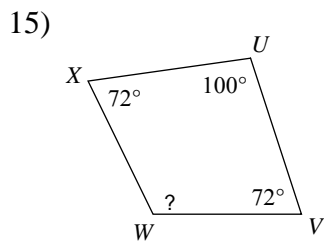
- A) 80° B) 63°
 C) 106° D) 40°



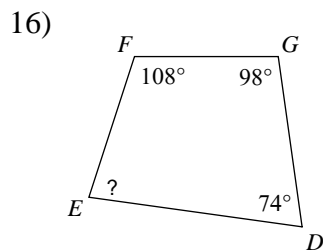
- A) 76° B) 84°
 C) 45° D) 95°



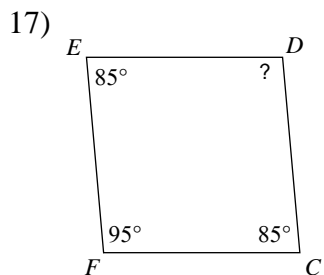
- A) 95° B) 50°
 C) 65° D) 62°



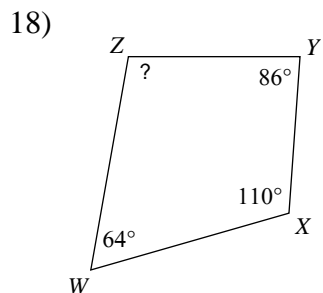
- A) 90° B) 104°
 C) 116° D) 70°



- A) 80° B) 60°
 C) 38° D) 40°



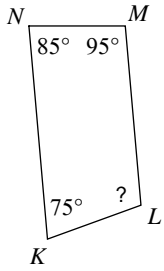
- A) 49° B) 95°
 C) 85° D) 75°



- A) 66° B) 35°
 C) 100° D) 55°

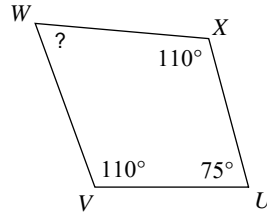


19)



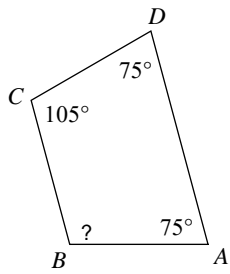
- A) 80° B) 115°
 C) 106° D) 105°

20)



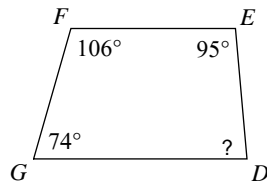
- A) 65° B) 38°
 C) 96° D) 92°

21)



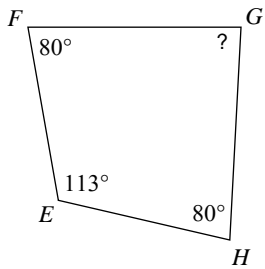
- A) 105° B) 35°
 C) 70° D) 36°

22)



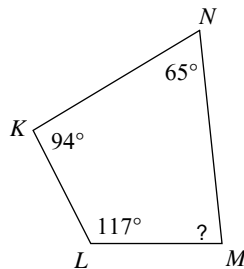
- A) 105° B) 120°
 C) 85° D) 86°

23)



- A) 63° B) 87°
 C) 50° D) 70°

24)



- A) 35° B) 84°
 C) 45° D) 50°



Answers to Assignment (ID: 3)

1) A
5) D
9) A
13) B
17) B
21) A

2) C
6) C
10) B
14) D
18) C
22) C

3) A
7) D
11) A
15) C
19) D
23) B

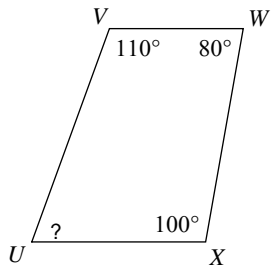
4) B
8) C
12) A
16) A
20) A
24) B



Assignment

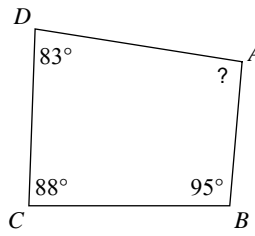
Find the measure of each angle indicated.

1)



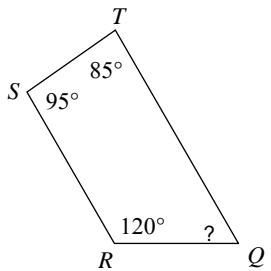
- A) 90°
- B) 75°
- C) 108°
- D) 70°

2)



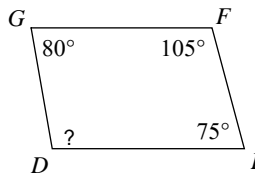
- A) 94°
- B) 56°
- C) 75°
- D) 35°

3)



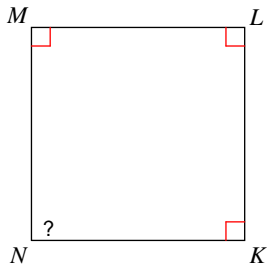
- A) 96°
- B) 77°
- C) 85°
- D) 60°

4)



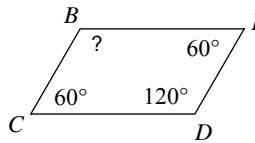
- A) 120°
- B) 108°
- C) 100°
- D) 74°

5)



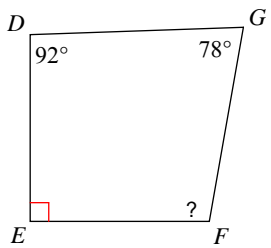
- A) 65°
- B) 37°
- C) 90°
- D) 120°

6)



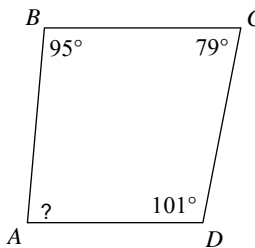
- A) 100°
- B) 120°
- C) 80°
- D) 75°

7)



- A) 100°
- B) 95°
- C) 106°
- D) 32°

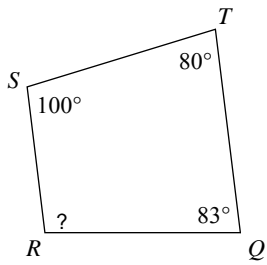
8)



- A) 38°
- B) 110°
- C) 52°
- D) 85°

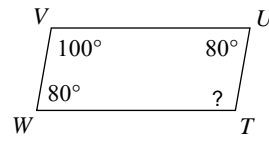


9)



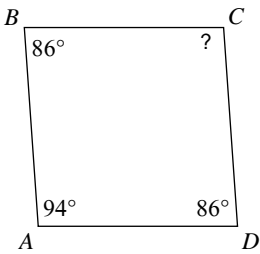
- A) 40° B) 97°
 C) 102° D) 55°

10)



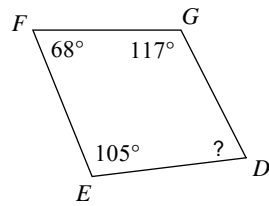
- A) 72° B) 100°
 C) 68° D) 80°

11)



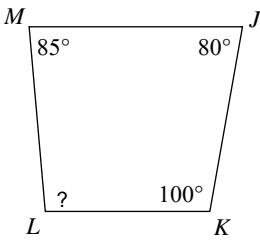
- A) 82° B) 50°
 C) 105° D) 94°

12)



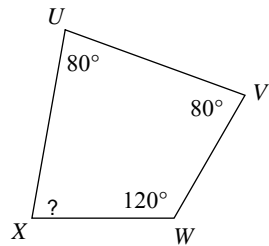
- A) 47° B) 80°
 C) 115° D) 70°

13)



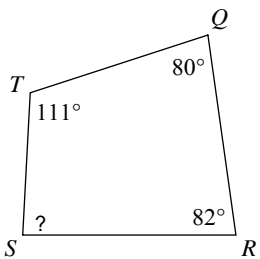
- A) 95° B) 93°
 C) 90° D) 60°

14)



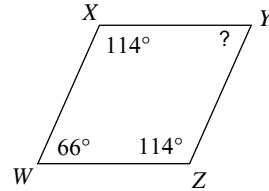
- A) 80° B) 58°
 C) 70° D) 60°

15)



- A) 74° B) 70°
 C) 87° D) 65°

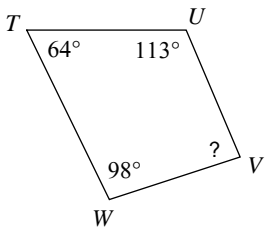
16)



- A) 66° B) 84°
 C) 75° D) 103°

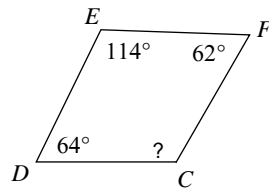


17)



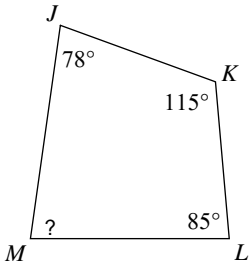
- A) 85° B) 65°
 C) 87° D) 50°

18)



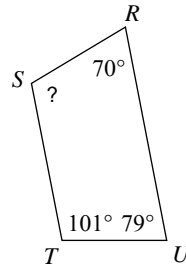
- A) 42° B) 68°
 C) 94° D) 120°

19)



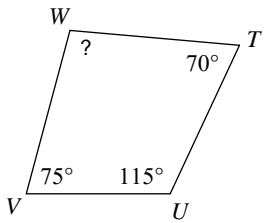
- A) 76° B) 38°
 C) 40° D) 82°

20)



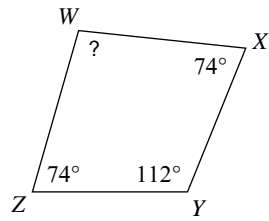
- A) 39° B) 90°
 C) 110° D) 55°

21)



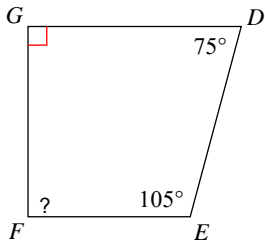
- A) 66° B) 105°
 C) 100° D) 85°

22)



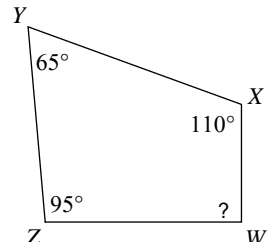
- A) 114° B) 100°
 C) 46° D) 55°

23)



- A) 100° B) 45°
 C) 90° D) 70°

24)



- A) 94° B) 80°
 C) 90° D) 42°



Answers to Assignment (ID: 4)

- 1) D
- 5) C
- 9) B
- 13) A
- 17) A
- 21) C

- 2) A
- 6) B
- 10) B
- 14) A
- 18) D
- 22) B

- 3) D
- 7) A
- 11) D
- 15) C
- 19) D
- 23) C

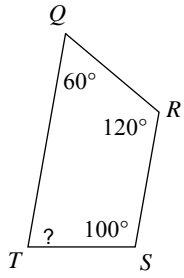
- 4) C
- 8) D
- 12) D
- 16) A
- 20) C
- 24) C



Assignment

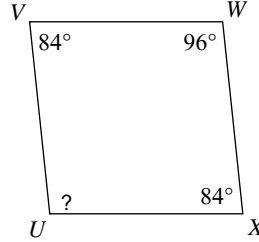
Find the measure of each angle indicated.

1)



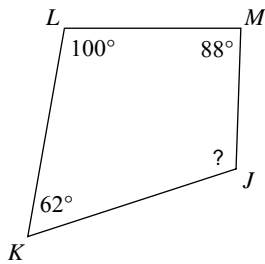
- A) 37°
- B) 52°
- C) 36°
- D) 80°

2)



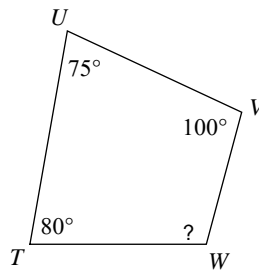
- A) 30°
- B) 96°
- C) 104°
- D) 98°

3)



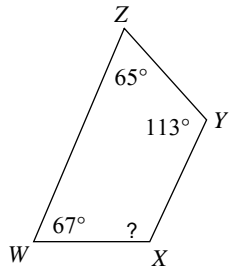
- A) 55°
- B) 60°
- C) 110°
- D) 79°

4)



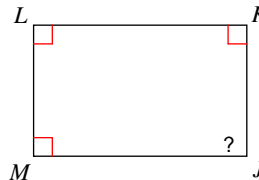
- A) 68°
- B) 84°
- C) 96°
- D) 105°

5)



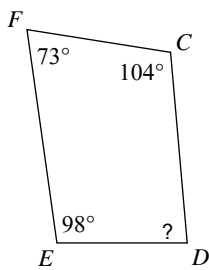
- A) 115°
- B) 35°
- C) 73°
- D) 110°

6)



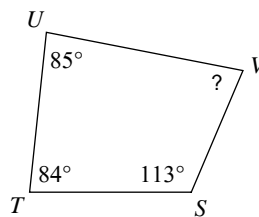
- A) 106°
- B) 55°
- C) 68°
- D) 90°

7)



- A) 85°
- B) 61°
- C) 45°
- D) 90°

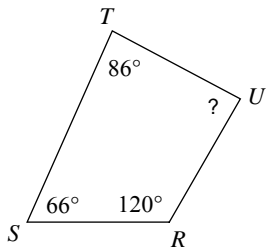
8)



- A) 88°
- B) 115°
- C) 78°
- D) 80°

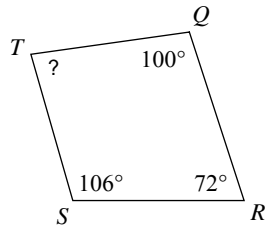


9)



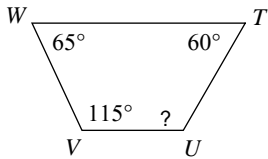
- A) 88° B) 50°
 C) 56° D) 110°

10)



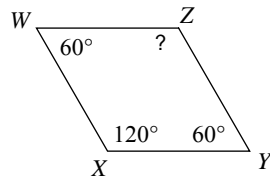
- A) 70° B) 82°
 C) 42° D) 82°

11)



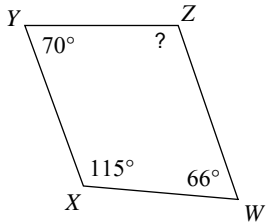
- A) 45° B) 35°
 C) 120° D) 56°

12)



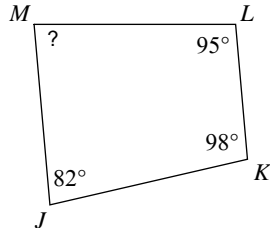
- A) 71° B) 85°
 C) 120° D) 110°

13)



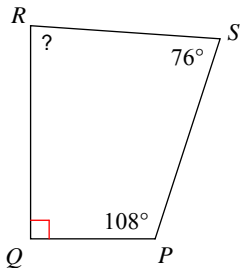
- A) 105° B) 75°
 C) 81° D) 109°

14)



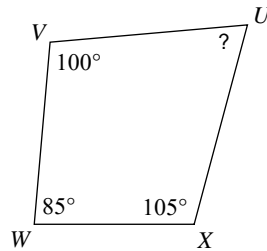
- A) 110° B) 85°
 C) 50° D) 81°

15)



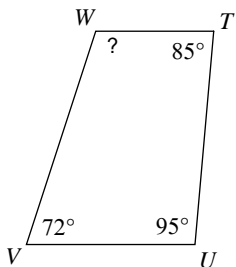
- A) 86° B) 114°
 C) 115° D) 73°

16)



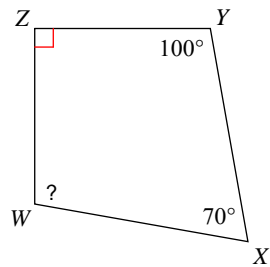
- A) 70° B) 44°
 C) 95° D) 90°

17)



- A) 108° B) 60°
 C) 110° D) 60°

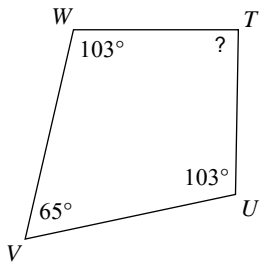
18)



- A) 98° B) 50°
 C) 95° D) 100°

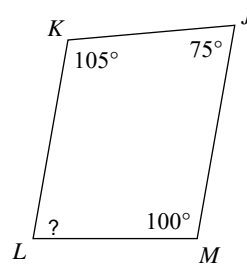


19)



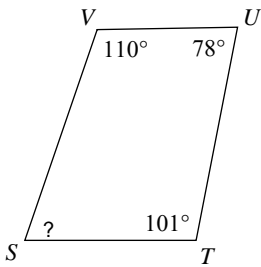
- A) 89° B) 114°
 C) 110° D) 55°

20)



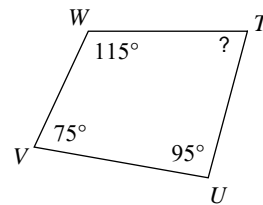
- A) 80° B) 70°
 C) 40° D) 64°

21)



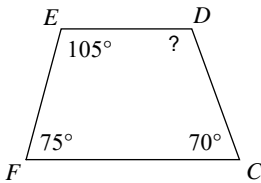
- A) 74° B) 50°
 C) 71° D) 46°

22)



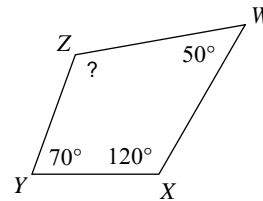
- A) 100° B) 75°
 C) 98° D) 40°

23)



- A) 70° B) 60°
 C) 110° D) 76°

24)



- A) 100° B) 45°
 C) 114° D) 120°



Answers to Assignment (ID: 5)

- 1) D
- 5) A
- 9) A
- 13) D
- 17) A
- 21) C

- 2) B
- 6) D
- 10) B
- 14) B
- 18) D
- 22) B

- 3) C
- 7) A
- 11) C
- 15) A
- 19) A
- 23) C

- 4) D
- 8) C
- 12) C
- 16) A
- 20) A
- 24) D



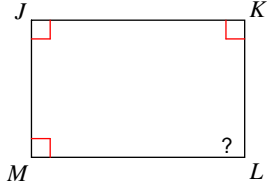
Assignment

Name _____

Date _____ Period _____

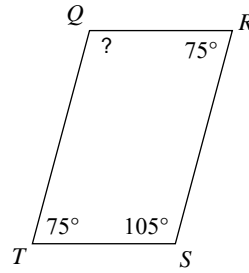
Find the measure of each angle indicated.

1)



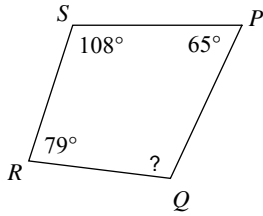
- A) 50° B) 86°
 C) 90° D) 92°

2)



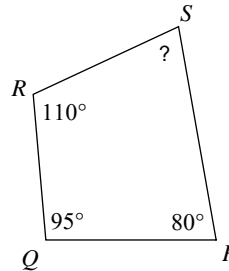
- A) 95° B) 55°
 C) 45° D) 105°

3)



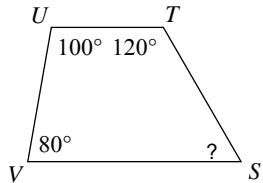
- A) 108° B) 90°
 C) 45° D) 60°

4)



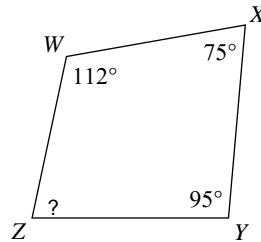
- A) 75° B) 90°
 C) 70° D) 80°

5)



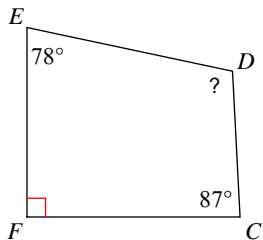
- A) 60° B) 85°
 C) 66° D) 65°

6)



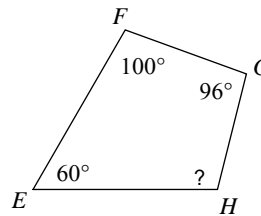
- A) 70° B) 78°
 C) 60° D) 90°

7)



- A) 105° B) 85°
 C) 38° D) 95°

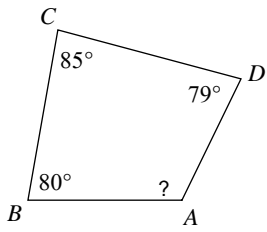
8)



- A) 50° B) 104°
 C) 66° D) 95°

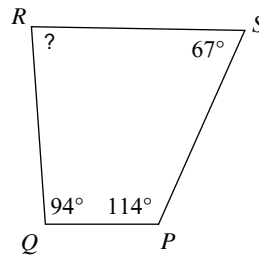


9)



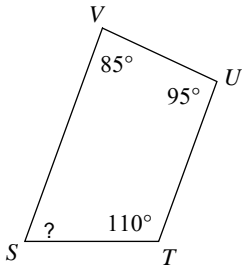
- A) 105° B) 88°
 C) 104° D) 116°

10)



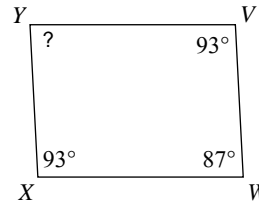
- A) 50° B) 57°
 C) 85° D) 90°

11)



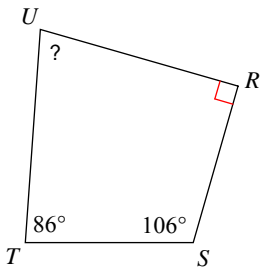
- A) 118° B) 70°
 C) 88° D) 85°

12)



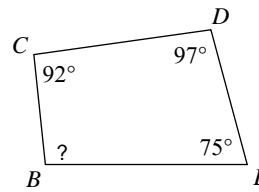
- A) 65° B) 87°
 C) 48° D) 32°

13)



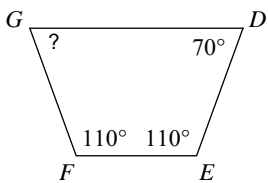
- A) 115° B) 45°
 C) 78° D) 114°

14)



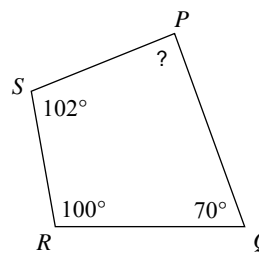
- A) 74° B) 78°
 C) 45° D) 96°

15)



- A) 51° B) 70°
 C) 84° D) 32°

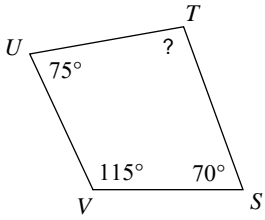
16)



- A) 90° B) 88°
 C) 92° D) 100°

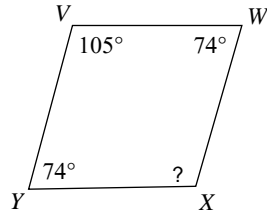


17)



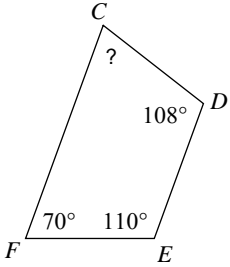
- A) 100° B) 82°
 C) 38° D) 66°

18)



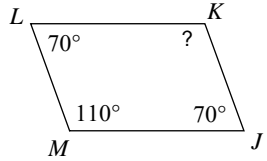
- A) 107° B) 45°
 C) 35° D) 90°

19)



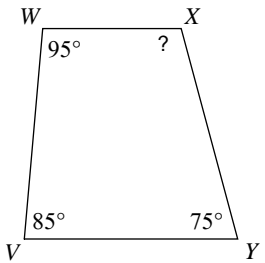
- A) 110° B) 85°
 C) 100° D) 72°

20)



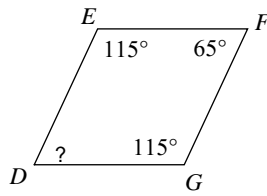
- A) 110° B) 85°
 C) 115° D) 100°

21)



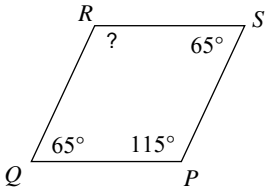
- A) 35° B) 38°
 C) 105° D) 42°

22)



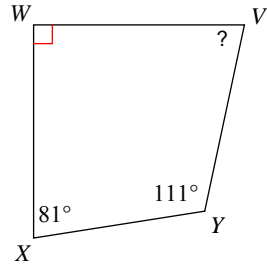
- A) 85° B) 65°
 C) 55° D) 120°

23)



- A) 104° B) 115°
 C) 44° D) 108°

24)



- A) 78° B) 70°
 C) 104° D) 120°



Answers to Assignment (ID: 6)

1) C
5) A
9) D
13) C
17) A
21) C

2) D
6) B
10) C
14) D
18) A
22) B

3) A
7) A
11) B
15) B
19) D
23) B

4) A
8) B
12) B
16) B
20) A
24) A



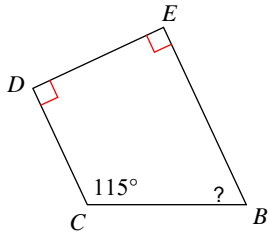
Assignment

Name _____

Date _____ Period _____

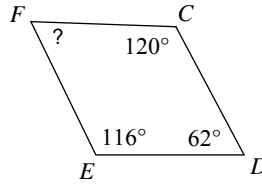
Find the measure of each angle indicated.

1)



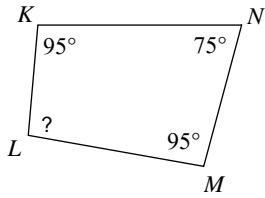
- A) 35°
- B) 65°
- C) 60°
- D) 55°

2)



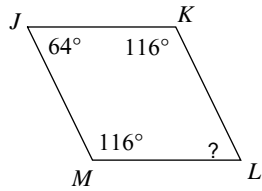
- A) 95°
- B) 62°
- C) 50°
- D) 110°

3)



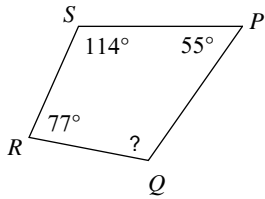
- A) 85°
- B) 70°
- C) 95°
- D) 83°

4)



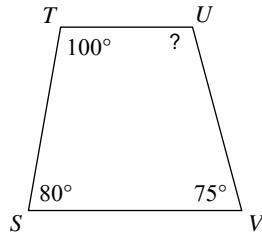
- A) 104°
- B) 74°
- C) 52°
- D) 64°

5)



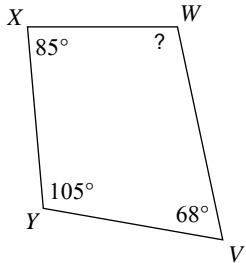
- A) 35°
- B) 73°
- C) 114°
- D) 115°

6)



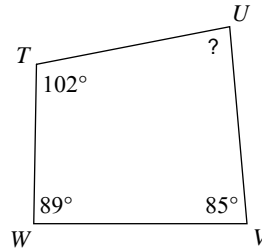
- A) 41°
- B) 105°
- C) 75°
- D) 52°

7)



- A) 80°
- B) 55°
- C) 100°
- D) 102°

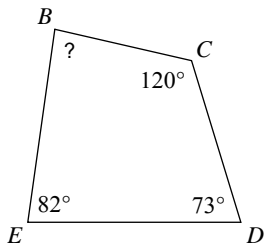
8)



- A) 35°
- B) 75°
- C) 84°
- D) 30°

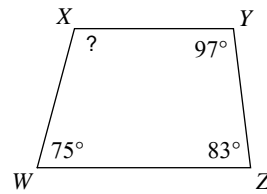


9)



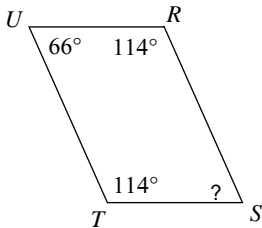
- A) 80° B) 84°
 C) 85° D) 35°

10)



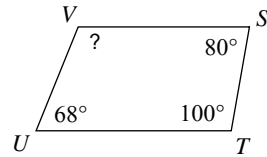
- A) 105° B) 78°
 C) 92° D) 95°

11)



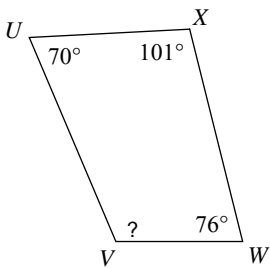
- A) 60° B) 40°
 C) 66° D) 55°

12)



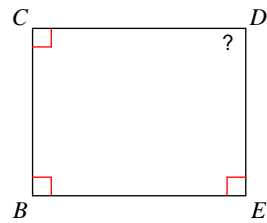
- A) 71° B) 80°
 C) 40° D) 112°

13)



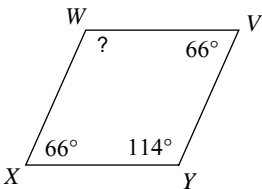
- A) 113° B) 80°
 C) 110° D) 62°

14)



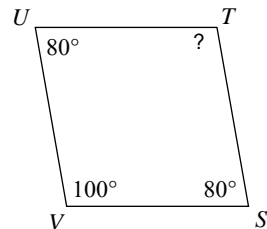
- A) 115° B) 90°
 C) 84° D) 88°

15)



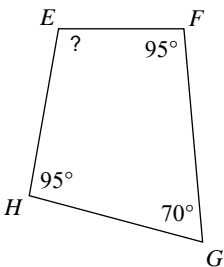
- A) 120° B) 114°
 C) 71° D) 78°

16)



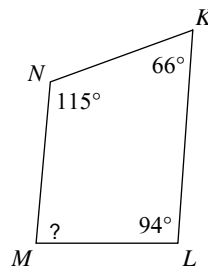
- A) 100° B) 84°
 C) 41° D) 92°

17)



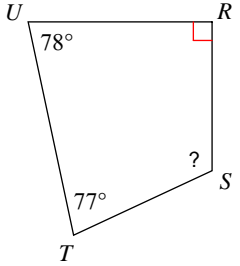
- A) 95° B) 100°

18)

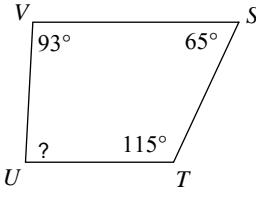


- A) 34° B) 35°
 C) 85° D) 56°

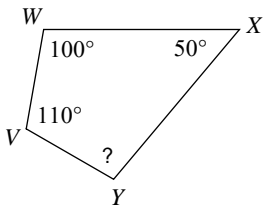


- 19) 

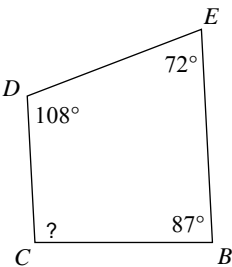
 A) 45° B) 50°
 C) 115° D) 55°

- 20) 

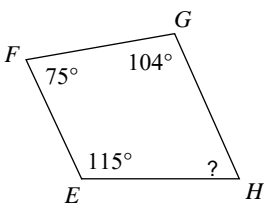
 A) 87° B) 89°
 C) 40° D) 66°

- 21) 

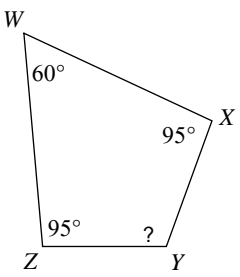
 A) 120° B) 100°
 C) 40° D) 90°

- 22) 

 A) 89° B) 40°
 C) 120° D) 93°

- 23) 

 A) 66° B) 83°
 C) 75° D) 95°

- 24) 

 A) 65° B) 110°
 C) 88° D) 35°



Answers to Assignment (ID: 7)

- 1) B
- 5) C
- 9) C
- 13) A
- 17) B
- 21) B

- 2) B
- 6) B
- 10) A
- 14) B
- 18) C
- 22) D

- 3) C
- 7) D
- 11) C
- 15) B
- 19) C
- 23) A

- 4) D
- 8) C
- 12) D
- 16) A
- 20) A
- 24) B

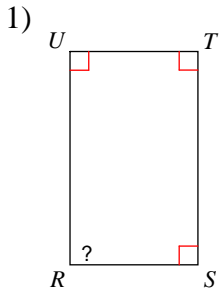


Assignment

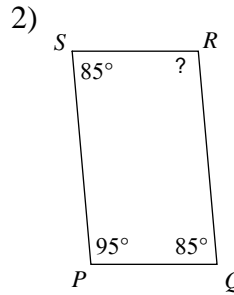
Name _____

Date _____ Period _____

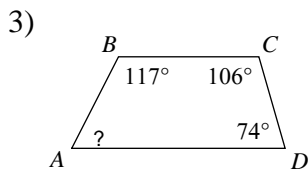
Find the measure of each angle indicated.



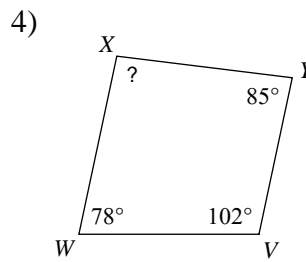
- A) 80° B) 30°
 C) 85° D) 90°



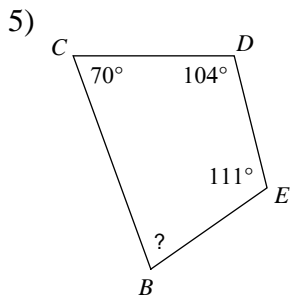
- A) 45° B) 75°
 C) 62° D) 95°



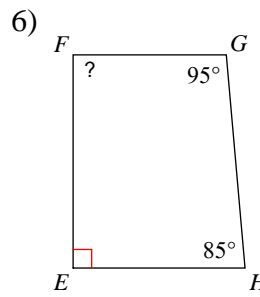
- A) 95° B) 60°
 C) 63° D) 58°



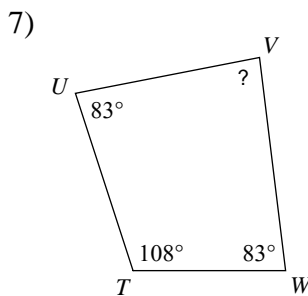
- A) 95° B) 104°
 C) 90° D) 65°



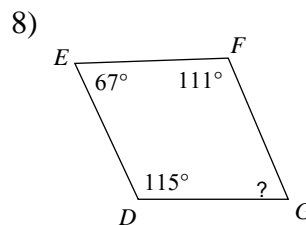
- A) 90° B) 75°
 C) 50° D) 60°



- A) 100° B) 105°
 C) 72° D) 90°

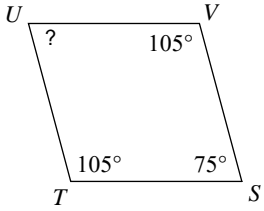


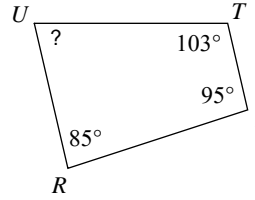
- A) 40° B) 86°
 C) 120° D) 75°

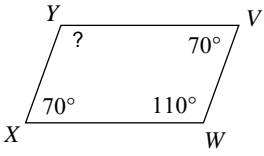


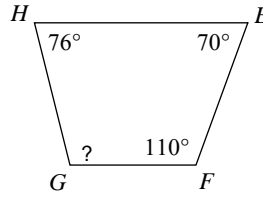
- A) 67° B) 50°
 C) 54° D) 95°

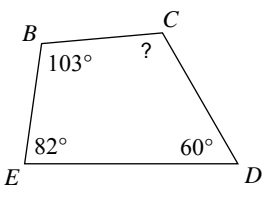


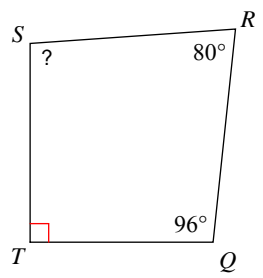
- 9) 
- A) 80° B) 60°
 C) 75° D) 70°

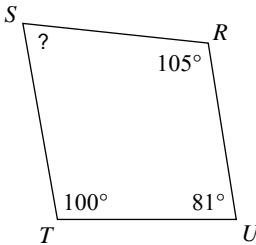
- 10) 
- A) 77° B) 36°
 C) 38° D) 86°

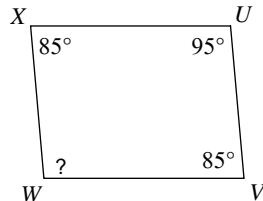
- 11) 
- A) 110° B) 90°
 C) 50° D) 54°

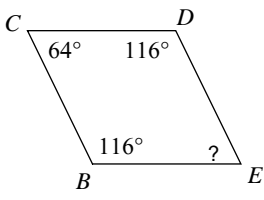
- 12) 
- A) 45° B) 110°
 C) 95° D) 104°

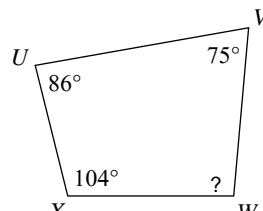
- 13) 
- A) 64° B) 115°
 C) 82° D) 35°

- 14) 
- A) 65° B) 94°
 C) 90° D) 110°

- 15) 
- A) 80° B) 74°
 C) 45° D) 94°

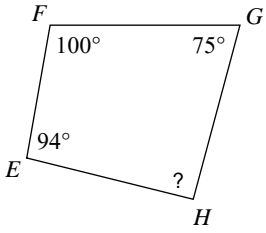
- 16) 
- A) 85° B) 35°
 C) 102° D) 95°

- 17) 
- A) 64° B) 104°
 C) 40° D) 76°

- 18) 
- A) 70° B) 113°
 C) 95° D) 40°

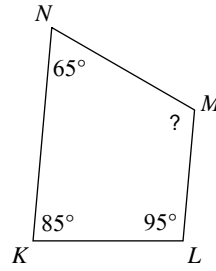


19)



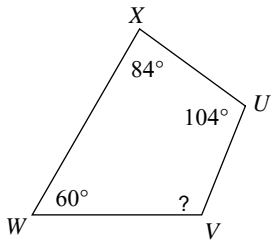
- A) 60° B) 115°
 C) 91° D) 38°

20)



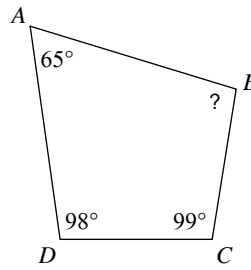
- A) 30° B) 90°
 C) 112° D) 115°

21)



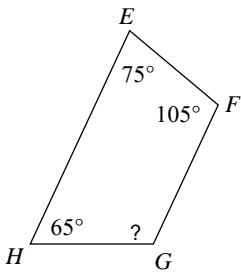
- A) 115° B) 112°
 C) 60° D) 75°

22)



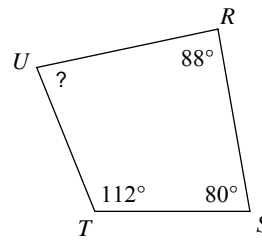
- A) 85° B) 98°
 C) 100° D) 110°

23)



- A) 100° B) 115°
 C) 52° D) 45°

24)



- A) 50° B) 55°
 C) 80° D) 107°



Answers to Assignment (ID: 8)

1) D
5) B
9) C
13) B
17) A
21) B

2) D
6) D
10) A
14) B
18) C
22) B

3) C
7) B
11) A
15) B
19) C
23) B

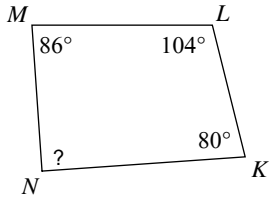
4) A
8) A
12) D
16) D
20) D
24) C



Assignment

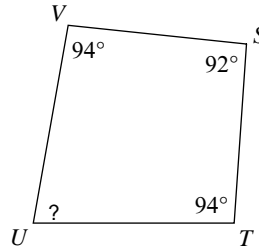
Find the measure of each angle indicated.

1)



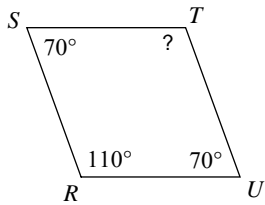
- A) 105°
- B) 60°
- C) 90°
- D) 95°

2)



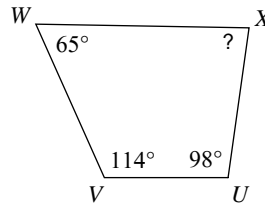
- A) 36°
- B) 80°
- C) 30°
- D) 31°

3)



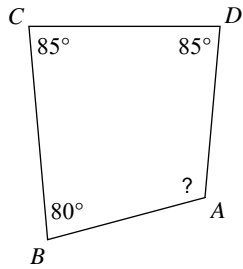
- A) 111°
- B) 88°
- C) 50°
- D) 110°

4)



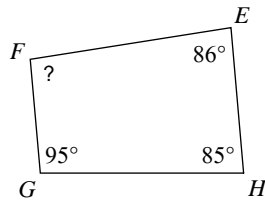
- A) 55°
- B) 40°
- C) 83°
- D) 60°

5)



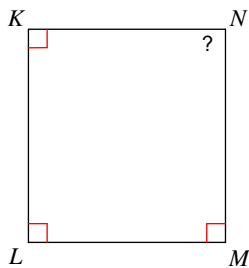
- A) 46°
- B) 48°
- C) 110°
- D) 70°

6)



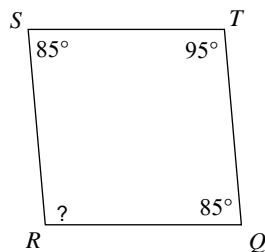
- A) 94°
- B) 55°
- C) 80°
- D) 85°

7)



- A) 90°
- B) 105°
- C) 58°
- D) 70°

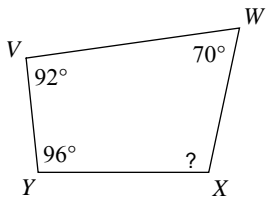
8)



- A) 95°
- B) 70°
- C) 69°
- D) 84°

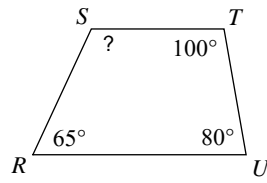


9)



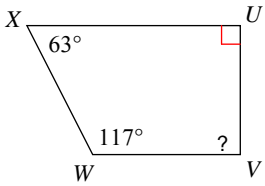
- A) 102° B) 103°
 C) 76° D) 75°

10)



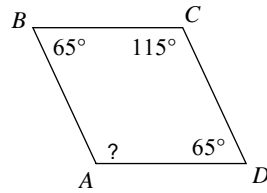
- A) 90° B) 108°
 C) 75° D) 115°

11)



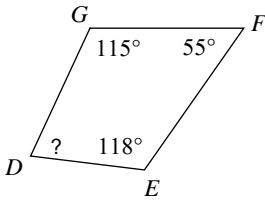
- A) 90° B) 110°
 C) 80° D) 30°

12)



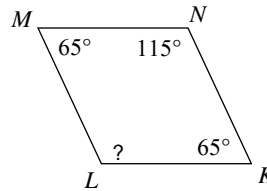
- A) 115° B) 80°
 C) 100° D) 34°

13)



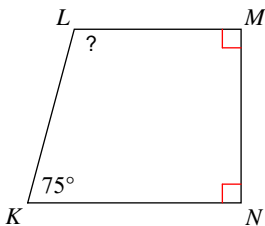
- A) 64° B) 53°
 C) 72° D) 104°

14)



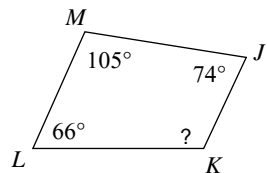
- A) 85° B) 115°
 C) 65° D) 88°

15)



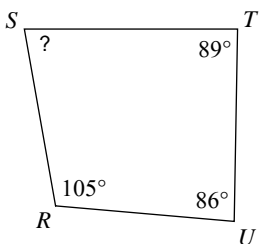
- A) 110° B) 104°
 C) 56° D) 105°

16)



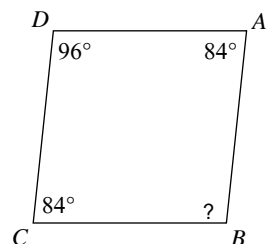
- A) 50° B) 82°
 C) 115° D) 65°

17)



- A) 30° B) 100°
 C) 80° D) 70°

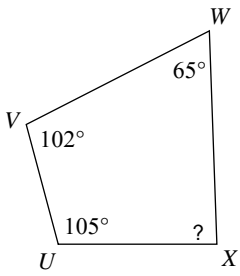
18)



- A) 92° B) 100°
 C) 96° D) 79°

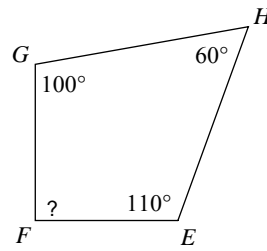


19)



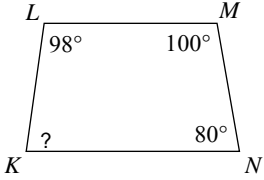
- A) 110° B) 88°
C) 68° D) 74°

20)



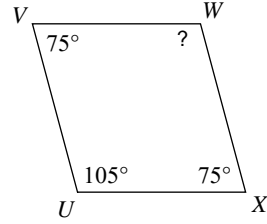
- A) 90° B) 40°
C) 55° D) 64°

21)



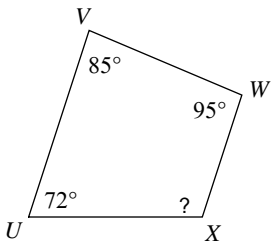
- A) 30° B) 95°
C) 82° D) 85°

22)



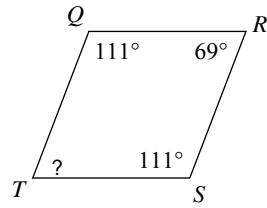
- A) 80° B) 103°
C) 70° D) 105°

23)



- A) 108° B) 35°
C) 45° D) 104°

24)



- A) 120° B) 69°
C) 36° D) 80°



Answers to Assignment (ID: 9)

1) C
5) C
9) A
13) C
17) C
21) C

2) B
6) A
10) D
14) B
18) C
22) D

3) D
7) A
11) A
15) D
19) B
23) A

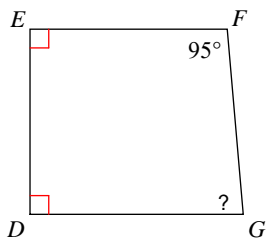
4) C
8) A
12) A
16) C
20) A
24) B



Assignment

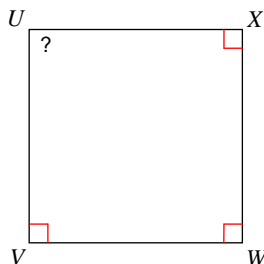
Find the measure of each angle indicated.

1)



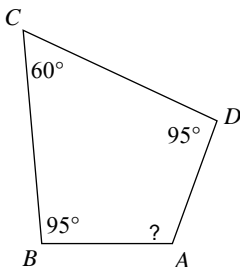
- A) 74° B) 78°
 C) 85° D) 80°

2)



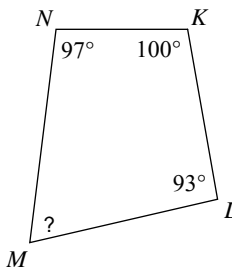
- A) 105° B) 90°
 C) 45° D) 75°

3)



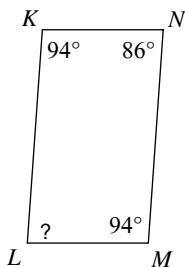
- A) 112° B) 110°
 C) 108° D) 35°

4)



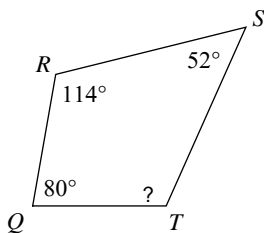
- A) 40° B) 70°
 C) 105° D) 85°

5)



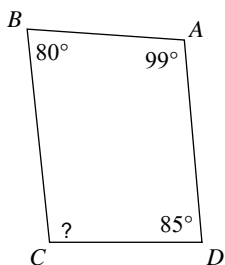
- A) 86° B) 55°
 C) 80° D) 77°

6)



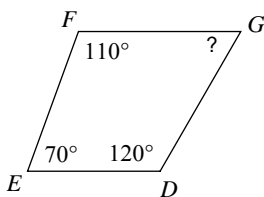
- A) 96° B) 114°
 C) 110° D) 78°

7)



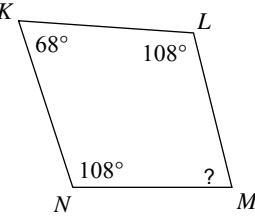
- A) 95° B) 105°
 C) 96° D) 115°

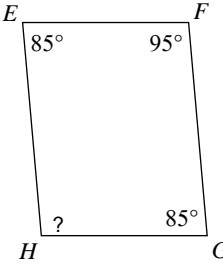
8)

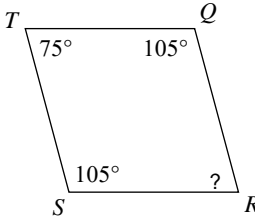


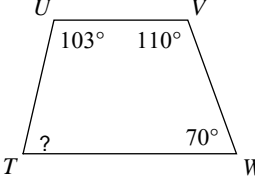
- A) 119° B) 109°
 C) 60° D) 95°

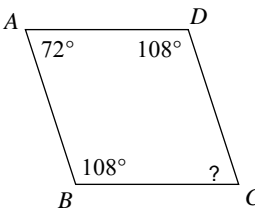


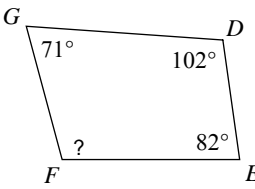
- 9) 
 A) 78° B) 76°
 C) 95° D) 114°

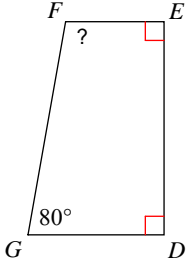
- 10) 
 A) 107° B) 95°
 C) 40° D) 118°

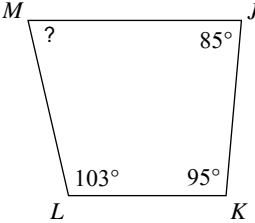
- 11) 
 A) 116° B) 75°
 C) 118° D) 70°

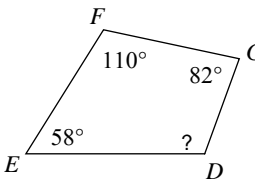
- 12) 
 A) 77° B) 35°
 C) 96° D) 55°

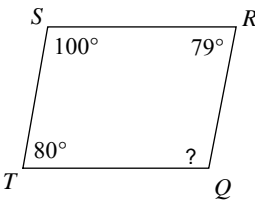
- 13) 
 A) 100° B) 45°
 C) 38° D) 72°

- 14) 
 A) 80° B) 105°
 C) 70° D) 110°

- 15) 
 A) 100° B) 80°
 C) 90° D) 108°

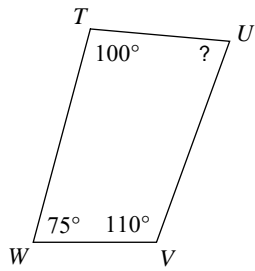
- 16) 
 A) 82° B) 95°
 C) 85° D) 77°

- 17) 
 A) 109° B) 115°
 C) 102° D) 110°

- 18) 
 A) 120° B) 100°
 C) 54° D) 101°

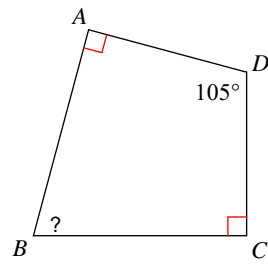


19)



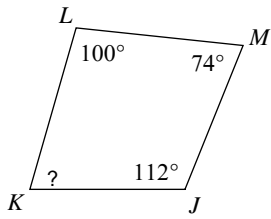
- A) 65° B) 58°
 C) 30° D) 75°

20)



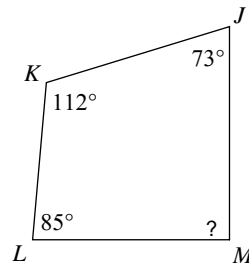
- A) 75° B) 90°
 C) 110° D) 120°

21)



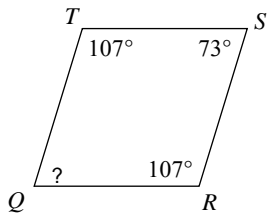
- A) 40° B) 74°
 C) 65° D) 82°

22)



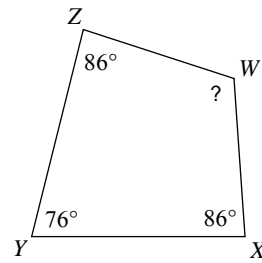
- A) 90° B) 115°
 C) 120° D) 76°

23)



- A) 73° B) 60°
 C) 55° D) 110°

24)



- A) 75° B) 90°
 C) 110° D) 112°



Answers to Assignment (ID: 10)

1) C
5) A
9) B
13) D
17) D
21) B

2) B
6) B
10) B
14) B
18) D
22) A

3) B
7) C
11) B
15) A
19) D
23) A

4) B
8) C
12) A
16) D
20) A
24) D

