

## Assignment

Date \_\_\_\_\_ Period \_\_\_\_\_

**Construct a line segment through the given point parallel to the given line segment.**

1)



2)



3)

•



4)

•



5)



6)



7)



•

8)



•



9)

---

•

10)

---

•



11)



•

12)



•



13)

---

•





14)



.



15)



16)



17)

---

•



18)



19)



20)

•

---

21)

•

---



22)

•

---

23)

•

---



24)

•



# Answers to Assignment (ID: 1)

1)



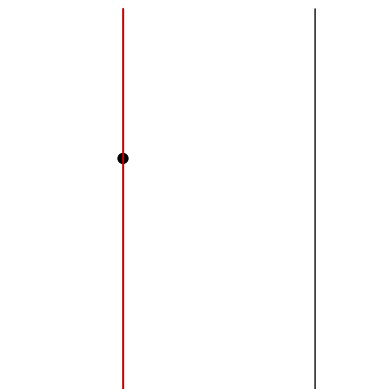
2)



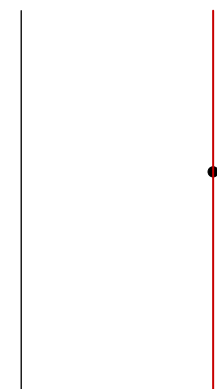
3)



4)



5)



6)



7)



8)



9)



10)





11) \_\_\_\_\_




12) \_\_\_\_\_



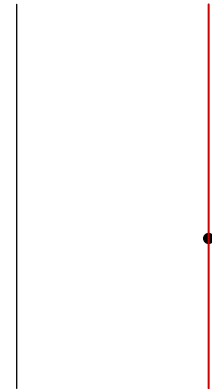
13) \_\_\_\_\_



14) \_\_\_\_\_



15) \_\_\_\_\_




16) \_\_\_\_\_



17) \_\_\_\_\_



18) \_\_\_\_\_



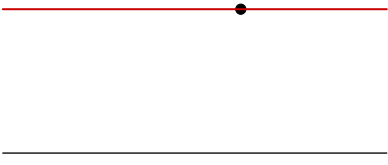
19) \_\_\_\_\_




20) \_\_\_\_\_




21)




22)



23)



24)



## Assignment

Date \_\_\_\_\_ Period \_\_\_\_\_

**Construct a line segment through the given point parallel to the given line segment.**

1)

---

•

2)

---

•



3)

•



4)

•



5)

•

---

6)

•

---



7)

---

•

8)

---

•



9)

---

•





10)

---

•

11)

---

•



12)

---

•

13)

•

|



14)

---

•

15)

•

---



16)

•

---

17)

•

---



18)

•

---

19)

•

---



20)

•

---

21)

•

---



22)

•

---

23)

•

---



24)

•





# Answers to Assignment (ID: 2)

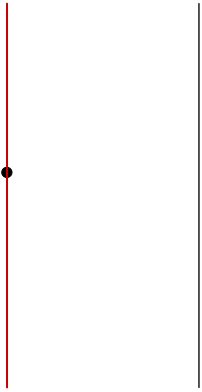
1) \_\_\_\_\_




2) \_\_\_\_\_



3) \_\_\_\_\_



4) \_\_\_\_\_



5) \_\_\_\_\_



6) \_\_\_\_\_



7) \_\_\_\_\_



8) \_\_\_\_\_



9) \_\_\_\_\_



10) \_\_\_\_\_




11) \_\_\_\_\_




12) \_\_\_\_\_



13)




14)



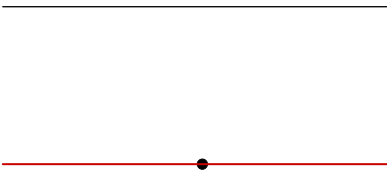
15)



16)




17)



18)



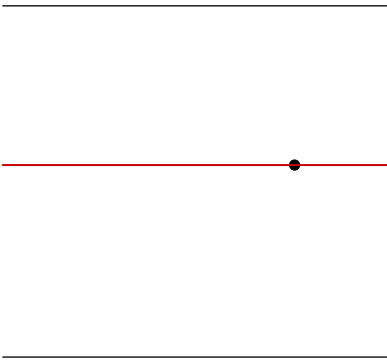
19)



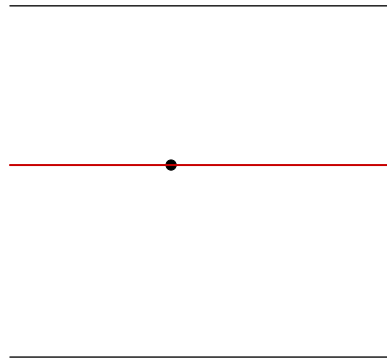
20)



21)



22)



23)



24)



## Assignment

Date \_\_\_\_\_ Period \_\_\_\_\_

**Construct a line segment through the given point parallel to the given line segment.**

1)



2)



3)



•

4)



•



5)

---

•

6)

---

•



7)

---

•

8)

---

•



9)



•

10)



•





11)

•



12)

•



13)

•



14)

•



15)

---

•

16)

•

---



17)

•

---

18)

•

---



19)

•

---

20)

•

---



21)

•

---

22)

•





23)

---

•

24)

---

•



# Answers to Assignment (ID: 3)

1)



2)



3)



4)



5)



6)



7)



8)




9)




10)



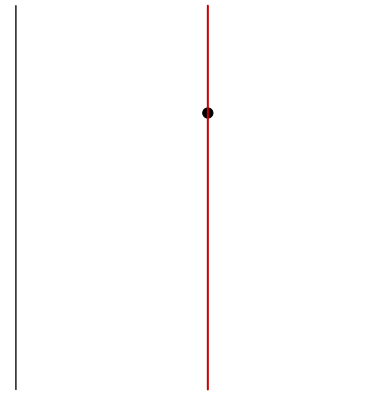
11)



12)



13)



14)



15)



16)



17)



18)



19)



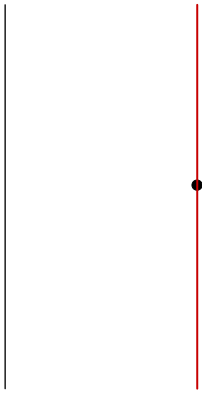
20)



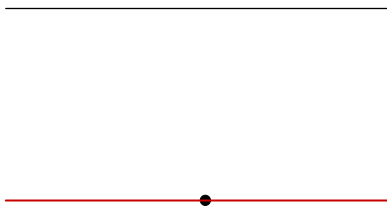
21)



22)



23)



24)



## Assignment

Date \_\_\_\_\_ Period \_\_\_\_\_

**Construct a line segment through the given point parallel to the given line segment.**

1)



2)

---

•

3)

---

•



4)



•

5)



•



6)

---

•

7)

---

•





8)



•

9)



•



10)

---

•



11)

•

12)

•



13)

•

---

14)

•

---



15)

•

---

16)

•

---



17)

•

---

18)

•

---



19)

•



20)

•





21)

•

22)

•



23)

•

---

24)

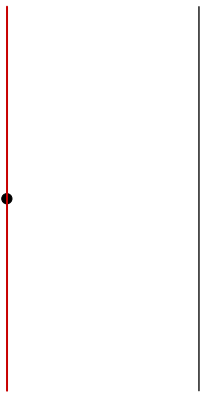
---

•

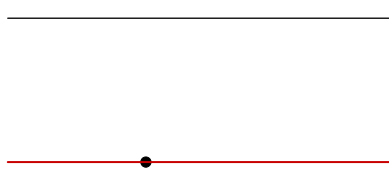


# Answers to Assignment (ID: 4)

1)



2)




3)




4)




5)



6)



7)



8)




9)



10)



11)



12)



13)



14)



15)



16)




17)




18)




19)



20)



21)



22)



23)



24)



## Assignment

Date \_\_\_\_\_ Period \_\_\_\_\_

**Construct a line segment through the given point parallel to the given line segment.**

1)

---



2)



•

3)



•



4)

---

•

5)

---

•





6)

•



7)

•



8)

•

---

9)

---

•



10)

.



11)

---

.



12)

•

---

13)

•

---



14)

•

---

15)

•

---

16)

•

---



17)

•

---

18)

•

---



19)

•

---

20)

•





21)

---

•



22)

•



23)

---

•

24)

---

•



# Answers to Assignment (ID: 5)

1) \_\_\_\_\_



2) \_\_\_\_\_



3) \_\_\_\_\_



4) \_\_\_\_\_



5) \_\_\_\_\_



6) \_\_\_\_\_



7) \_\_\_\_\_




8) \_\_\_\_\_




9) \_\_\_\_\_




10) \_\_\_\_\_



11)



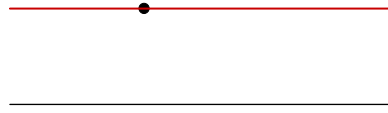
12)



13)



14)



15)



16)



17)



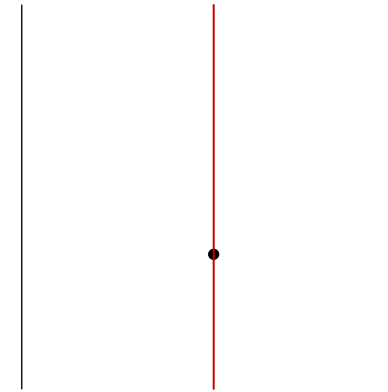
18)



19)




20)



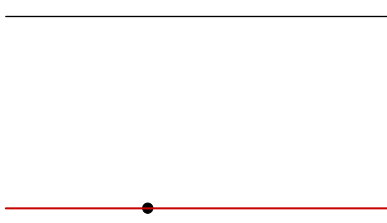
21)



22)



23)



24)



## Assignment

Date \_\_\_\_\_ Period \_\_\_\_

**Construct a line segment through the given point parallel to the given line segment.**

1)

---



2)

---



3)

---

•

4)

---

•





5)

---

•

6)

---

•



7)

---

•

8)

---

•



9)

•



10)

•



11)

•



12)

•



13)

•



14)

•

---

15)

•

---



16)

•

---

17)

---

•





18)

•

---

19)


•

---




20)

•



21)

•



22)

---

•

23)

---

•



•



# Answers to Assignment (ID: 6)

1) \_\_\_\_\_



2) \_\_\_\_\_



3) \_\_\_\_\_



4) \_\_\_\_\_



5) \_\_\_\_\_



6) \_\_\_\_\_



7) \_\_\_\_\_



8) \_\_\_\_\_



9) \_\_\_\_\_



10) \_\_\_\_\_



11) \_\_\_\_\_



12) \_\_\_\_\_



\_\_\_\_\_

\_\_\_\_\_




13)




14)



15)



16)



17)



18)



19)



20)




21)



22)



23)



24)



## Assignment

Date \_\_\_\_\_ Period \_\_\_\_\_

**Construct a line segment through the given point parallel to the given line segment.**

1)



2)





3)

•



4)

•



5)



.

6)

.



7)

.



8)

•

---

9)

•

---



10)

•

---

11)

•

---

12)

•

---



13)

•

---

14)

•

---



15)

•





16)

•



17)

•


18)

•



19)

•



20)

---

•

21)

---

•



22)

---

•

23)

---

•

24)

---

•



# Answers to Assignment (ID: 7)

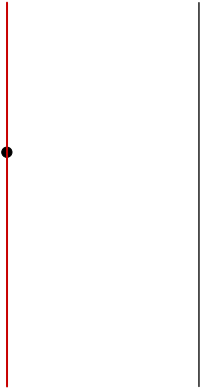
1) \_\_\_\_\_




2) \_\_\_\_\_



3) \_\_\_\_\_

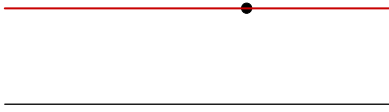


4) \_\_\_\_\_




5) \_\_\_\_\_

6) \_\_\_\_\_



7) \_\_\_\_\_



8) \_\_\_\_\_



9) \_\_\_\_\_



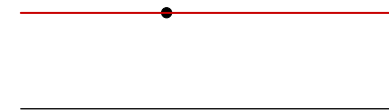
10) \_\_\_\_\_



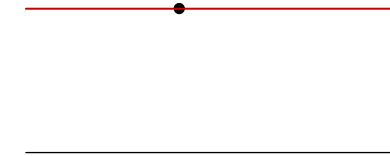
11) \_\_\_\_\_



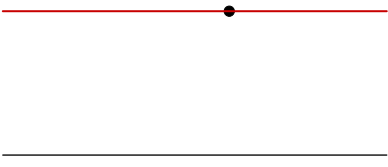
12) \_\_\_\_\_




13) \_\_\_\_\_




14)




15)



16)




17)



18)



19)



20)



21)



22)



23)



24)



## Assignment

Date \_\_\_\_\_ Period \_\_\_\_

**Construct a line segment through the given point parallel to the given line segment.**

1)



2)





3)

---

•

4)

•



5)

.



6)



7)



8)

•

---

9)

•

---

10)

•

---



11)



.



12)

.



13)

---

•



14)

•





15)

•



16)

•



17)

---

•

18)

---

•

19)

---

•



20)

---

•

21)

---

•



22)

---

•

23)

---

•

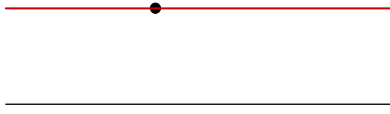


•




# Answers to Assignment (ID: 8)

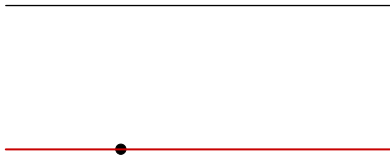
1)




2)




3)



4)




5)



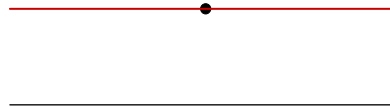
6)



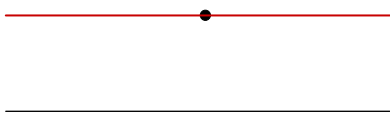
7)




8)

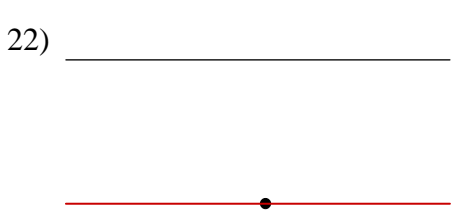



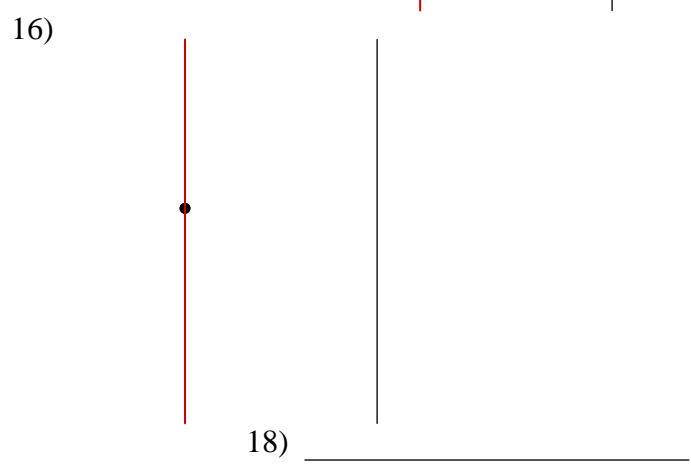
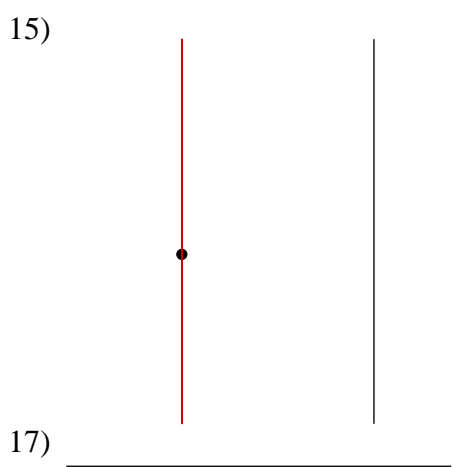


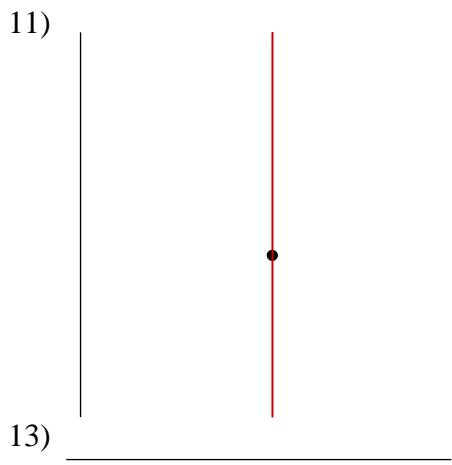


9)



10)







23) \_\_\_\_\_



24) \_\_\_\_\_



## Assignment

Date \_\_\_\_\_ Period \_\_\_\_

**Construct a line segment through the given point parallel to the given line segment.**

1)



2)

.



3)

•



4)

•

5)

•



6)

•

---

7)

•

---

8)

•

---

9)

•



10)

•

---

11)

•



12)

•





13)

•



14)

•



15)

•

16)

•



17)

---

•

18)

---

•

19)

---

•



20)

---

•

21)

---

•



22)

•

---

23)

•




24)

.



# Answers to Assignment (ID: 9)


1)



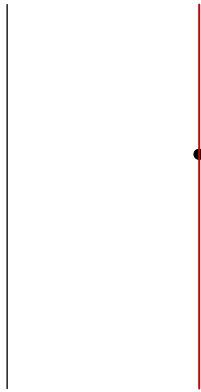
2)



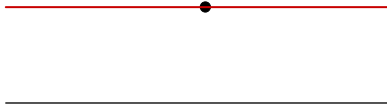
3)



4)



5)



6)



7)



8)




9)



10)




11)






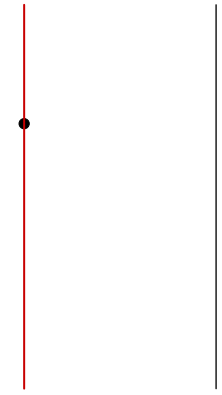
12)




13)




14)



15)



16)



17)



18)



19)



20)




21)




22)



23)



24)



## Assignment

**Construct a line segment through the given point parallel to the given line segment.**

1)



2)



3)

---

•

4)

•

---



5)

•

---

6)

•

---

7)

•

---



8)

•

---

9)

•

---



10)

•



11)

•



12)

•





13)

•

14)

•



15)

---

•

16)

---

•

17)

---

•



18)

---

•

19)

---

•



20)

---

•

21)

---

•



22)

•



23)

.




24)

.



# Answers to Assignment (ID: 10)

1)



2)



3)



4)



5)



6)



7)




8)



9)




10)






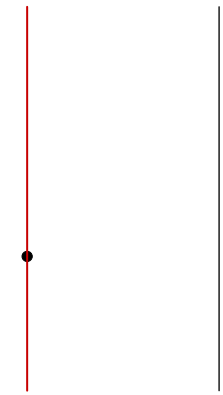
11)




12)



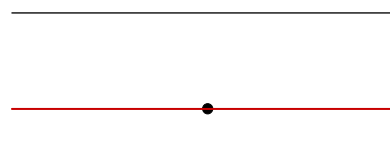
13)



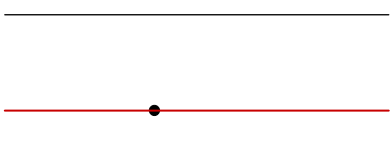
14)



15)



16)



17)



18)



19)



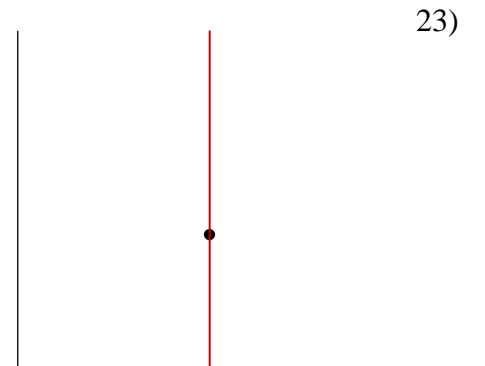
20)




21)



22)



23)



24)

