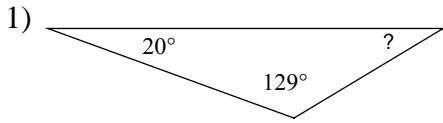


Assignment

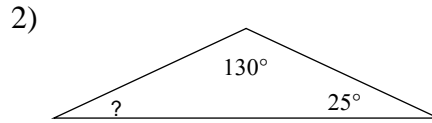
Name _____

Date _____ Period _____

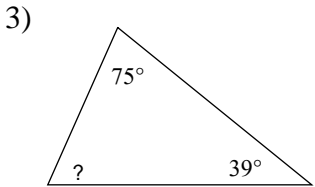
Find the measure of each angle indicated.



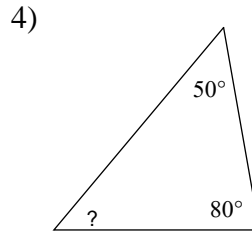
- A) 33°
- B) 136°
- C) 36°
- D) 31°



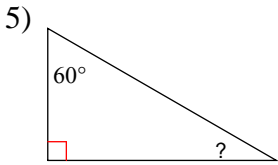
- A) 140°
- B) 21°
- C) 105°
- D) 25°



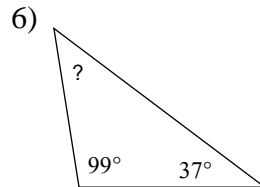
- A) 139°
- B) 66°
- C) 138°
- D) 116°



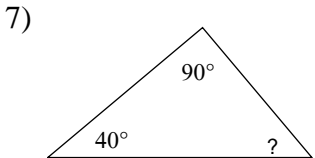
- A) 50°
- B) 35°
- C) 100°
- D) 55°



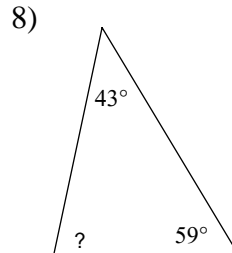
- A) 40°
- B) 33°
- C) 30°
- D) 29°



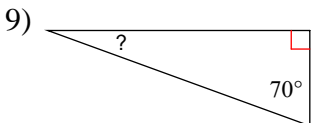
- A) 155°
- B) 44°
- C) 34°
- D) 54°



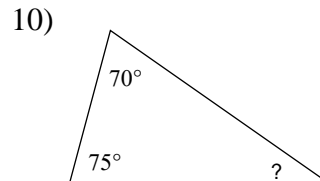
- A) 70°
- B) 58°
- C) 50°
- D) 57°



- A) 131°
- B) 78°
- C) 67°
- D) 143°



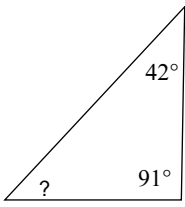
- A) 20°
- B) 26°
- C) 23°
- D) 21°



- A) 105°
- B) 33°
- C) 35°
- D) 26°

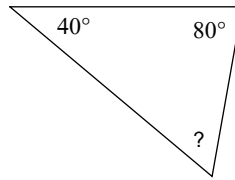


11)



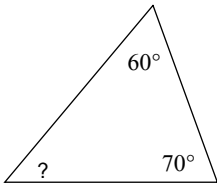
- A) 47° B) 38°
C) 41° D) 85°

12)



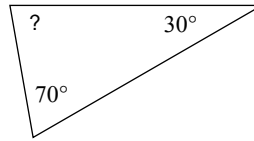
- A) 71° B) 160°
C) 60° D) 63°

13)



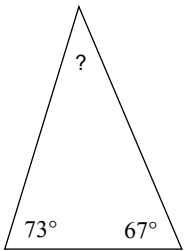
- A) 40° B) 119°
C) 120° D) 50°

14)



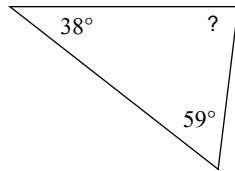
- A) 120° B) 25°
C) 80° D) 59°

15)



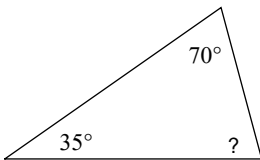
- A) 45° B) 44°
C) 40° D) 57°

16)



- A) 108° B) 93°
C) 83° D) 32°

17)



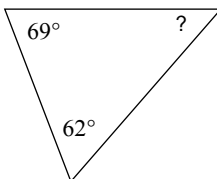
- A) 70° B) 63°
C) 98° D) 75°

18)



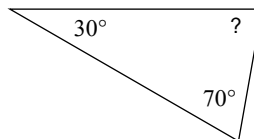
- A) 21° B) 20°
C) 160° D) 90°

19)



- A) 49° B) 31°
C) 39° D) 90°

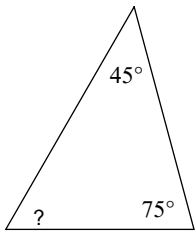
20)



- A) 155° B) 80°
C) 65° D) 103°

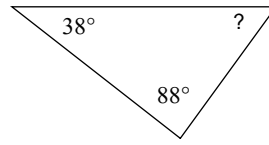


21)



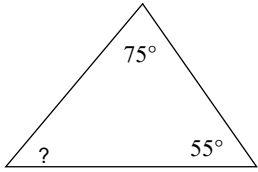
- A) 65° B) 105°
C) 60° D) 45°

22)



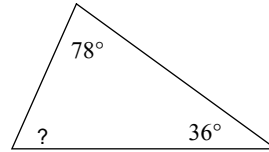
- A) 54° B) 31°
C) 95° D) 45°

23)



- A) 50° B) 125°
C) 60° D) 90°

24)



- A) 66° B) 70°
C) 58° D) 80°



Answers to Assignment (ID: 1)

1) D
5) C
9) A
13) D
17) D
21) C

2) D
6) B
10) C
14) C
18) B
22) A

3) B
7) C
11) A
15) C
19) A
23) A

4) A
8) B
12) C
16) C
20) B
24) A



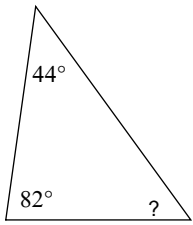
Assignment

Name _____

Date _____ Period _____

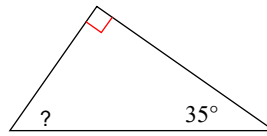
Find the measure of each angle indicated.

1)



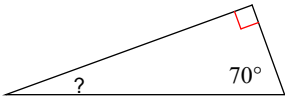
- A) 72°
- B) 45°
- C) 54°
- D) 47°

2)



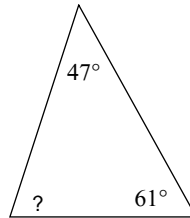
- A) 30°
- B) 45°
- C) 63°
- D) 55°

3)



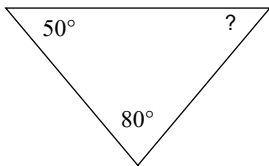
- A) 21°
- B) 26°
- C) 25°
- D) 20°

4)



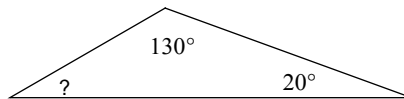
- A) 49°
- B) 151°
- C) 72°
- D) 46°

5)



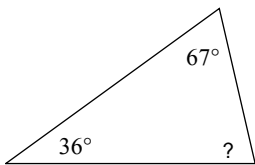
- A) 75°
- B) 61°
- C) 65°
- D) 50°

6)



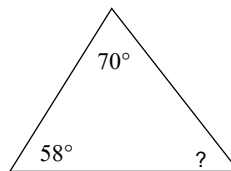
- A) 145°
- B) 30°
- C) 129°
- D) 50°

7)



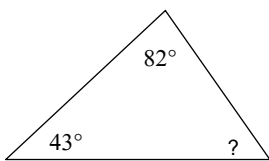
- A) 57°
- B) 81°
- C) 77°
- D) 65°

8)



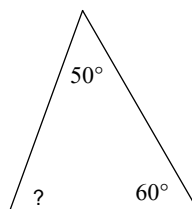
- A) 60°
- B) 150°
- C) 52°
- D) 120°

9)



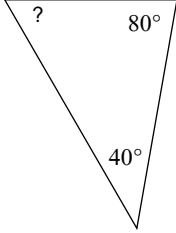
- A) 55°
- B) 64°
- C) 53°
- D) 120°

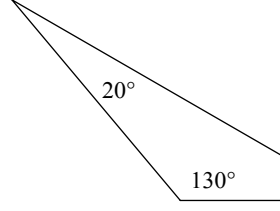
10)

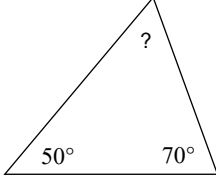


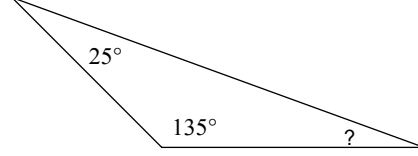
- A) 70°
- B) 79°
- C) 85°
- D) 65°

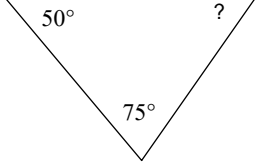


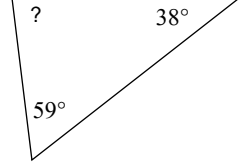
- 11) 
A) 71° B) 60°
C) 150° D) 58°

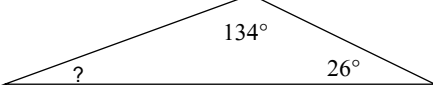
- 12) 
A) 39° B) 30°
C) 150° D) 38°

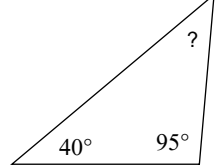
- 13) 
A) 46° B) 60°
C) 70° D) 75°

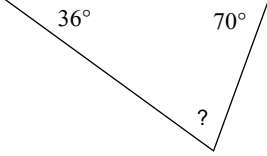
- 14) 
A) 140° B) 20°
C) 150° D) 130°

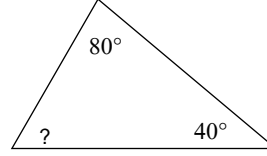
- 15) 
A) 85° B) 58°
C) 90° D) 55°

- 16) 
A) 83° B) 81°
C) 62° D) 109°

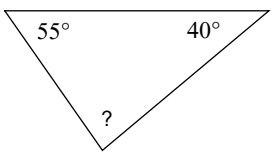
- 17) 
A) 25° B) 150°
C) 20° D) 55°

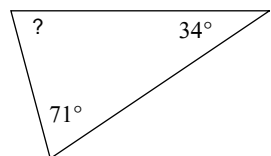
- 18) 
A) 53° B) 58°
C) 80° D) 45°

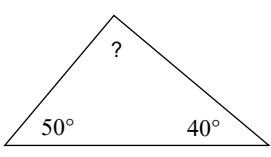
- 19) 
A) 70° B) 67°
C) 65° D) 74°

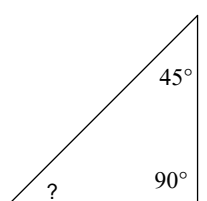
- 20) 
A) 90° B) 60°
C) 75° D) 25°



- 21) 
A) 59° B) 50°
C) 85° D) 83°

- 22) 
A) 135° B) 95°
C) 70° D) 75°

- 23) 
A) 90° B) 93°
C) 50° D) 77°

- 24) 
A) 32° B) 50°
C) 43° D) 45°



Answers to Assignment (ID: 2)

1) C
5) D
9) A
13) B
17) C
21) C

2) D
6) B
10) A
14) B
18) D
22) D

3) D
7) C
11) B
15) D
19) D
23) A

4) C
8) C
12) B
16) A
20) B
24) D

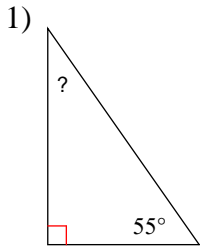


Assignment

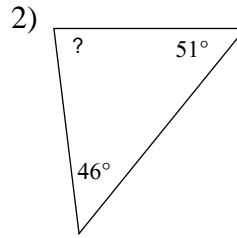
Name _____

Date _____ Period _____

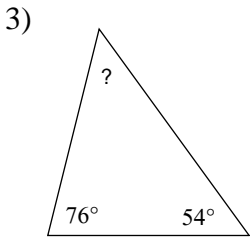
Find the measure of each angle indicated.



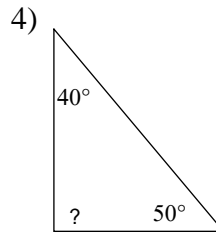
- A) 33° B) 35°
 C) 40° D) 110°



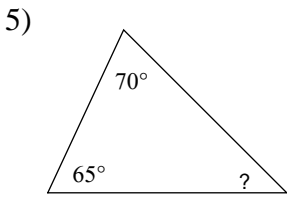
- A) 57° B) 89°
 C) 83° D) 58°



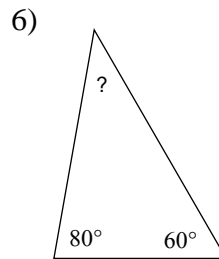
- A) 65° B) 55°
 C) 45° D) 50°



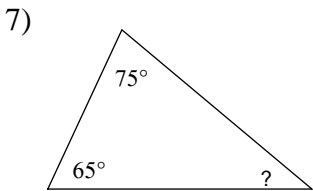
- A) 113° B) 90°
 C) 55° D) 115°



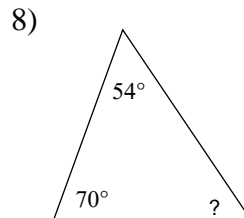
- A) 50° B) 40°
 C) 45° D) 55°



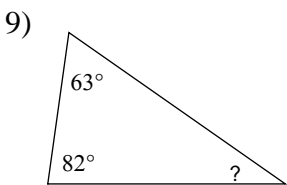
- A) 40° B) 115°
 C) 130° D) 52°



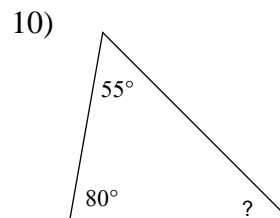
- A) 40° B) 75°
 C) 155° D) 131°



- A) 56° B) 85°
 C) 23° D) 59°



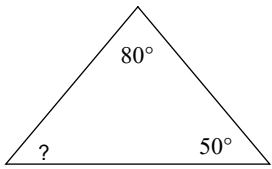
- A) 30° B) 35°
 C) 65° D) 38°



- A) 40° B) 52°
 C) 45° D) 35°

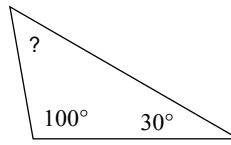


11)



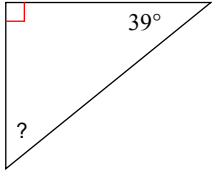
- A) 102° B) 50°
C) 54° D) 85°

12)



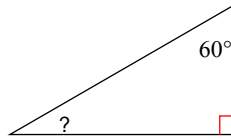
- A) 110° B) 40°
C) 48° D) 50°

13)



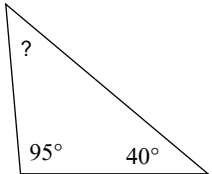
- A) 55° B) 51°
C) 154° D) 136°

14)



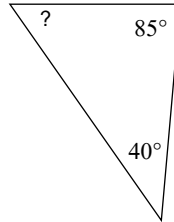
- A) 37° B) 29°
C) 34° D) 30°

15)



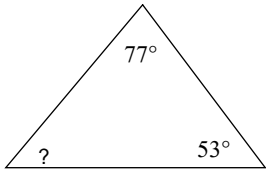
- A) 40° B) 70°
C) 45° D) 43°

16)



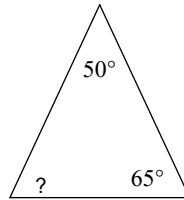
- A) 52° B) 55°
C) 50° D) 42°

17)



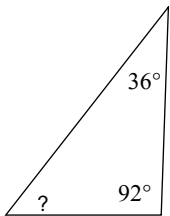
- A) 50° B) 45°
C) 75° D) 55°

18)



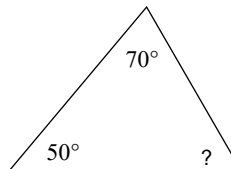
- A) 65° B) 70°
C) 40° D) 60°

19)



- A) 44° B) 52°
C) 36° D) 50°

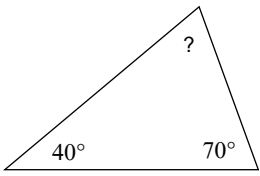
20)



- A) 48° B) 60°
C) 65° D) 115°

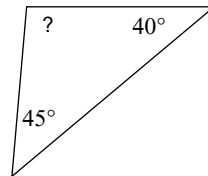


21)



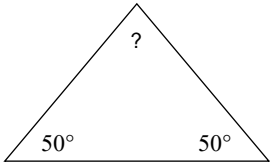
- A) 70° B) 135°
C) 55° D) 20°

22)



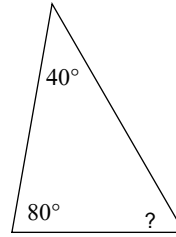
- A) 115° B) 160°
C) 95° D) 35°

23)



- A) 60° B) 150°
C) 80° D) 100°

24)



- A) 43° B) 60°
C) 160° D) 65°



Answers to Assignment (ID: 3)

1) B
5) C
9) B
13) B
17) A
21) A

2) C
6) A
10) C
14) D
18) A
22) C

3) D
7) A
11) B
15) C
19) B
23) C

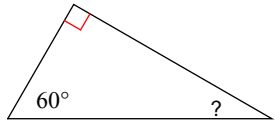
4) B
8) A
12) D
16) B
20) B
24) B



Assignment

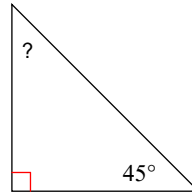
Find the measure of each angle indicated.

1)



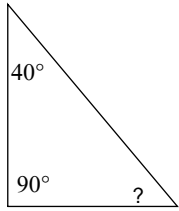
- A) 135° B) 29°
 C) 45° D) 30°

2)



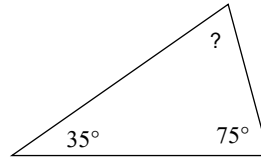
- A) 35° B) 50°
 C) 59° D) 45°

3)



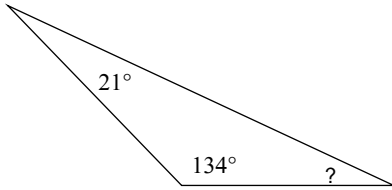
- A) 50° B) 145°
 C) 110° D) 40°

4)



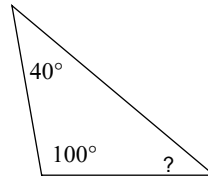
- A) 135° B) 25°
 C) 70° D) 68°

5)



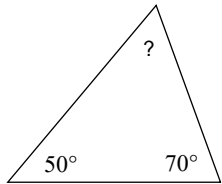
- A) 25° B) 50°
 C) 155° D) 120°

6)



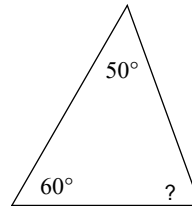
- A) 50° B) 130°
 C) 37° D) 40°

7)



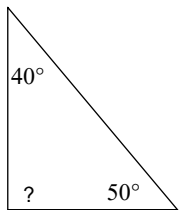
- A) 160° B) 60°
 C) 62° D) 135°

8)



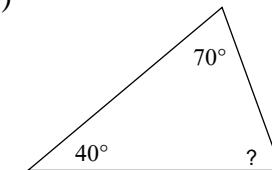
- A) 115° B) 79°
 C) 70° D) 20°

9)



- A) 112° B) 105°
 C) 90° D) 65°

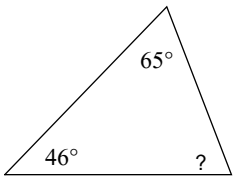
10)



- A) 50° B) 70°
 C) 25° D) 20°

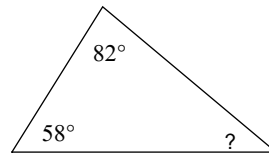


11)



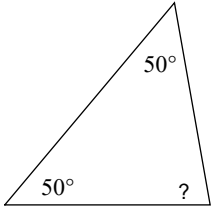
- A) 86° B) 50°
 C) 69° D) 80°

12)



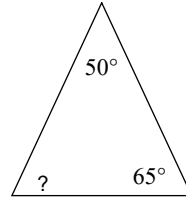
- A) 40° B) 45°
 C) 25° D) 30°

13)



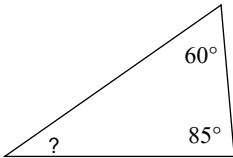
- A) 85° B) 84°
 C) 80° D) 101°

14)



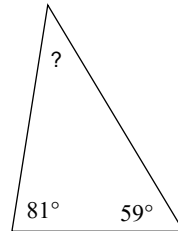
- A) 78° B) 135°
 C) 65° D) 46°

15)



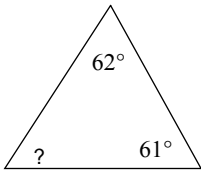
- A) 35° B) 30°
 C) 25° D) 45°

16)



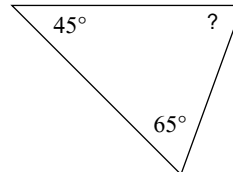
- A) 40° B) 51°
 C) 30° D) 50°

17)



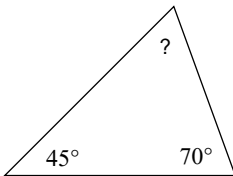
- A) 44° B) 115°
 C) 57° D) 70°

18)



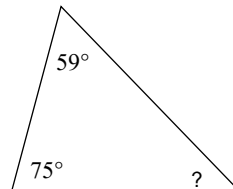
- A) 87° B) 70°
 C) 65° D) 30°

19)



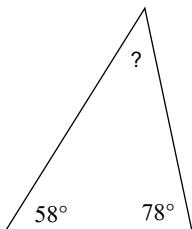
- A) 150° B) 81°
 C) 60° D) 65°

20)



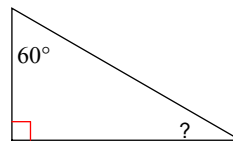
- A) 100° B) 46°
 C) 39° D) 35°

21)



- A) 44° B) 35°

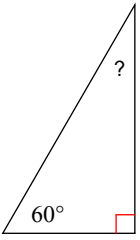
22)



- A) 50° B) 60°
 C) 95° D) 30°

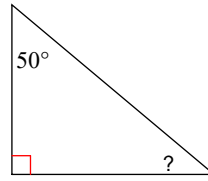


23)



- A) 29° B) 30°
C) 130° D) 22°

24)



- A) 50° B) 30°
C) 135° D) 40°



Answers to Assignment (ID: 4)

1) D
5) A
9) C
13) C
17) C
21) A

2) D
6) D
10) B
14) C
18) B
22) D

3) A
7) B
11) C
15) A
19) D
23) B

4) C
8) C
12) A
16) A
20) B
24) D

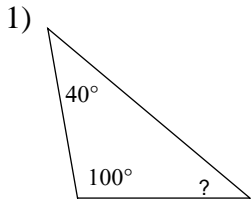


Assignment

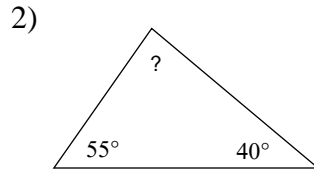
Name _____

Date _____ Period _____

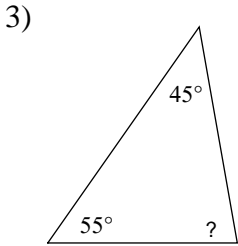
Find the measure of each angle indicated.



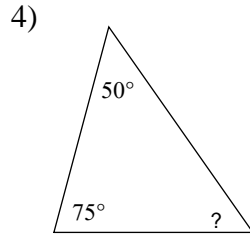
- A) 110°
- B) 50°
- C) 40°
- D) 80°



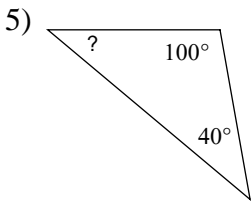
- A) 90°
- B) 85°
- C) 73°
- D) 30°



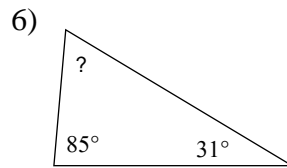
- A) 30°
- B) 59°
- C) 70°
- D) 80°



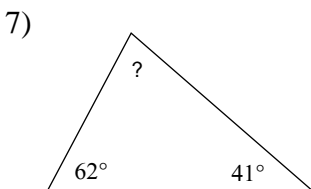
- A) 62°
- B) 55°
- C) 45°
- D) 80°



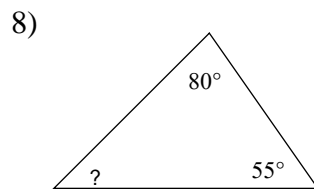
- A) 90°
- B) 45°
- C) 95°
- D) 40°



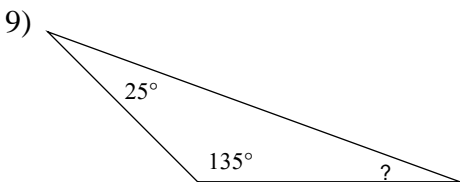
- A) 123°
- B) 160°
- C) 54°
- D) 64°



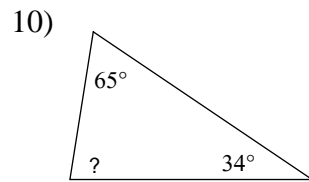
- A) 96°
- B) 77°
- C) 119°
- D) 126°



- A) 32°
- B) 45°
- C) 50°
- D) 120°

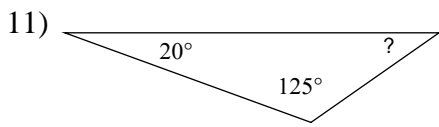


- A) 75°
- B) 23°
- C) 21°
- D) 20°

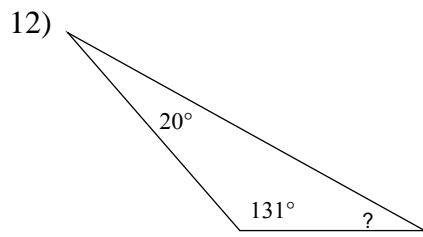


- A) 81°
- B) 96°
- C) 73°
- D) 103°

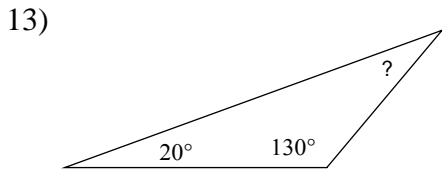




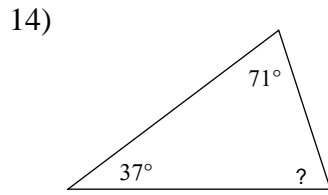
- A) 28° B) 40°
 C) 35° D) 20°



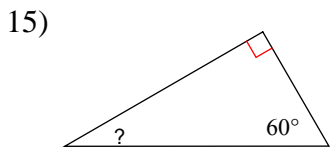
- A) 24° B) 33°
 C) 29° D) 26°



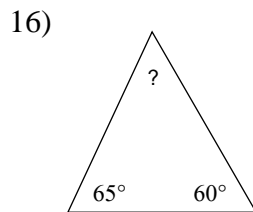
- A) 27° B) 80°
 C) 30° D) 61°



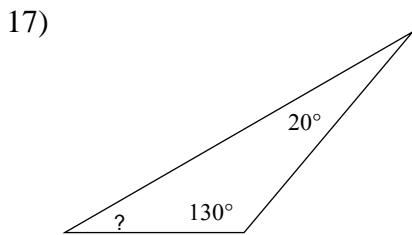
- A) 141° B) 65°
 C) 60° D) 72°



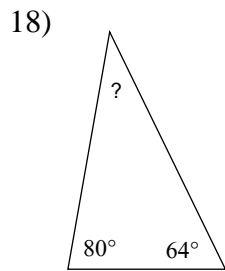
- A) 30° B) 36°
 C) 55° D) 49°



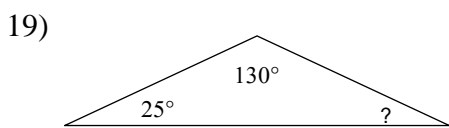
- A) 95° B) 90°
 C) 55° D) 145°



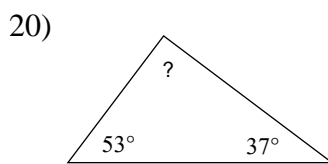
- A) 39° B) 30°
 C) 36° D) 21°



- A) 40° B) 36°
 C) 43° D) 52°



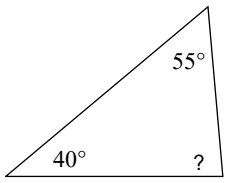
- A) 145° B) 25°
 C) 23° D) 31°



- A) 120° B) 63°
 C) 90° D) 101°

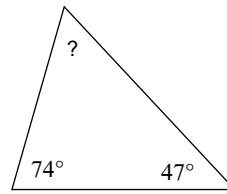


21)



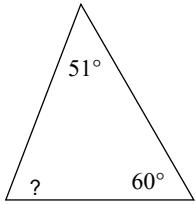
- A) 35° B) 135°
C) 85° D) 105°

22)



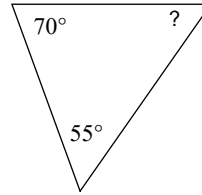
- A) 59° B) 60°
C) 41° D) 74°

23)



- A) 78° B) 69°
C) 50° D) 157°

24)



- A) 64° B) 70°
C) 55° D) 80°



Answers to Assignment (ID: 5)

1) C
5) D
9) D
13) C
17) B
21) C

2) B
6) D
10) A
14) D
18) B
22) A

3) D
7) B
11) C
15) A
19) B
23) B

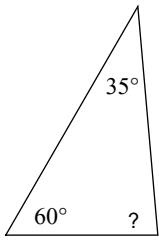
4) B
8) B
12) C
16) C
20) C
24) C



Assignment

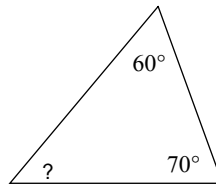
Find the measure of each angle indicated.

1)



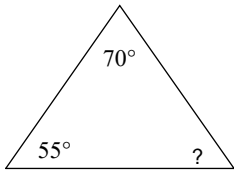
- A) 71°
- B) 30°
- C) 70°
- D) 85°

2)



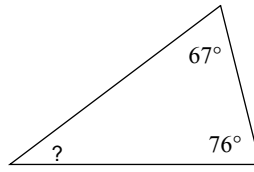
- A) 70°
- B) 50°
- C) 130°
- D) 20°

3)



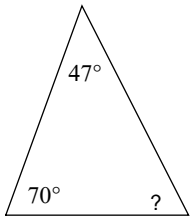
- A) 50°
- B) 60°
- C) 55°
- D) 105°

4)



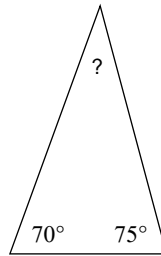
- A) 68°
- B) 44°
- C) 37°
- D) 53°

5)



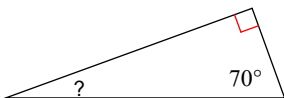
- A) 63°
- B) 123°
- C) 64°
- D) 94°

6)



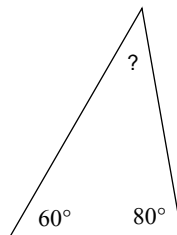
- A) 45°
- B) 65°
- C) 34°
- D) 35°

7)



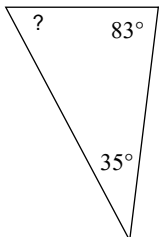
- A) 20°
- B) 26°
- C) 25°
- D) 23°

8)



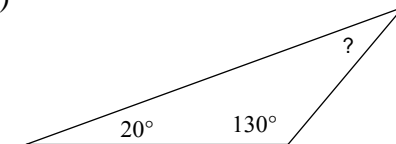
- A) 135°
- B) 40°
- C) 30°
- D) 25°

9)



- A) 35°
- B) 132°

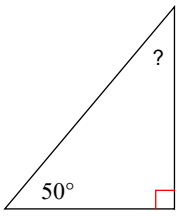
10)



- A) 150°
- B) 28°
- C) 30°
- D) 110°

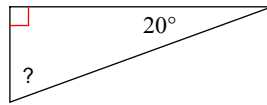


11)



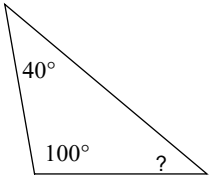
- A) 35° B) 40°
 C) 120° D) 50°

12)



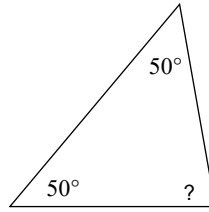
- A) 70° B) 85°
 C) 72° D) 25°

13)



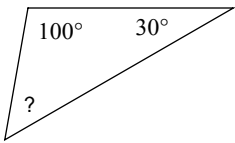
- A) 105° B) 25°
 C) 40° D) 46°

14)



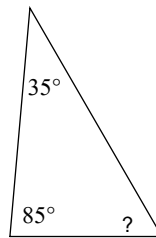
- A) 80° B) 96°
 C) 45° D) 94°

15)



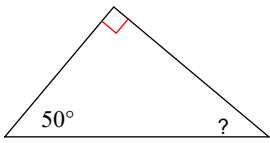
- A) 50° B) 110°
 C) 40° D) 65°

16)



- A) 59° B) 45°
 C) 75° D) 60°

17)



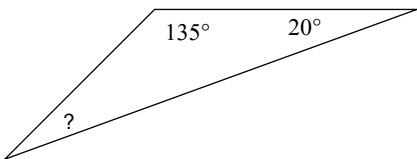
- A) 102° B) 40°
 C) 70° D) 50°

18)



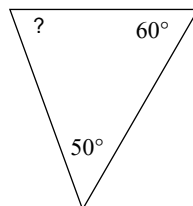
- A) 22° B) 24°
 C) 23° D) 20°

19)



- A) 30° B) 25°
 C) 23° D) 20°

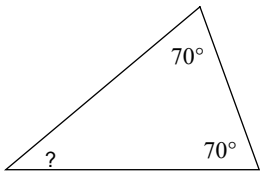
20)



- A) 125° B) 61°
 C) 65° D) 70°

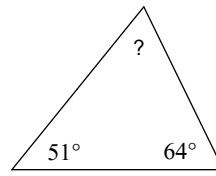


21)



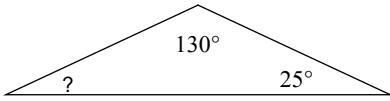
- A) 39° B) 30°
C) 130° D) 40°

22)



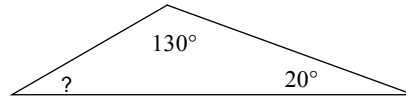
- A) 60° B) 55°
C) 135° D) 65°

23)



- A) 155° B) 25°
C) 24° D) 31°

24)



- A) 70° B) 39°
C) 30° D) 23°



Answers to Assignment (ID: 6)

1) D
5) A
9) D
13) C
17) B
21) D

2) B
6) D
10) C
14) A
18) D
22) D

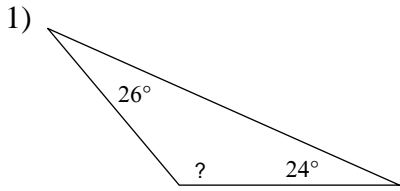
3) C
7) A
11) B
15) A
19) B
23) B

4) C
8) B
12) A
16) D
20) D
24) C

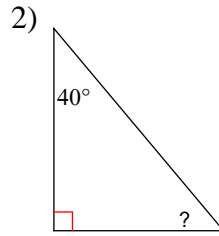


Assignment

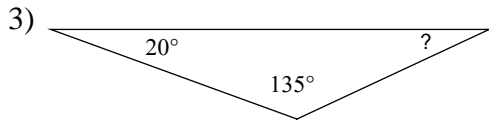
Find the measure of each angle indicated.



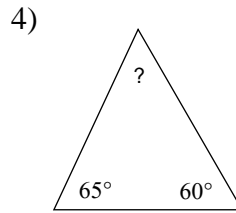
- A) 115° B) 130°
 C) 110° D) 95°



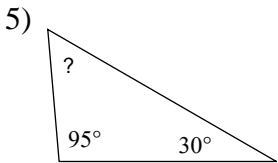
- A) 150° B) 50°
 C) 40° D) 145°



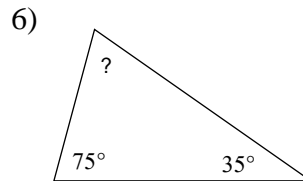
- A) 27° B) 35°
 C) 150° D) 25°



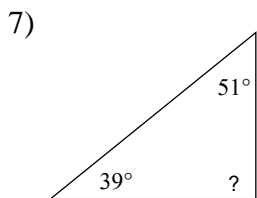
- A) 140° B) 70°
 C) 120° D) 55°



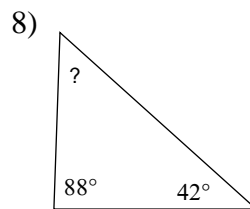
- A) 63° B) 55°
 C) 65° D) 44°



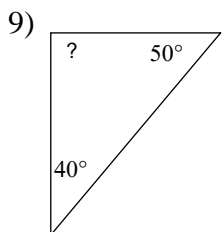
- A) 70° B) 65°
 C) 75° D) 50°



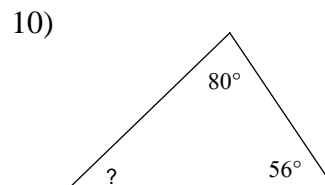
- A) 75° B) 64°
 C) 70° D) 90°



- A) 67° B) 50°
 C) 150° D) 57°

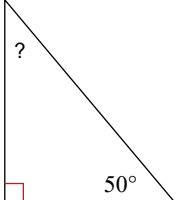


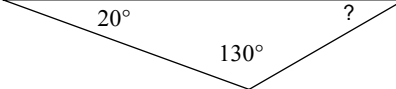
- A) 120° B) 90°
 C) 45° D) 80°

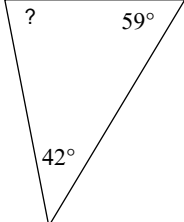


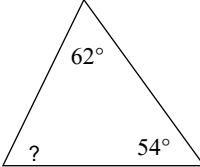
- A) 160° B) 91°
 C) 82° D) 44°

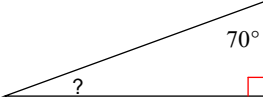


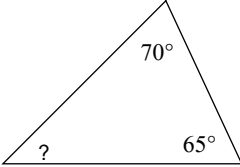
- 11)  A) 40° B) 44°
C) 55° D) 150°

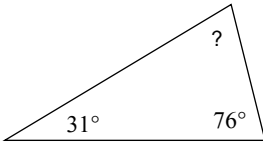
- 12)  A) 33° B) 105°
C) 30° D) 130°

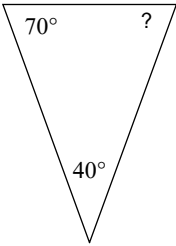
- 13)  A) 79° B) 61°
C) 96° D) 92°

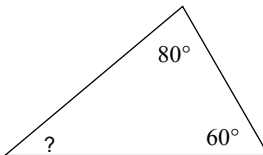
- 14)  A) 75° B) 57°
C) 83° D) 64°

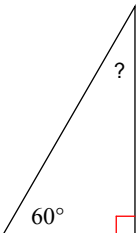
- 15)  A) 25° B) 24°
C) 120° D) 20°

- 16)  A) 50° B) 55°
C) 45° D) 155°

- 17)  A) 73° B) 57°
C) 80° D) 109°

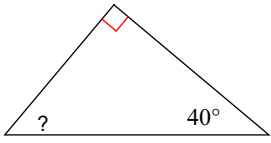
- 18)  A) 54° B) 70°
C) 95° D) 90°

- 19)  A) 30° B) 40°
C) 140° D) 65°

- 20)  A) 55° B) 30°
C) 125° D) 33°

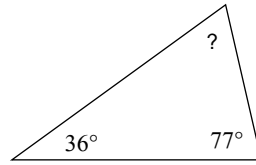


21)



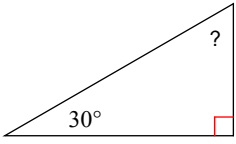
- A) 55° B) 44°
C) 58° D) 50°

22)



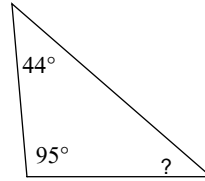
- A) 67° B) 76°
C) 127° D) 80°

23)



- A) 150° B) 71°
C) 130° D) 60°

24)



- A) 29° B) 110°
C) 50° D) 41°



Answers to Assignment (ID: 7)

1) B
5) B
9) B
13) A
17) A
21) D

2) B
6) A
10) D
14) D
18) B
22) A

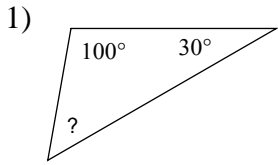
3) D
7) D
11) A
15) D
19) B
23) D

4) D
8) B
12) C
16) C
20) B
24) D

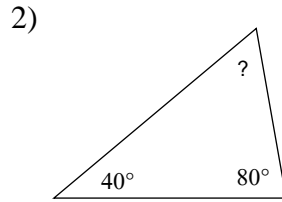


Assignment

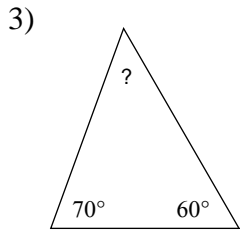
Find the measure of each angle indicated.



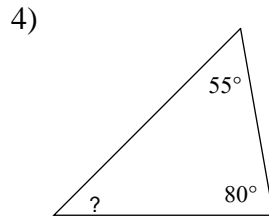
- A) 50°
- B) 52°
- C) 44°
- D) 45°



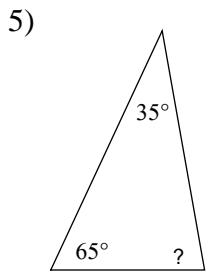
- A) 60°
- B) 51°
- C) 42°
- D) 47°



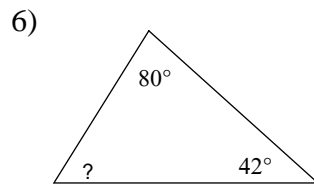
- A) 45°
- B) 25°
- C) 50°
- D) 65°



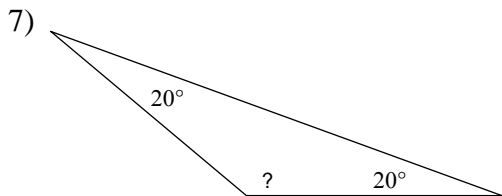
- A) 100°
- B) 31°
- C) 45°
- D) 123°



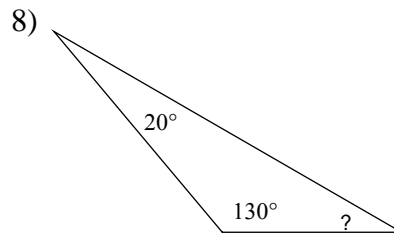
- A) 95°
- B) 125°
- C) 80°
- D) 100°



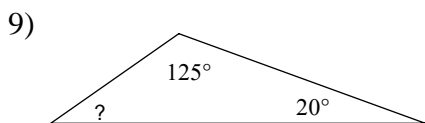
- A) 55°
- B) 158°
- C) 58°
- D) 51°



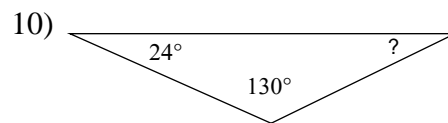
- A) 110°
- B) 40°
- C) 140°
- D) 114°



- A) 30°
- B) 33°
- C) 35°
- D) 155°

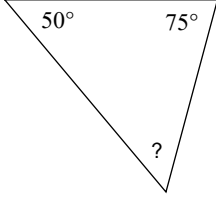


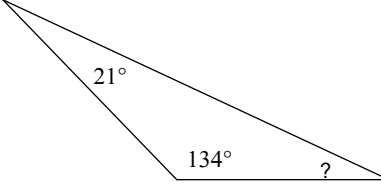
- A) 32°
- B) 35°
- C) 115°
- D) 145°

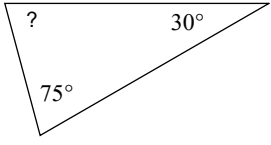


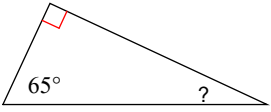
- A) 78°
- B) 26°
- C) 27°
- D) 31°

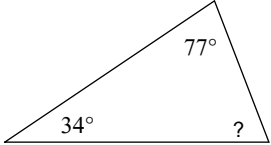


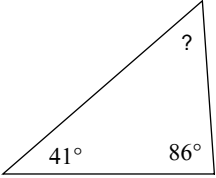
- 11)  A) 55° B) 141°
C) 47° D) 152°

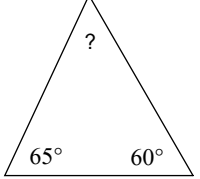
- 12)  A) 32° B) 90°
C) 25° D) 115°

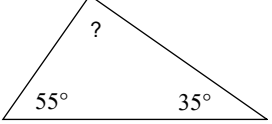
- 13)  A) 120° B) 79°
C) 30° D) 75°

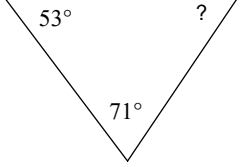
- 14)  A) 33° B) 140°
C) 25° D) 29°

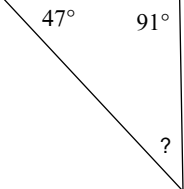
- 15)  A) 135° B) 61°
C) 150° D) 69°

- 16)  A) 45° B) 125°
C) 105° D) 53°

- 17)  A) 65° B) 55°
C) 90° D) 35°

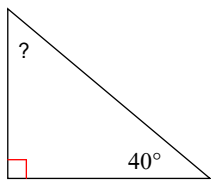
- 18)  A) 100° B) 95°
C) 90° D) 105°

- 19)  A) 116° B) 56°
C) 50° D) 60°

- 20)  A) 29° B) 83°
C) 54° D) 42°

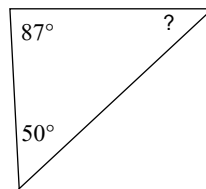


21)



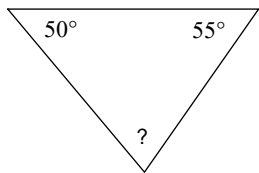
- A) 50° B) 43°
C) 85° D) 47°

22)



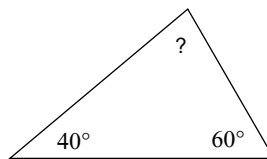
- A) 45° B) 43°
C) 117° D) 109°

23)



- A) 155° B) 40°
C) 75° D) 71°

24)



- A) 25° B) 60°
C) 80° D) 68°



Answers to Assignment (ID: 8)

1) A
5) C
9) B
13) D
17) B
21) A

2) A
6) C
10) B
14) C
18) C
22) B

3) C
7) C
11) A
15) D
19) B
23) C

4) C
8) A
12) C
16) D
20) D
24) C



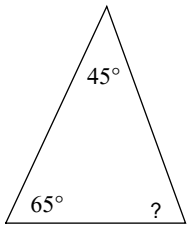
Assignment

Name _____

Date _____ Period _____

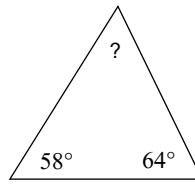
Find the measure of each angle indicated.

1)



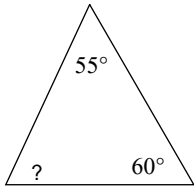
- A) 125°
- B) 50°
- C) 58°
- D) 70°

2)



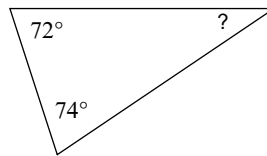
- A) 45°
- B) 50°
- C) 75°
- D) 58°

3)



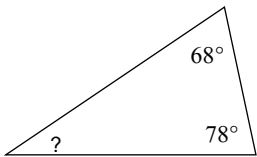
- A) 75°
- B) 140°
- C) 130°
- D) 65°

4)



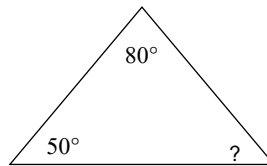
- A) 30°
- B) 103°
- C) 135°
- D) 34°

5)



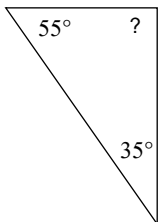
- A) 34°
- B) 93°
- C) 37°
- D) 81°

6)



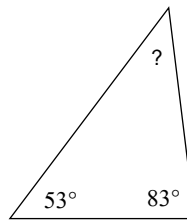
- A) 50°
- B) 25°
- C) 38°
- D) 64°

7)



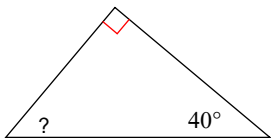
- A) 75°
- B) 90°
- C) 95°
- D) 85°

8)



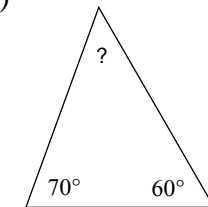
- A) 157°
- B) 34°
- C) 44°
- D) 135°

9)



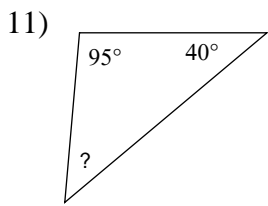
- A) 105°
- B) 50°
- C) 35°
- D) 80°

10)

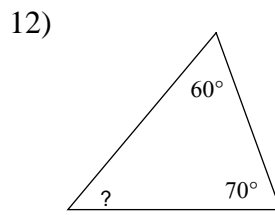


- A) 40°
- B) 45°
- C) 35°
- D) 50°

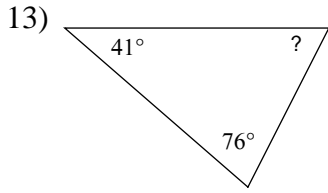




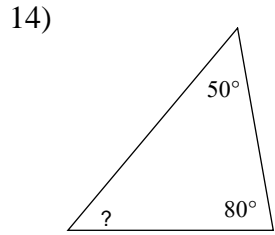
- A) 45° B) 60°
 C) 50° D) 40°



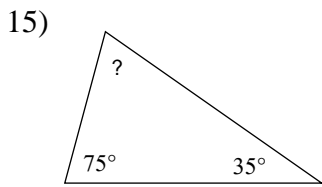
- A) 110° B) 60°
 C) 50° D) 44°



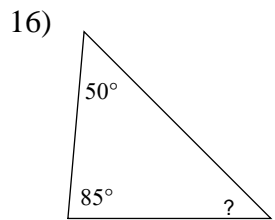
- A) 67° B) 79°
 C) 63° D) 62°



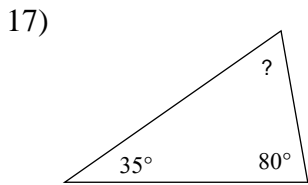
- A) 50° B) 145°
 C) 95° D) 60°



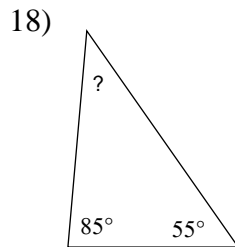
- A) 160° B) 60°
 C) 35° D) 70°



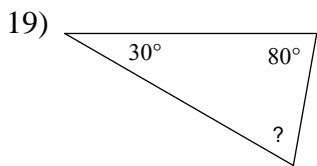
- A) 25° B) 41°
 C) 45° D) 38°



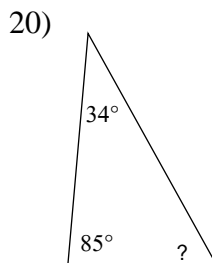
- A) 160° B) 65°
 C) 75° D) 81°



- A) 70° B) 40°
 C) 39° D) 20°



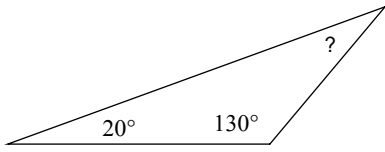
- A) 70° B) 25°
 C) 80° D) 81°



- A) 65° B) 128°
 C) 61° D) 140°

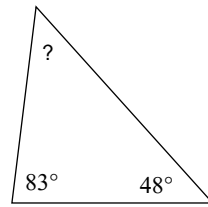


21)



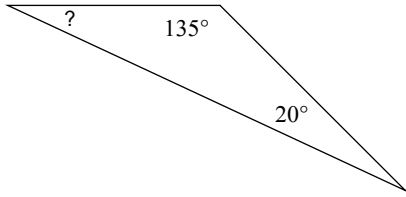
- A) 25°
- B) 75°
- C) 80°
- D) 30°

22)



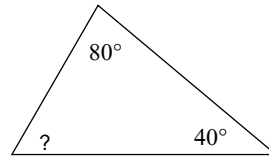
- A) 40°
- B) 44°
- C) 49°
- D) 53°

23)



- A) 75°
- B) 25°
- C) 21°
- D) 22°

24)



- A) 75°
- B) 99°
- C) 130°
- D) 60°



Answers to Assignment (ID: 9)

1) D
5) A
9) B
13) C
17) B
21) D

2) D
6) A
10) D
14) A
18) B
22) C

3) D
7) B
11) A
15) D
19) A
23) B

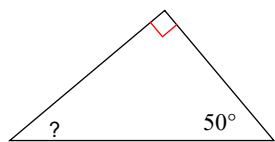
4) D
8) C
12) C
16) C
20) C
24) D



Assignment

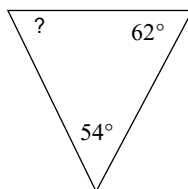
Find the measure of each angle indicated.

1)



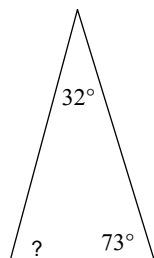
- A) 118° B) 85°
C) 35° D) 40°

2)



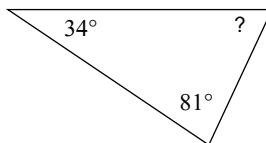
- A) 53° B) 59°
C) 64° D) 50°

3)



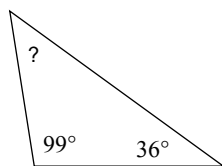
- A) 75° B) 105°
C) 45° D) 46°

4)



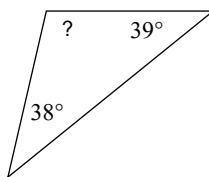
- A) 51° B) 65°
C) 47° D) 60°

5)



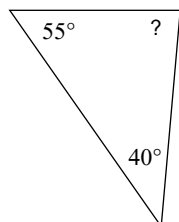
- A) 51° B) 45°
C) 50° D) 155°

6)



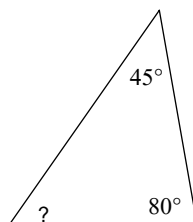
- A) 103° B) 46°
C) 132° D) 139°

7)



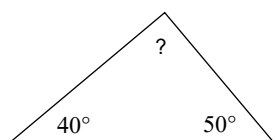
- A) 76° B) 85°
C) 105° D) 73°

8)



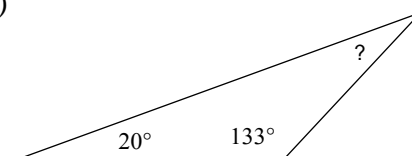
- A) 55° B) 54°
C) 62° D) 42°

9)



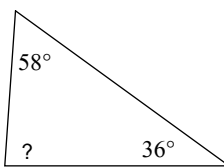
- A) 66° B) 90°
C) 70° D) 155°

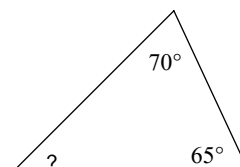
10)

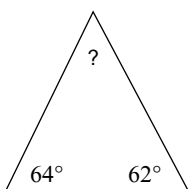


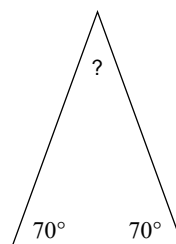
- A) 35° B) 27°
C) 145° D) 24°

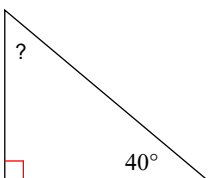


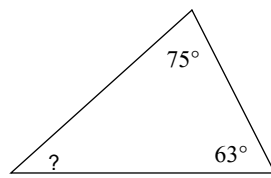
- 11) 
A) 70° B) 86°
C) 60° D) 97°

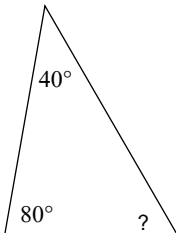
- 12) 
A) 31° B) 45°
C) 95° D) 58°

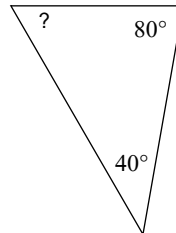
- 13) 
A) 70° B) 25°
C) 54° D) 83°

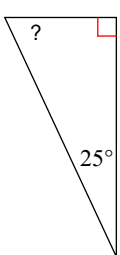
- 14) 
A) 45° B) 40°
C) 125° D) 50°

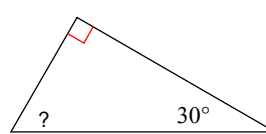
- 15) 
A) 50° B) 60°
C) 85° D) 70°

- 16) 
A) 42° B) 53°
C) 48° D) 104°

- 17) 
A) 51° B) 60°
C) 70° D) 29°

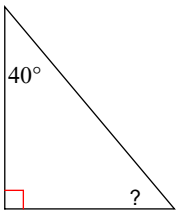
- 18) 
A) 60° B) 43°
C) 135° D) 158°

- 19) 
A) 25° B) 65°
C) 135° D) 83°

- 20) 
A) 45° B) 25°
C) 60° D) 75°

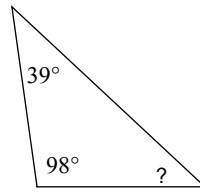


21)



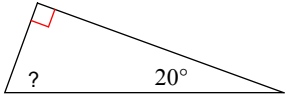
- A) 100° B) 105°
C) 50° D) 140°

22)



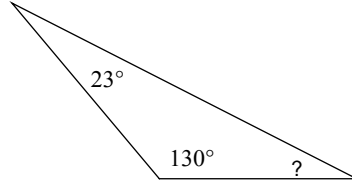
- A) 125° B) 43°
C) 72° D) 86°

23)



- A) 70° B) 155°
C) 84° D) 105°

24)



- A) 121° B) 27°
C) 49° D) 22°



Answers to Assignment (ID: 10)

1) D
5) B
9) B
13) C
17) B
21) C

2) C
6) A
10) B
14) B
18) A
22) B

3) A
7) B
11) B
15) A
19) B
23) A

4) B
8) A
12) B
16) A
20) C
24) B

