

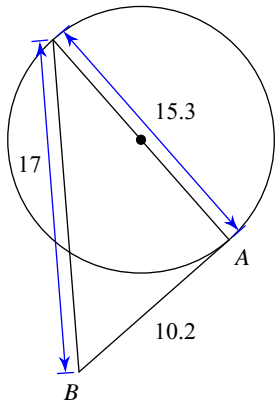
Assignment

Name _____

Date _____ Period ____

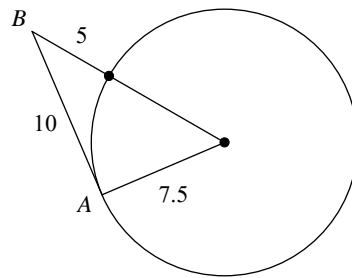
Determine if line AB is tangent to the circle.

1)



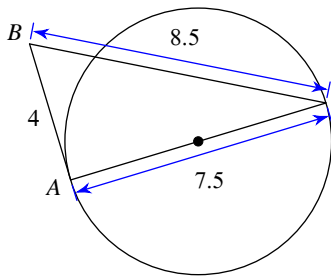
A) Not tangent B) Tangent

2)



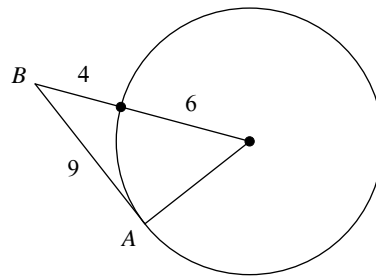
A) Tangent B) Not tangent

3)



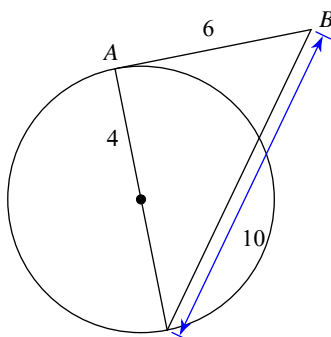
A) Tangent B) Not tangent

4)



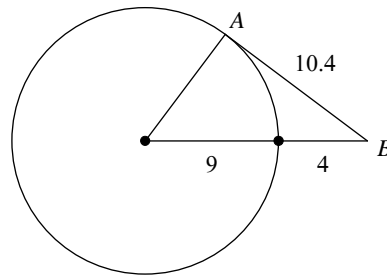
A) Not tangent B) Tangent

5)



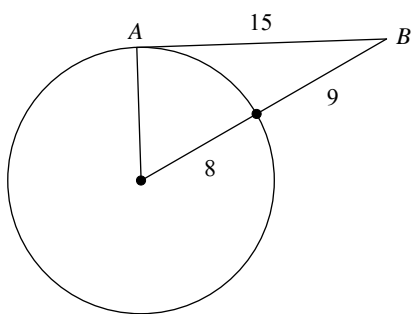
A) Not tangent B) Tangent

6)



A) Not tangent B) Tangent

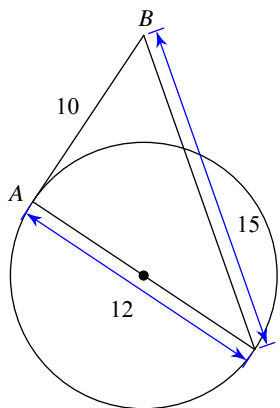
7)



A) Not tangent B) Tangent

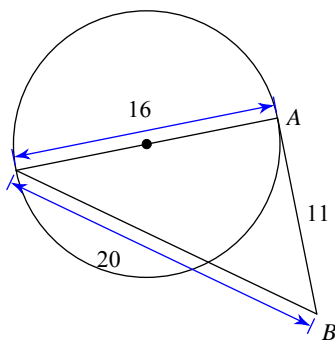


8)



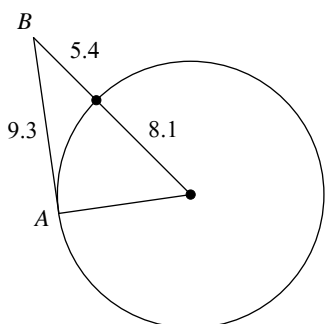
A) Tangent B) Not tangent

9)



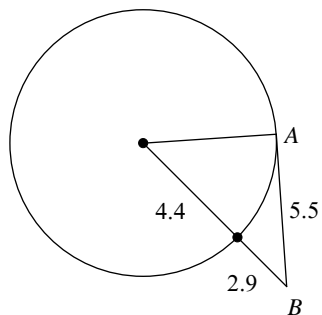
A) Not tangent B) Tangent

10)



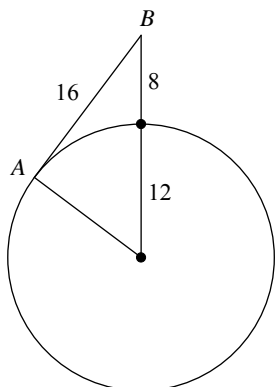
A) Tangent B) Not tangent

11)



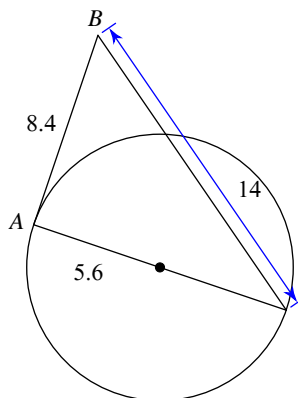
A) Tangent B) Not tangent

12)



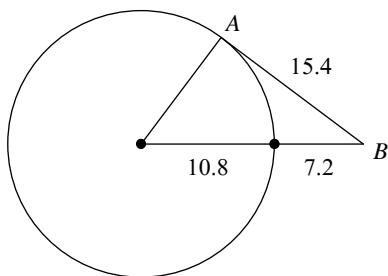
A) Not tangent B) Tangent

13)



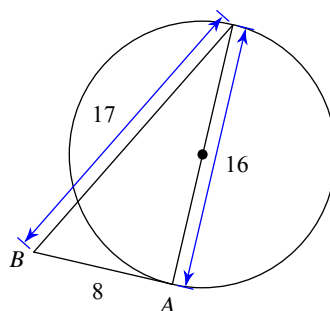
A) Not tangent B) Tangent

14)



A) Not tangent B) Tangent

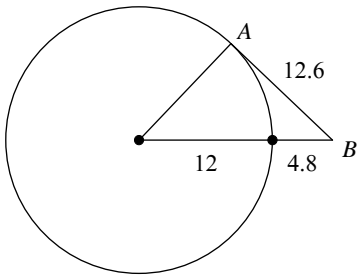
15)



A) Not tangent B) Tangent

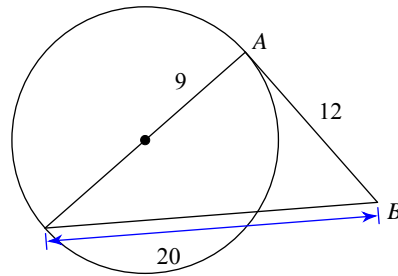


16)



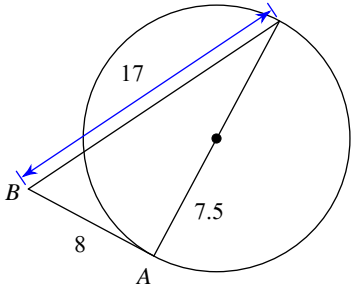
A) Not tangent B) Tangent

17)



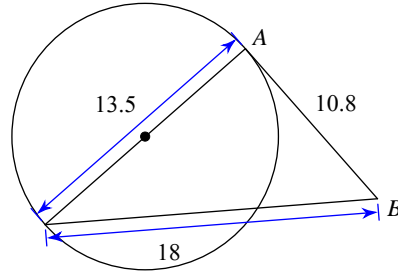
A) Tangent B) Not tangent

18)



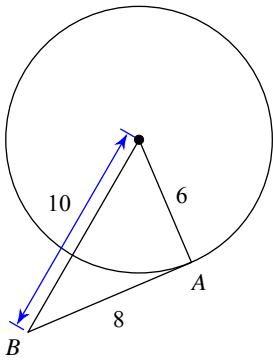
A) Not tangent B) Tangent

19)



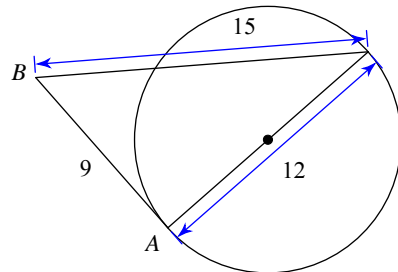
A) Tangent B) Not tangent

20)



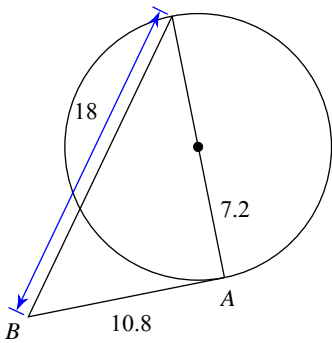
A) Not tangent B) Tangent

21)



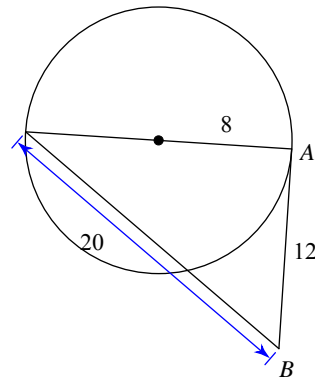
A) Not tangent B) Tangent

22)



A) Not tangent B) Tangent

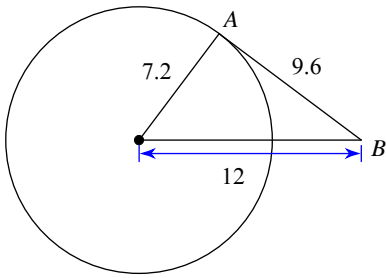
23)



A) Not tangent B) Tangent



24)



A) Not tangent

B) Tangent



Answers to Assignment (ID: 1)

1) A
5) B
9) A
13) B
17) B
21) B

2) A
6) A
10) B
14) A
18) B
22) B

3) A
7) B
11) B
15) A
19) B
23) B

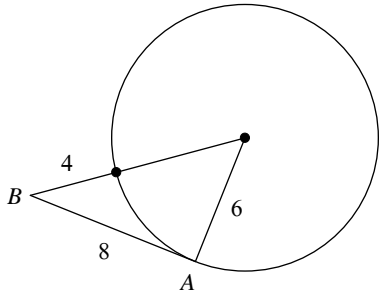
4) A
8) B
12) B
16) A
20) B
24) B



Assignment

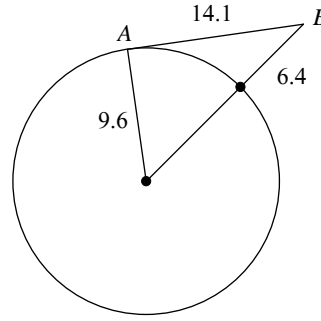
Determine if line AB is tangent to the circle.

1)



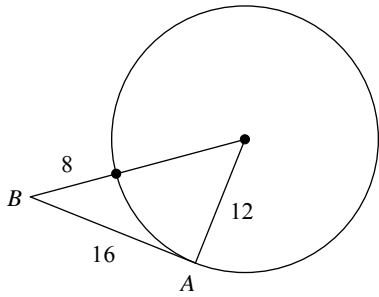
A) Not tangent B) Tangent

2)



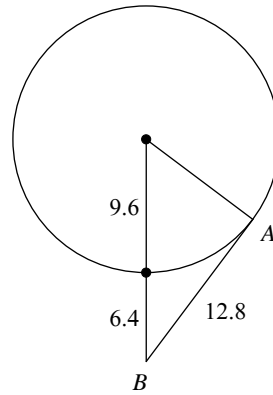
A) Tangent B) Not tangent

3)



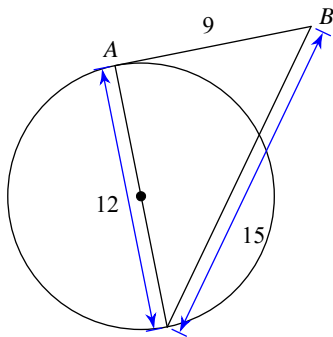
A) Tangent B) Not tangent

4)



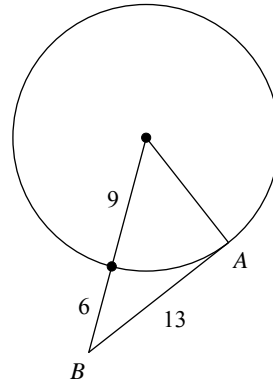
A) Tangent B) Not tangent

5)



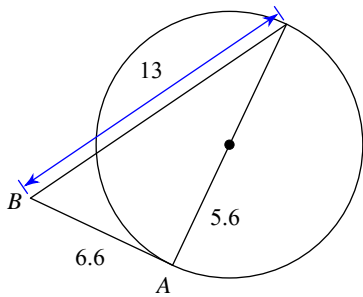
A) Tangent B) Not tangent

6)



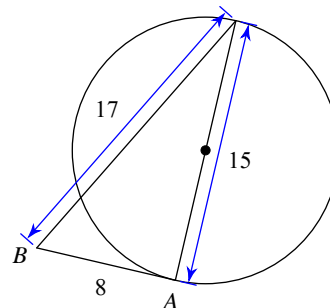
A) Not tangent B) Tangent

7)



A) Not tangent B) Tangent

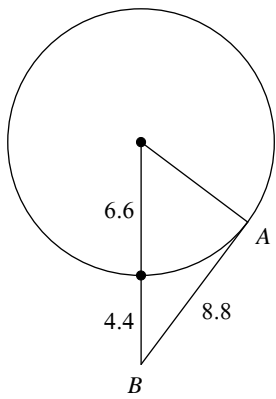
8)



A) Tangent B) Not tangent

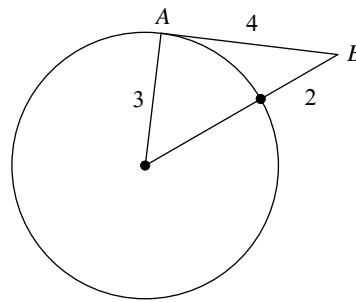


9)



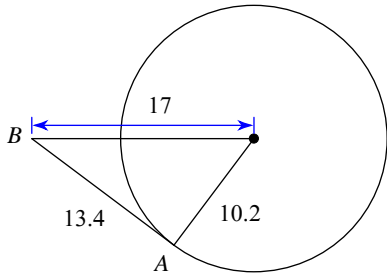
A) Tangent B) Not tangent

10)



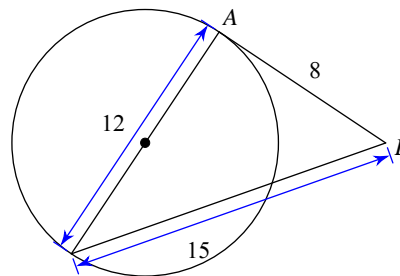
A) Tangent B) Not tangent

11)



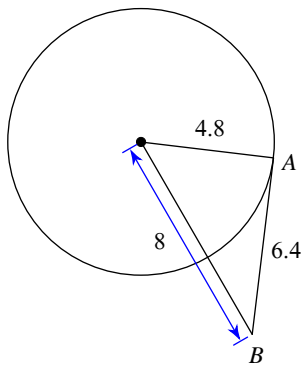
A) Not tangent B) Tangent

12)



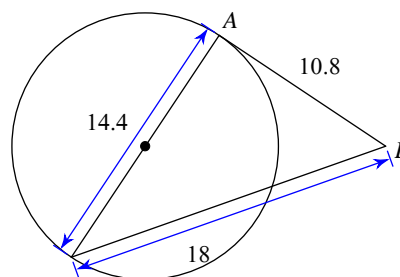
A) Tangent B) Not tangent

13)



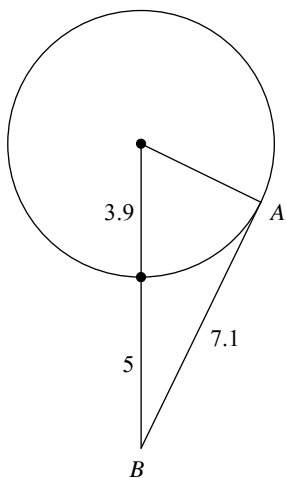
A) Not tangent B) Tangent

14)



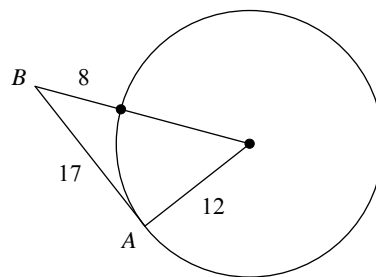
A) Not tangent B) Tangent

15)



A) Not tangent B) Tangent

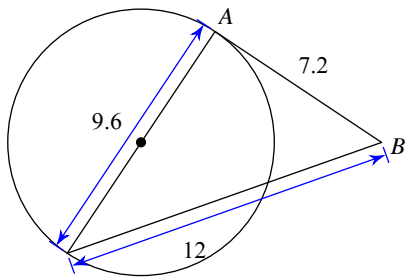
16)



A) Not tangent B) Tangent

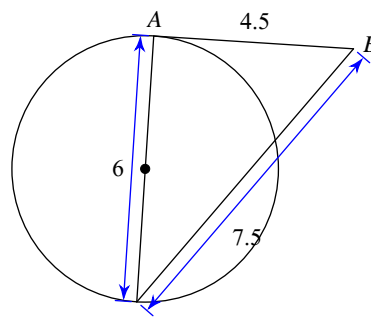


17)



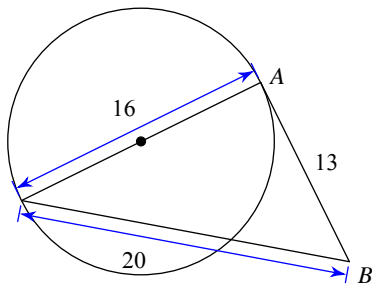
A) Not tangent B) Tangent

18)



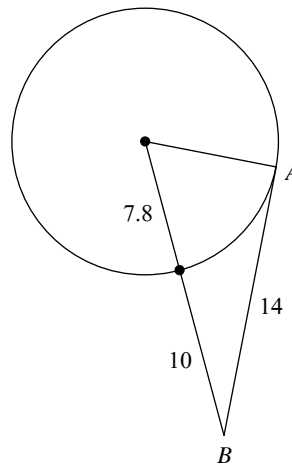
A) Tangent B) Not tangent

19)



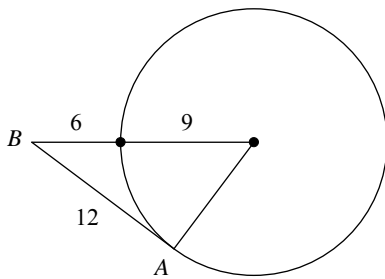
A) Not tangent B) Tangent

20)



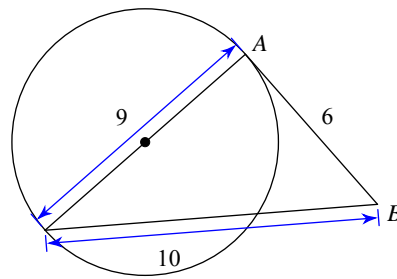
A) Not tangent B) Tangent

21)



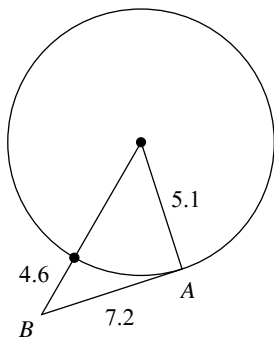
A) Not tangent B) Tangent

22)



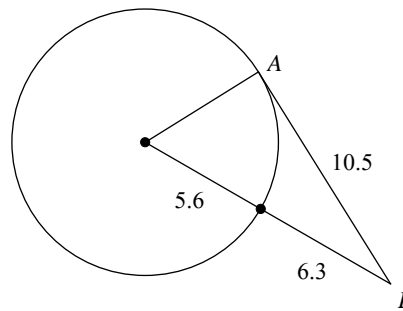
A) Not tangent B) Tangent

23)



A) Not tangent B) Tangent

24)



A) Tangent B) Not tangent



Answers to Assignment (ID: 2)

1) B
5) A
9) A
13) B
17) B
21) B

2) B
6) A
10) A
14) B
18) A
22) A

3) A
7) B
11) A
15) A
19) A
23) A

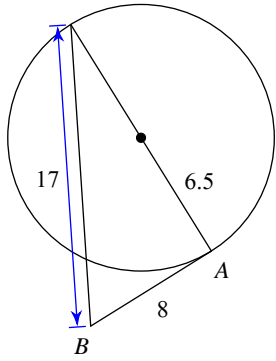
4) A
8) A
12) B
16) A
20) A
24) A



Assignment

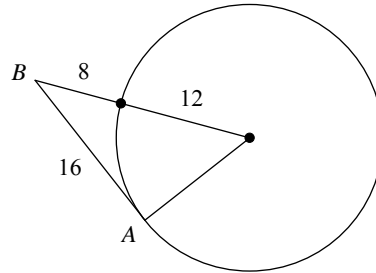
Determine if line AB is tangent to the circle.

1)



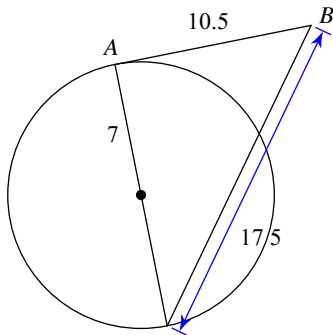
A) Tangent B) Not tangent

2)



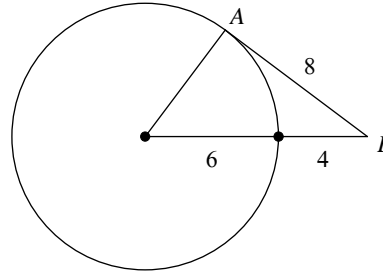
A) Tangent B) Not tangent

3)



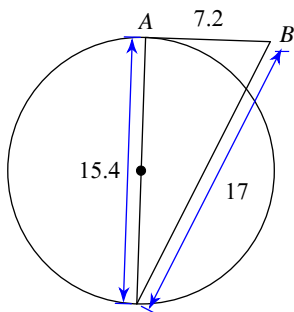
A) Not tangent B) Tangent

4)



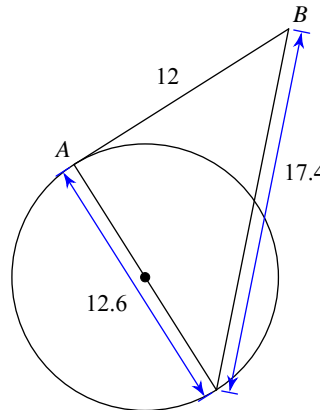
A) Tangent B) Not tangent

5)



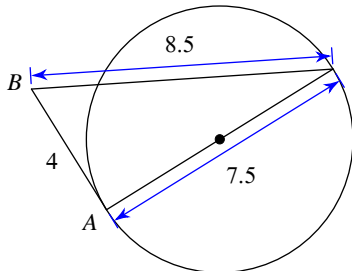
A) Not tangent B) Tangent

6)



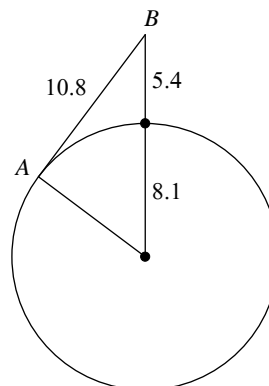
A) Tangent B) Not tangent

7)



A) Not tangent B) Tangent

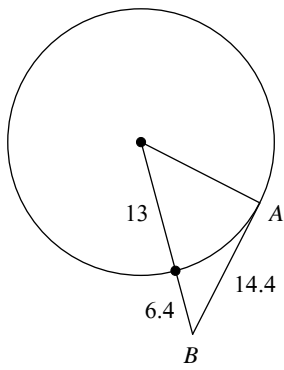
8)



A) Not tangent B) Tangent

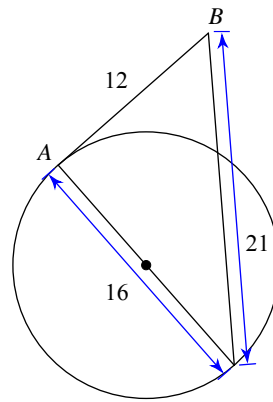


9)



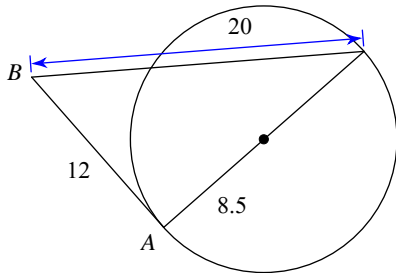
A) Not tangent B) Tangent

10)



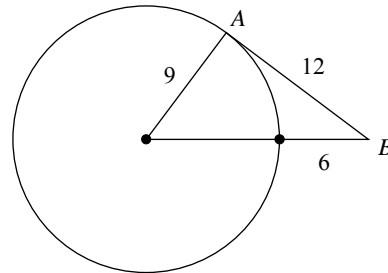
A) Not tangent B) Tangent

11)



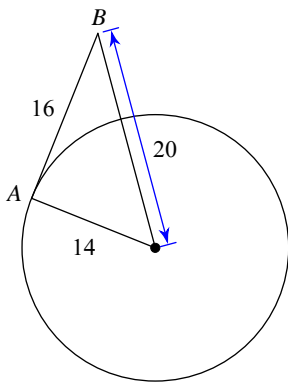
A) Tangent B) Not tangent

12)



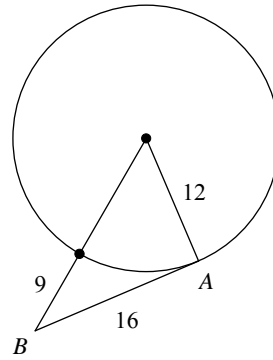
A) Tangent B) Not tangent

13)



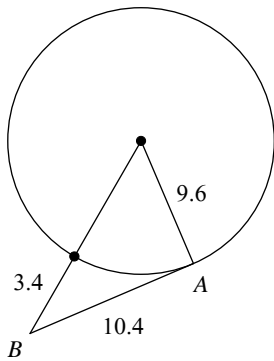
A) Tangent B) Not tangent

14)



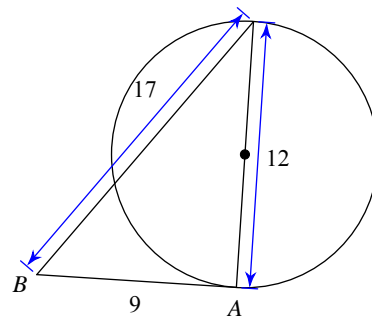
A) Not tangent B) Tangent

15)



A) Not tangent B) Tangent

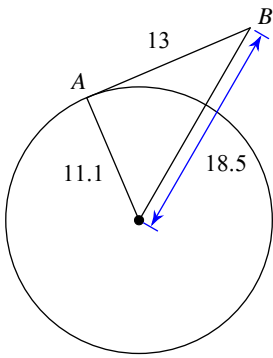
16)



A) Not tangent B) Tangent

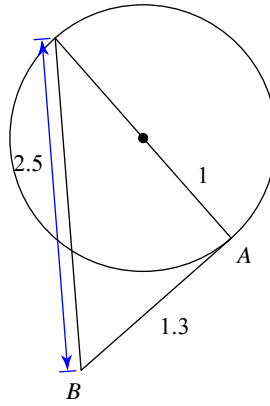


17)



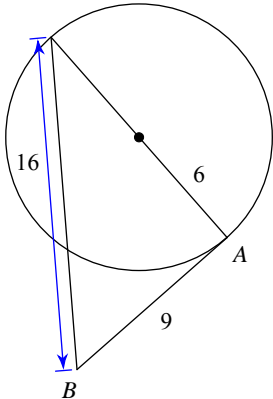
A) Tangent B) Not tangent

18)



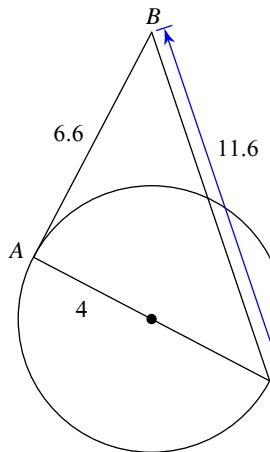
A) Tangent B) Not tangent

19)



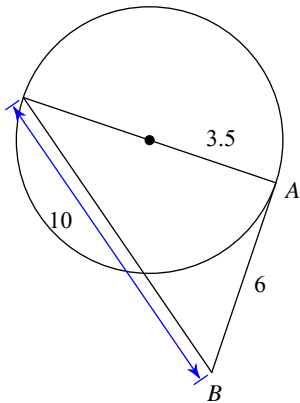
A) Tangent B) Not tangent

20)



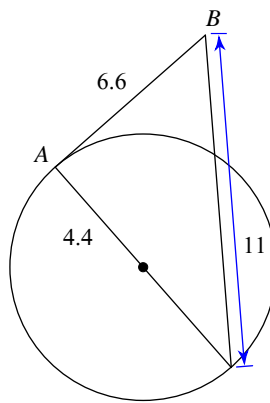
A) Not tangent B) Tangent

21)



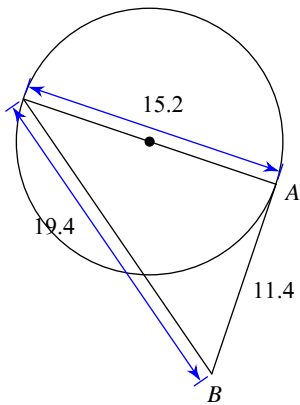
A) Tangent B) Not tangent

22)



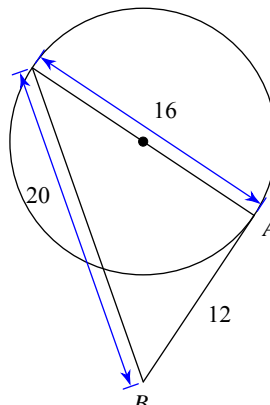
A) Not tangent B) Tangent

23)



A) Not tangent B) Tangent

24)



A) Not tangent B) Tangent



Answers to Assignment (ID: 3)

1) B
5) B
9) B
13) B
17) B
21) B

2) A
6) A
10) A
14) A
18) B
22) B

3) B
7) B
11) B
15) A
19) B
23) A

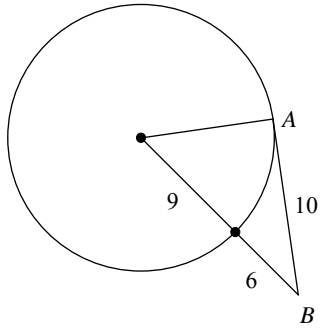
4) A
8) B
12) A
16) A
20) A
24) B



Assignment

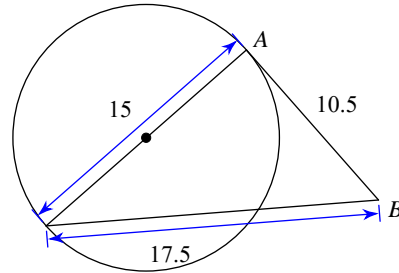
Determine if line AB is tangent to the circle.

1)



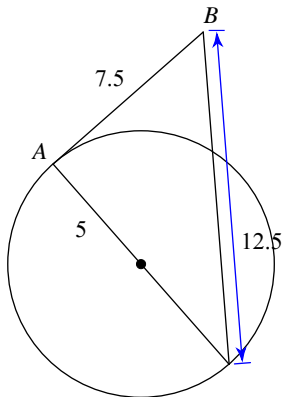
A) Tangent B) Not tangent

2)



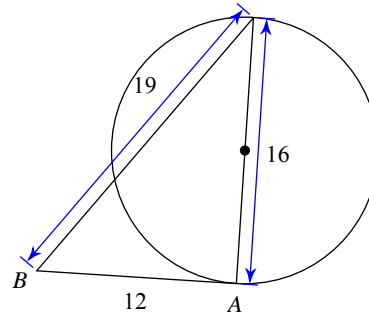
A) Not tangent B) Tangent

3)



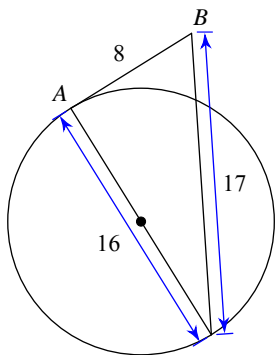
A) Not tangent B) Tangent

4)



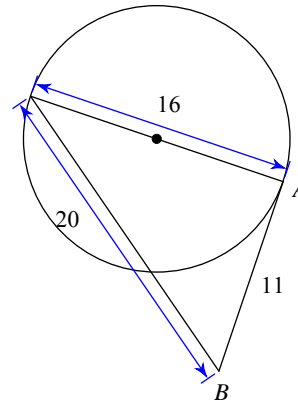
A) Not tangent B) Tangent

5)



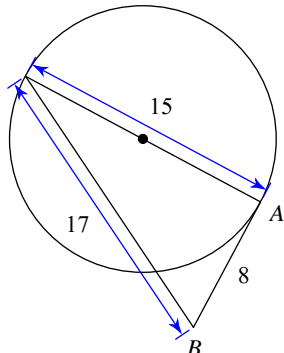
A) Not tangent B) Tangent

6)



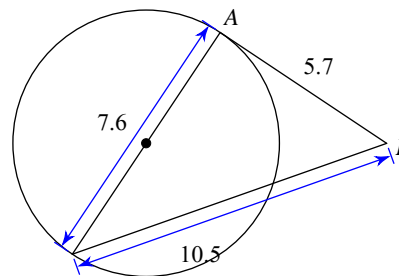
A) Tangent B) Not tangent

7)

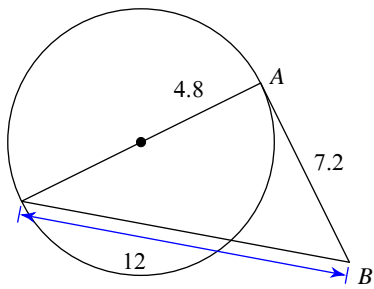


A) Not tangent B) Tangent

8)

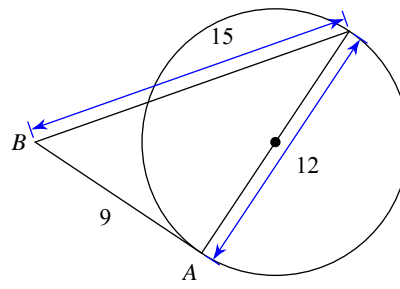


9)



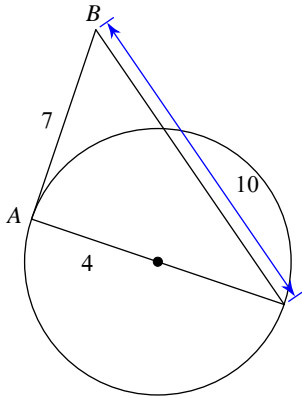
A) Not tangent B) Tangent

10)



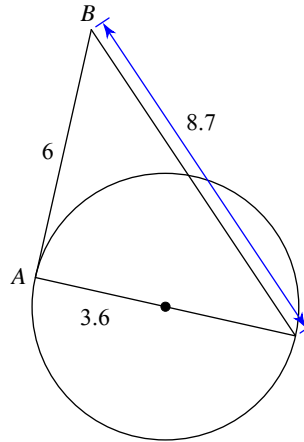
A) Tangent B) Not tangent

11)



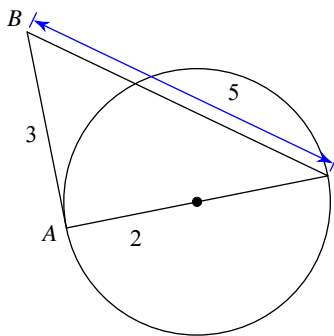
A) Tangent B) Not tangent

12)



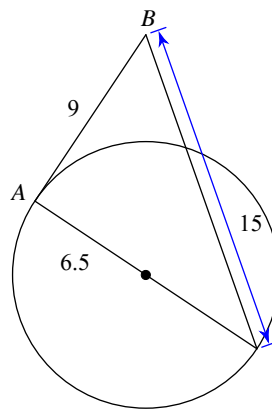
A) Tangent B) Not tangent

13)



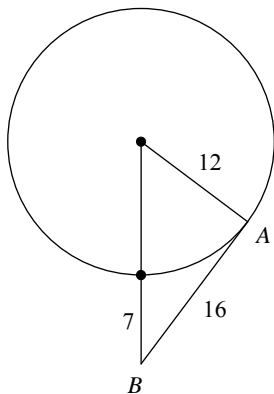
A) Not tangent B) Tangent

14)



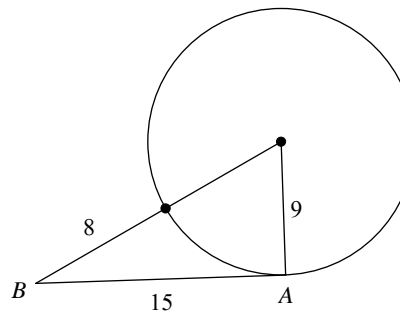
A) Tangent B) Not tangent

15)



A) Not tangent B) Tangent

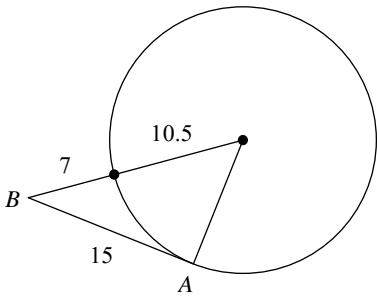
16)



A) Tangent B) Not tangent

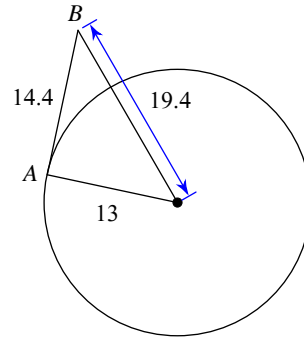


17)



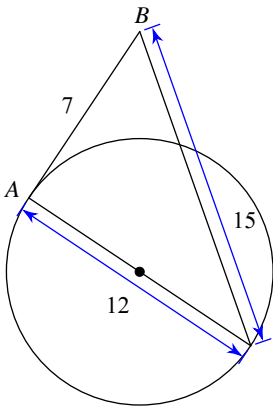
A) Tangent B) Not tangent

18)



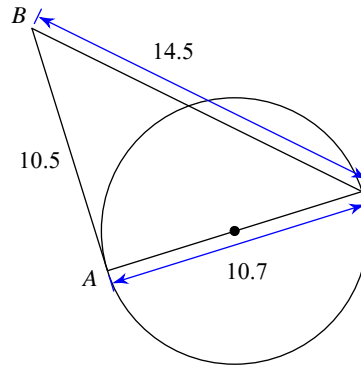
A) Tangent B) Not tangent

19)



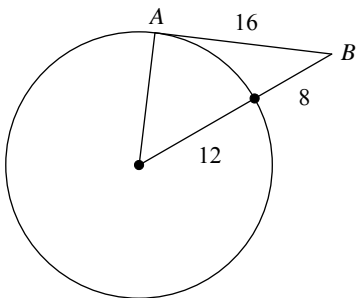
A) Tangent B) Not tangent

20)



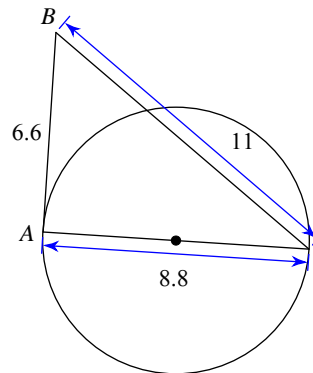
A) Tangent B) Not tangent

21)



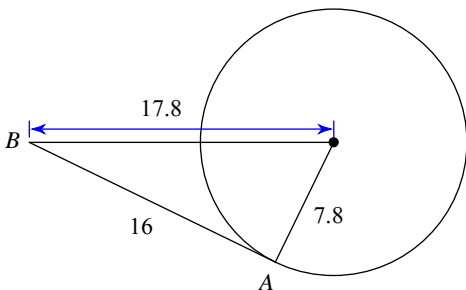
A) Tangent B) Not tangent

22)



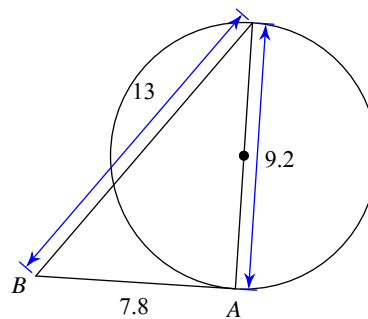
A) Tangent B) Not tangent

23)



A) Tangent B) Not tangent

24)



A) Tangent B) Not tangent



Answers to Assignment (ID: 4)

1) B
5) A
9) B
13) B
17) B
21) A

2) A
6) B
10) A
14) B
18) A
22) A

3) B
7) A
11) B
15) A
19) B
23) A

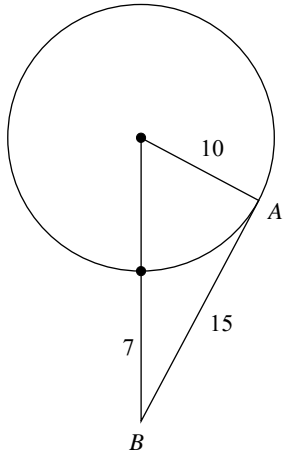
4) A
8) A
12) B
16) B
20) B
24) B



Assignment

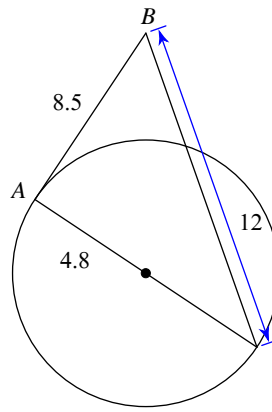
Determine if line AB is tangent to the circle.

1)



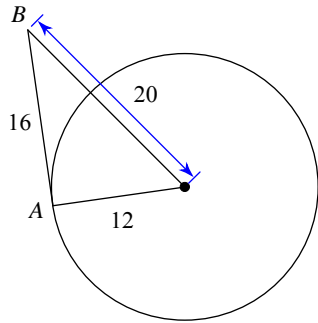
A) Not tangent B) Tangent

2)



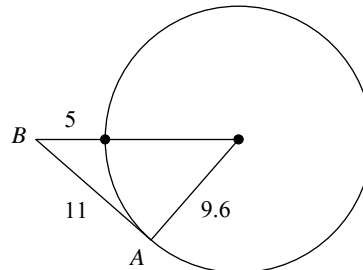
A) Tangent B) Not tangent

3)



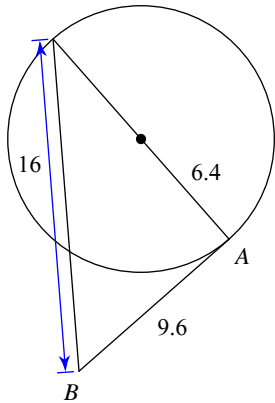
A) Not tangent B) Tangent

4)



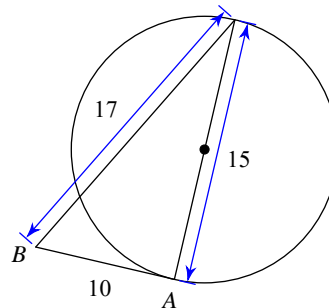
A) Tangent B) Not tangent

5)



A) Not tangent B) Tangent

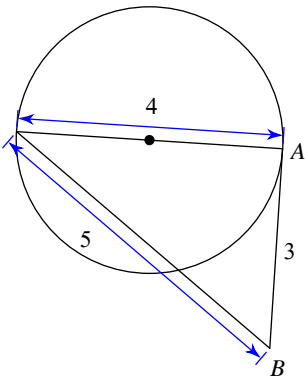
6)



A) Tangent B) Not tangent

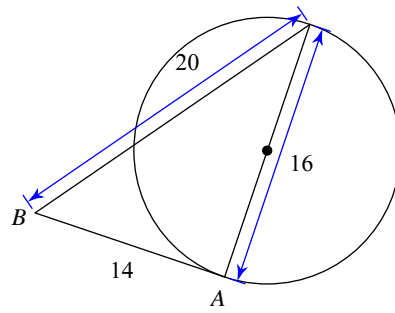


7)



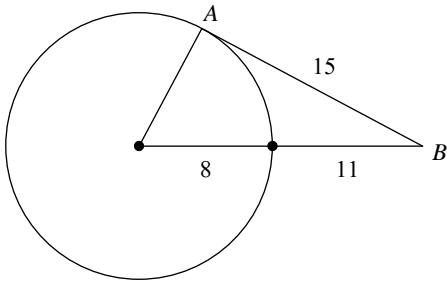
A) Not tangent B) Tangent

8)



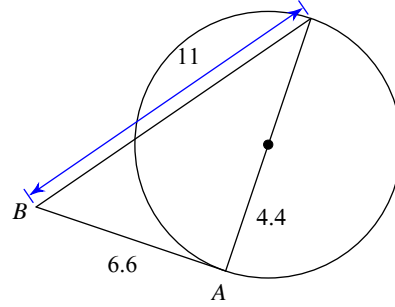
A) Tangent B) Not tangent

9)



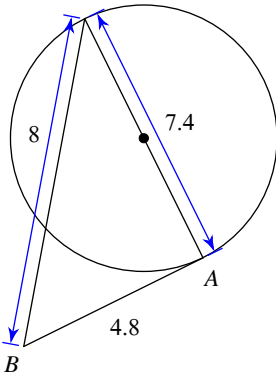
A) Not tangent B) Tangent

10)



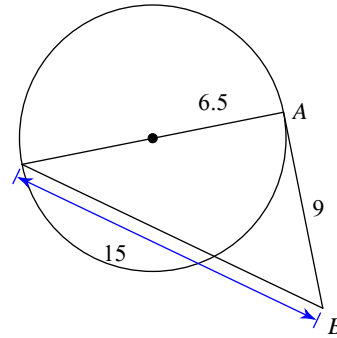
A) Tangent B) Not tangent

11)



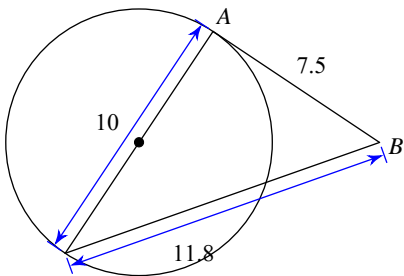
A) Tangent B) Not tangent

12)



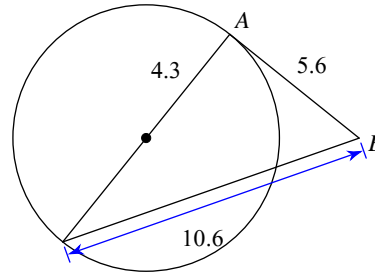
A) Not tangent B) Tangent

13)



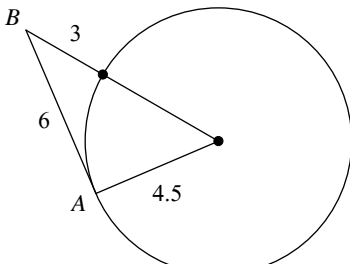
A) Not tangent B) Tangent

14)

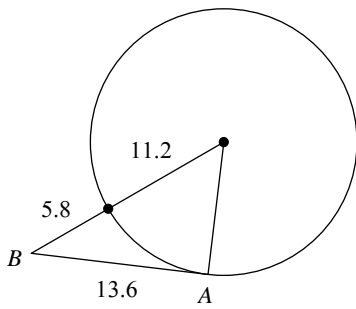


A) Tangent B) Not tangent

15)

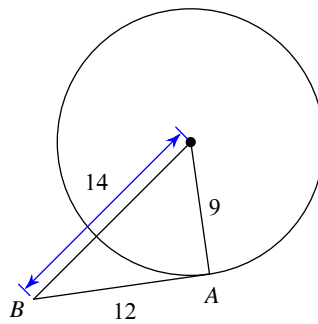


16)



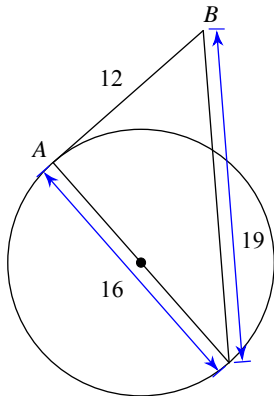
A) Not tangent B) Tangent

17)



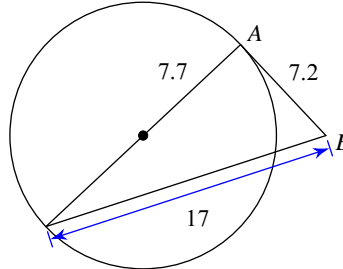
A) Not tangent B) Tangent

18)



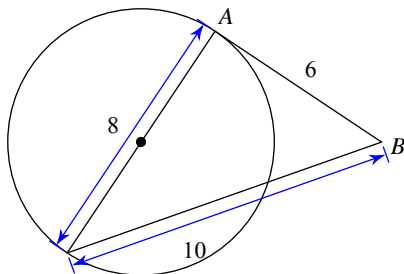
A) Tangent B) Not tangent

19)



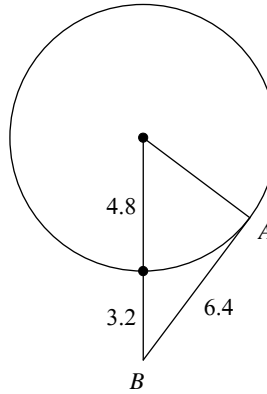
A) Tangent B) Not tangent

20)



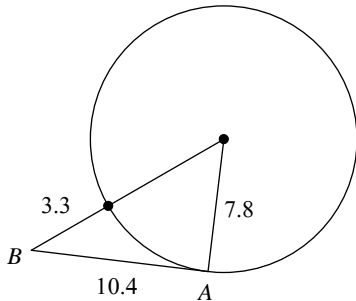
A) Not tangent B) Tangent

21)



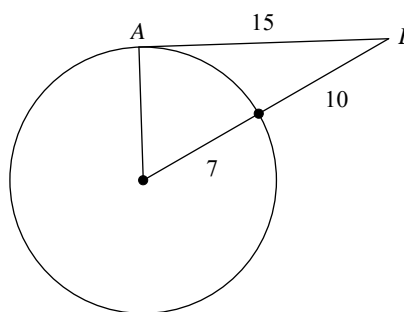
A) Not tangent B) Tangent

22)



A) Tangent B) Not tangent

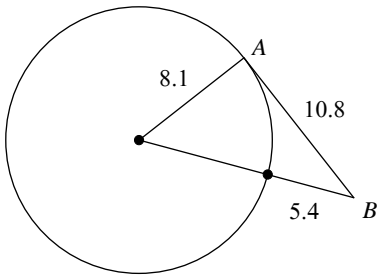
23)



A) Not tangent B) Tangent



24)



A) Tangent

B) Not tangent



Answers to Assignment (ID: 5)

1) A
5) B
9) A
13) A
17) A
21) B

2) B
6) B
10) A
14) B
18) B
22) B

3) B
7) B
11) B
15) A
19) A
23) A

4) A
8) B
12) A
16) A
20) B
24) A



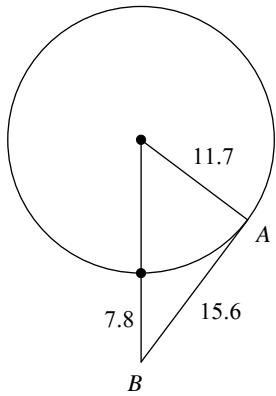
Assignment

Name _____

Date _____ Period _____

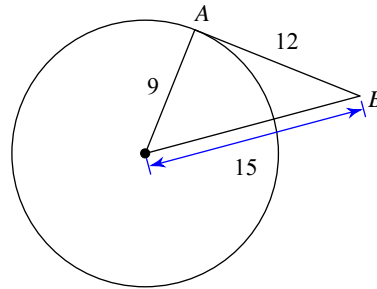
Determine if line AB is tangent to the circle.

1)



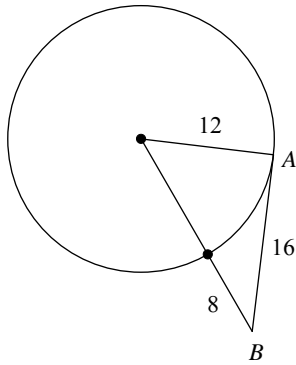
A) Not tangent B) Tangent

2)



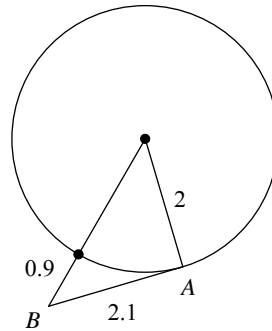
A) Tangent B) Not tangent

3)



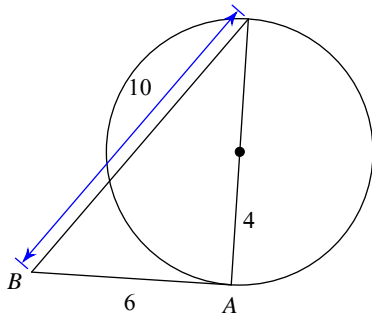
A) Not tangent B) Tangent

4)



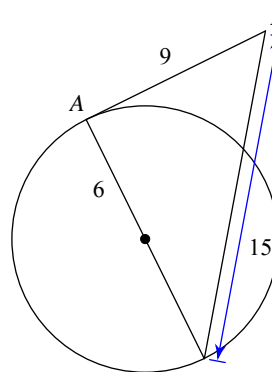
A) Not tangent B) Tangent

5)



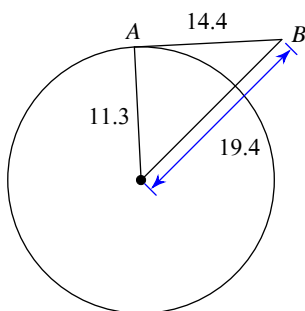
A) Tangent B) Not tangent

6)



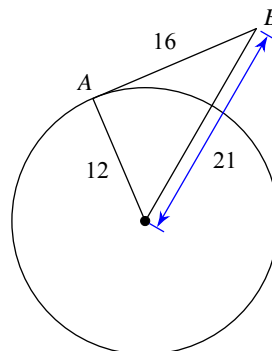
A) Tangent B) Not tangent

7)



A) Not tangent B) Tangent

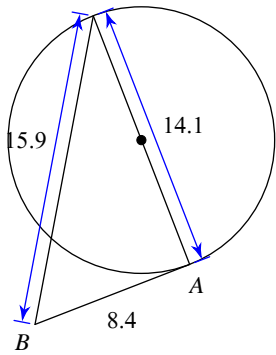
8)



A) Not tangent B) Tangent

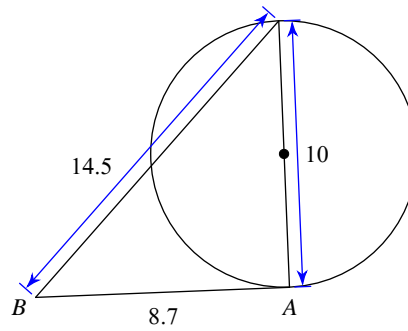


9)



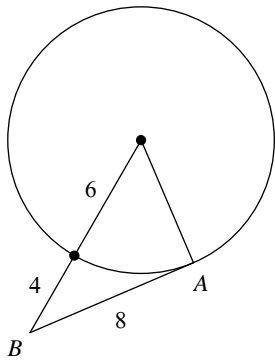
A) Not tangent B) Tangent

10)



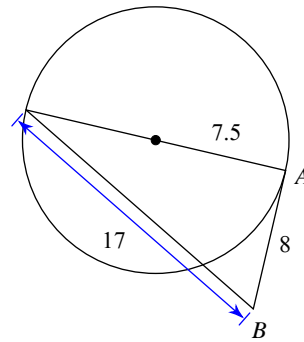
A) Not tangent B) Tangent

11)



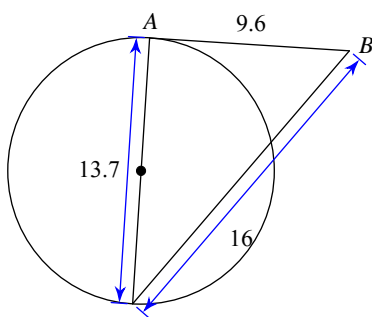
A) Not tangent B) Tangent

12)



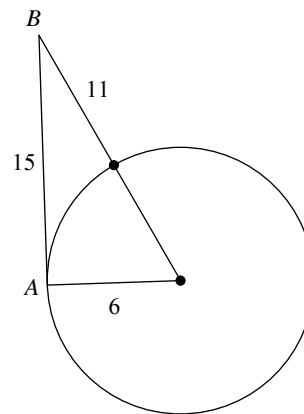
A) Not tangent B) Tangent

13)



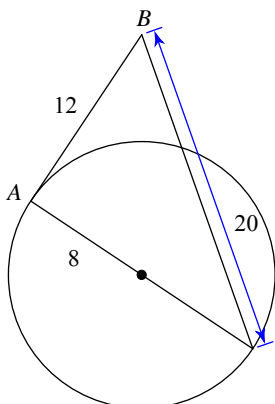
A) Not tangent B) Tangent

14)



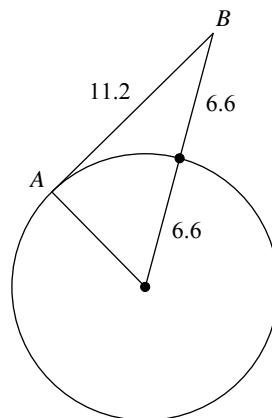
A) Tangent B) Not tangent

15)



A) Not tangent B) Tangent

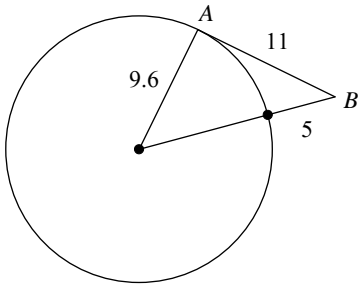
16)



A) Tangent B) Not tangent

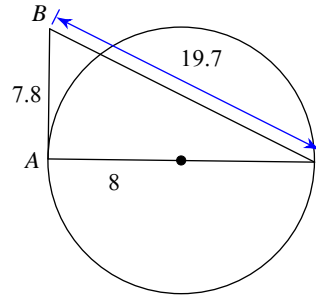


17)



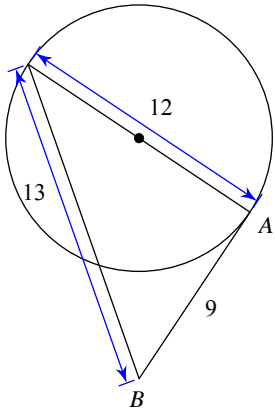
A) Not tangent B) Tangent

18)



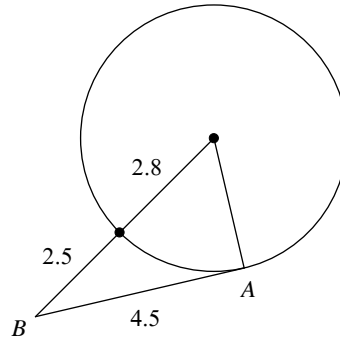
A) Not tangent B) Tangent

19)



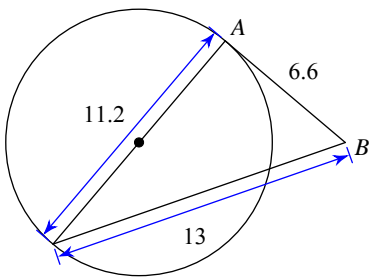
A) Not tangent B) Tangent

20)



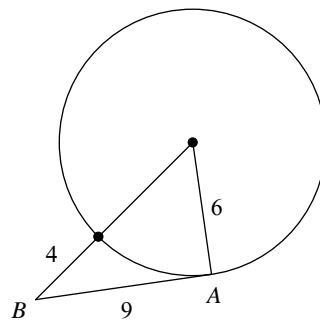
A) Tangent B) Not tangent

21)



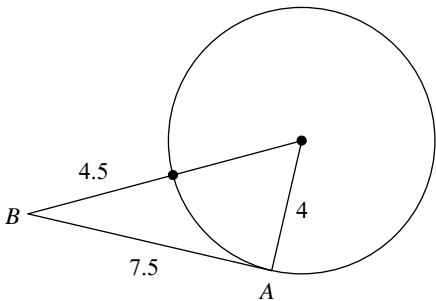
A) Not tangent B) Tangent

22)



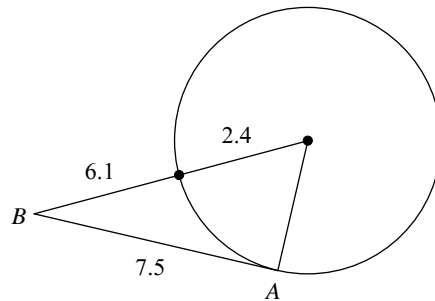
A) Tangent B) Not tangent

23)



A) Not tangent B) Tangent

24)



A) Tangent B) Not tangent



Answers to Assignment (ID: 6)

1) B
5) A
9) A
13) A
17) B
21) B

2) A
6) A
10) A
14) B
18) A
22) B

3) B
7) A
11) B
15) B
19) A
23) B

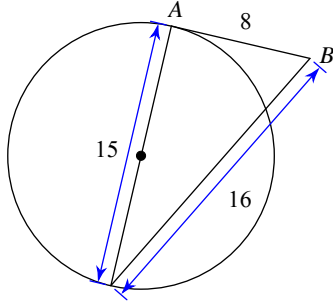
4) B
8) A
12) B
16) B
20) A
24) B



Assignment

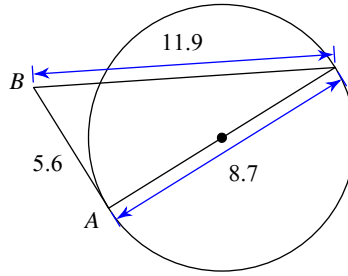
Determine if line AB is tangent to the circle.

1)



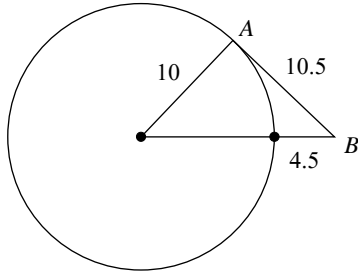
A) Not tangent B) Tangent

2)



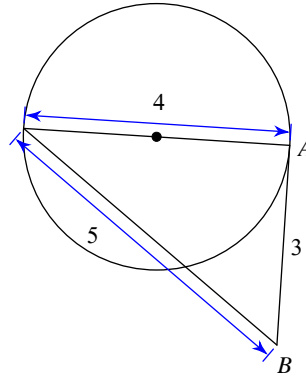
A) Tangent B) Not tangent

3)



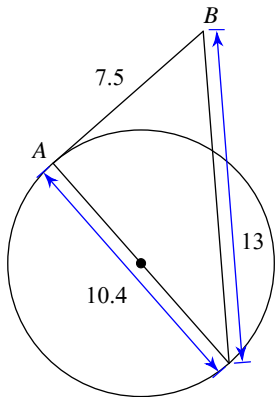
A) Tangent B) Not tangent

4)



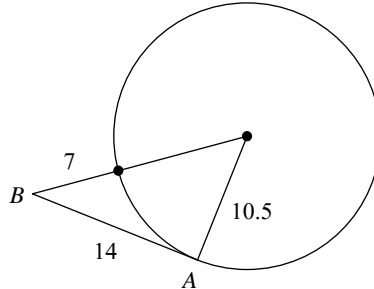
A) Not tangent B) Tangent

5)



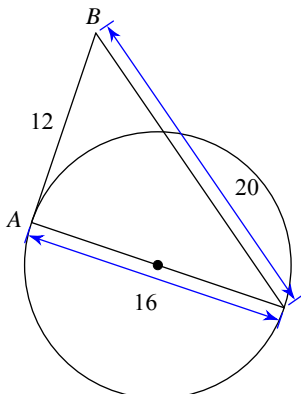
A) Tangent B) Not tangent

6)

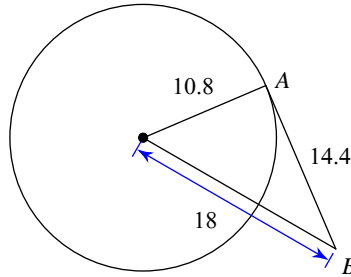


A) Tangent B) Not tangent

7)



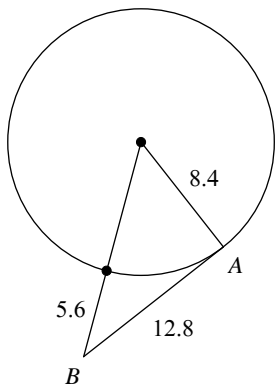
8)



A) Tangent B) Not tangent

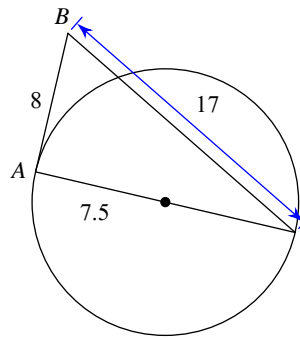


9)



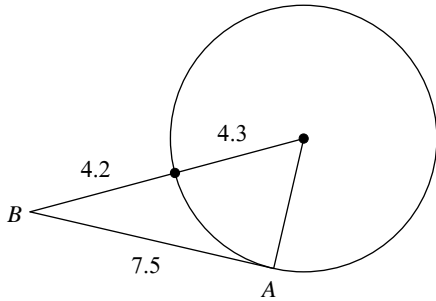
A) Not tangent B) Tangent

10)



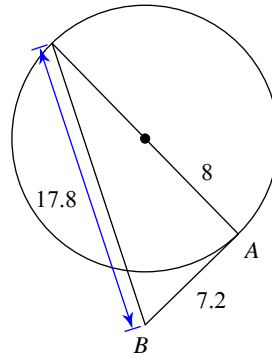
A) Not tangent B) Tangent

11)



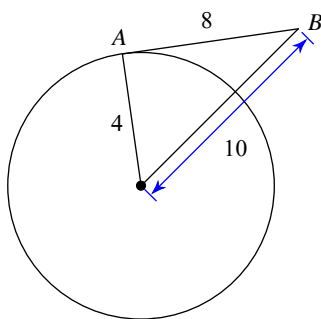
A) Not tangent B) Tangent

12)



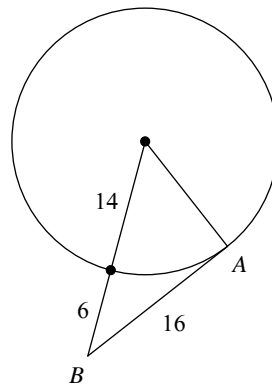
A) Not tangent B) Tangent

13)



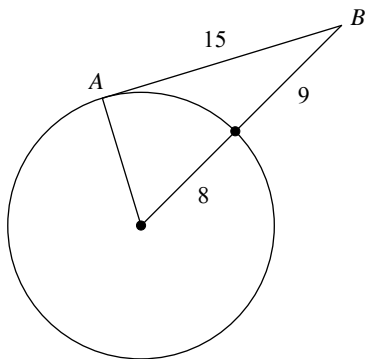
A) Not tangent B) Tangent

14)



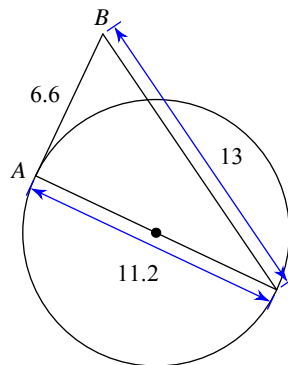
A) Not tangent B) Tangent

15)



A) Not tangent B) Tangent

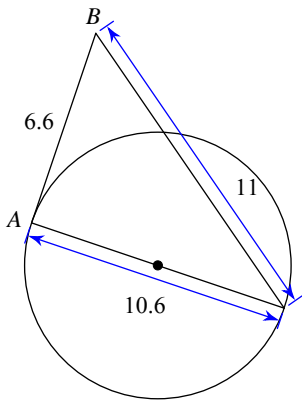
16)



A) Tangent B) Not tangent

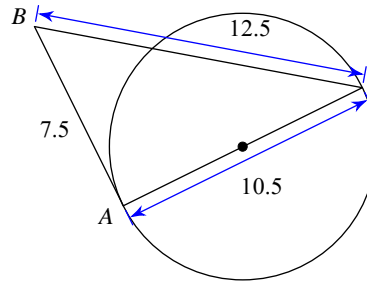


17)



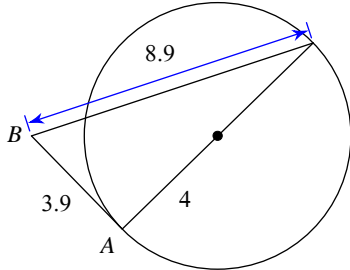
A) Tangent B) Not tangent

18)



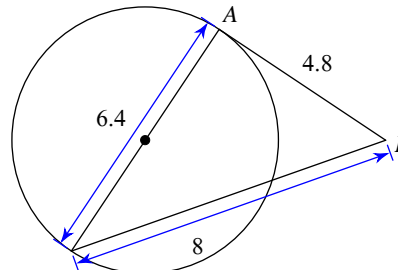
A) Not tangent B) Tangent

19)



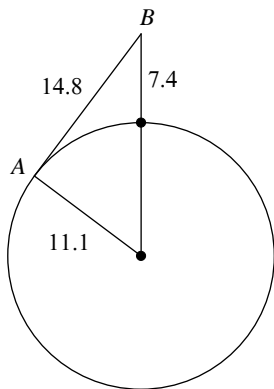
A) Not tangent B) Tangent

20)



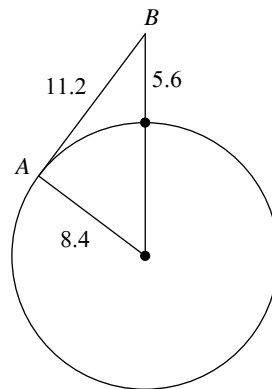
A) Tangent B) Not tangent

21)



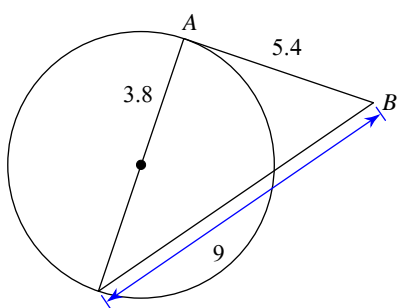
A) Not tangent B) Tangent

22)



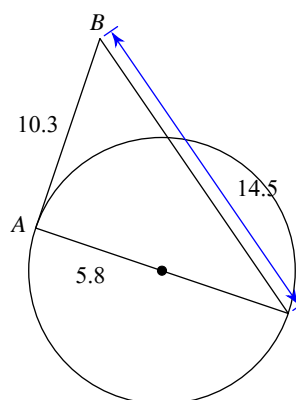
A) Not tangent B) Tangent

23)



A) Not tangent B) Tangent

24)



A) Tangent B) Not tangent



Answers to Assignment (ID: 7)

1) A
5) B
9) A
13) A
17) B
21) B

2) B
6) A
10) B
14) A
18) A
22) B

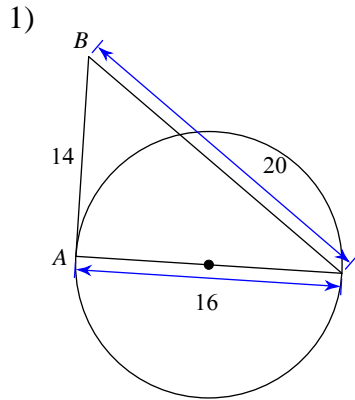
3) A
7) A
11) A
15) B
19) B
23) A

4) B
8) A
12) A
16) A
20) A
24) B

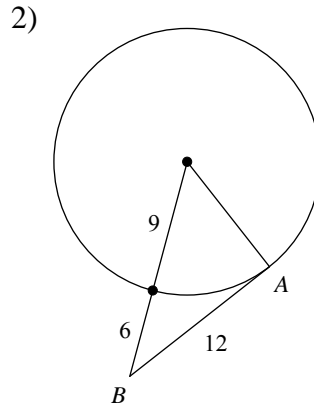


Assignment

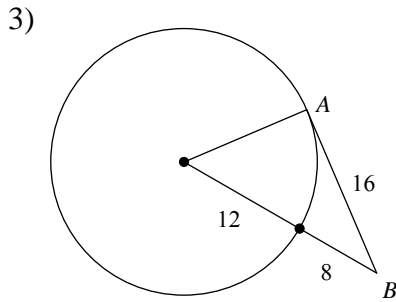
Determine if line AB is tangent to the circle.



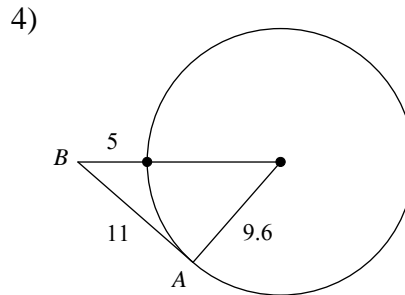
A) Tangent B) Not tangent



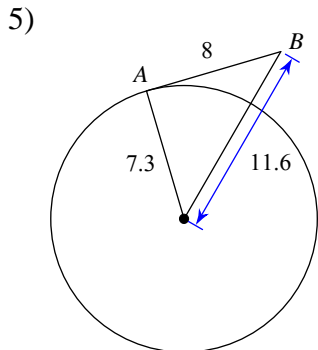
A) Tangent B) Not tangent



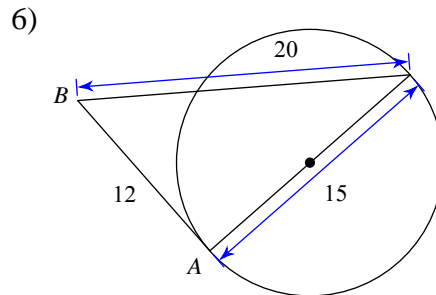
A) Not tangent B) Tangent



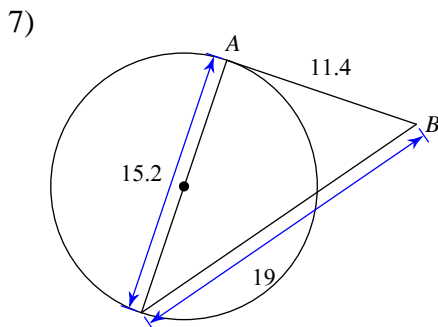
A) Tangent B) Not tangent



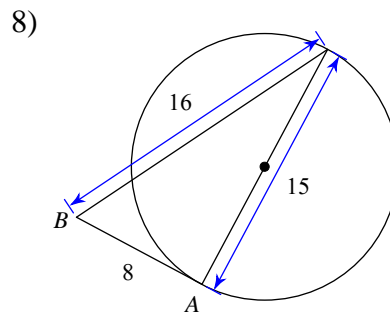
A) Not tangent B) Tangent



A) Tangent B) Not tangent



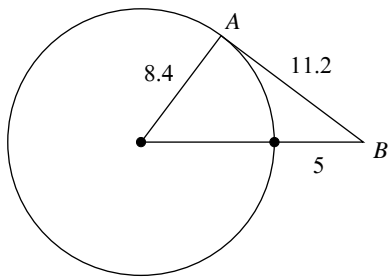
A) Not tangent B) Tangent



A) Tangent B) Not tangent

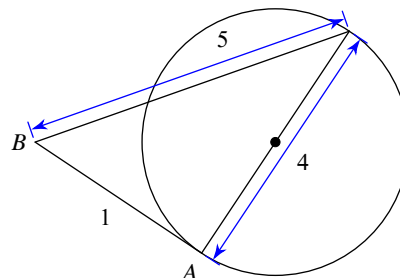


9)



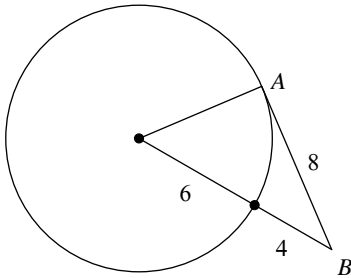
A) Tangent B) Not tangent

10)



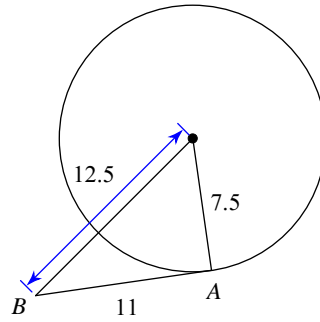
A) Not tangent B) Tangent

11)



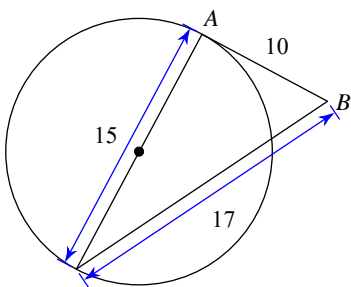
A) Tangent B) Not tangent

12)



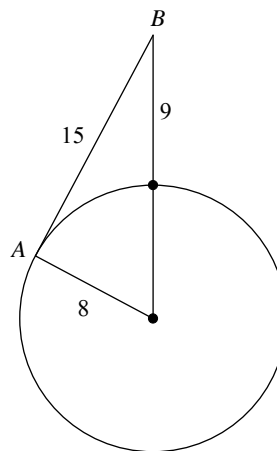
A) Tangent B) Not tangent

13)



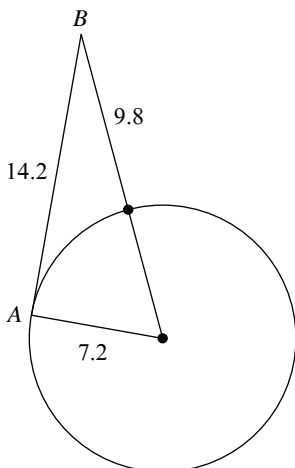
A) Not tangent B) Tangent

14)



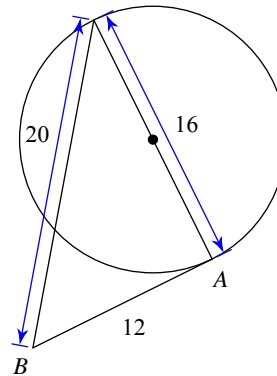
A) Not tangent B) Tangent

15)



A) Tangent B) Not tangent

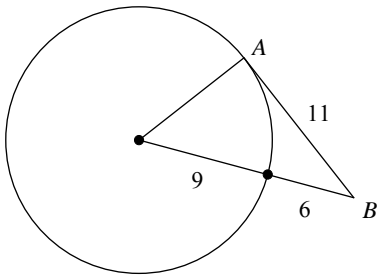
16)



A) Tangent B) Not tangent

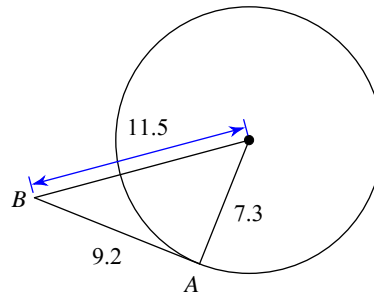


17)



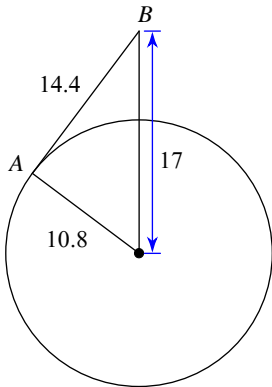
A) Tangent B) Not tangent

18)



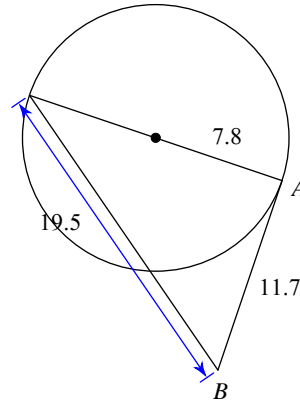
A) Tangent B) Not tangent

19)



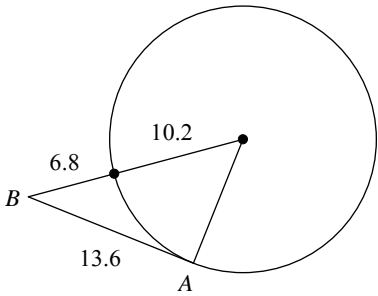
A) Tangent B) Not tangent

20)



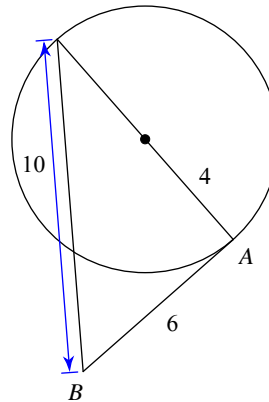
A) Not tangent B) Tangent

21)



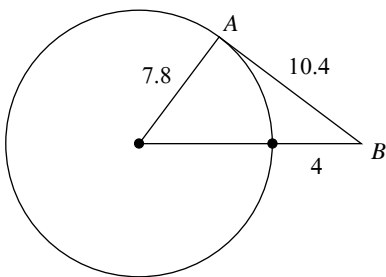
A) Tangent B) Not tangent

22)



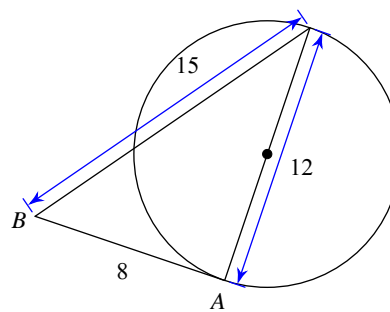
A) Not tangent B) Tangent

23)



A) Not tangent B) Tangent

24)



A) Not tangent B) Tangent



Answers to Assignment (ID: 8)

1) B
5) A
9) B
13) A
17) B
21) A

2) A
6) B
10) A
14) B
18) B
22) B

3) B
7) B
11) A
15) B
19) B
23) A

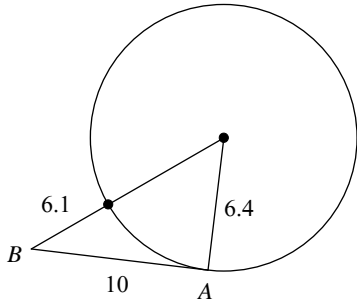
4) A
8) B
12) B
16) A
20) B
24) A



Assignment

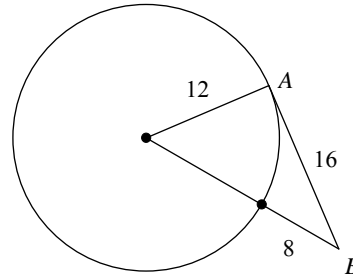
Determine if line AB is tangent to the circle.

1)



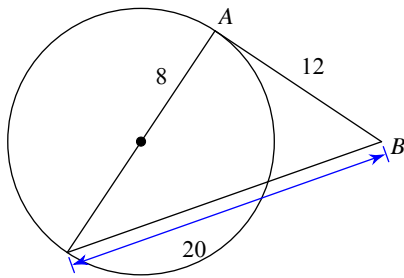
A) Not tangent B) Tangent

2)



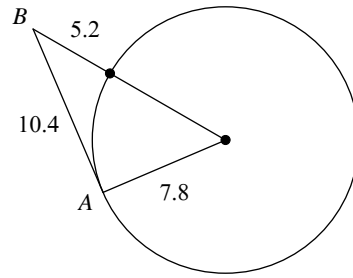
A) Tangent B) Not tangent

3)



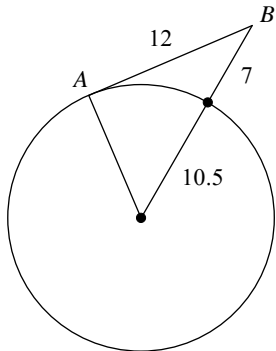
A) Tangent B) Not tangent

4)



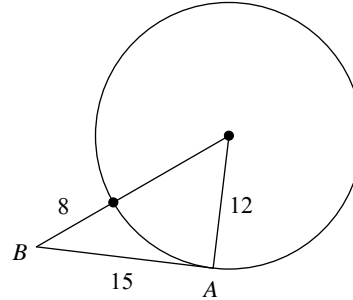
A) Tangent B) Not tangent

5)



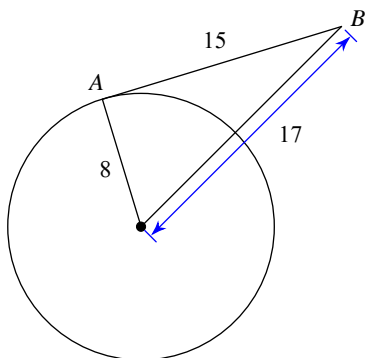
A) Not tangent B) Tangent

6)



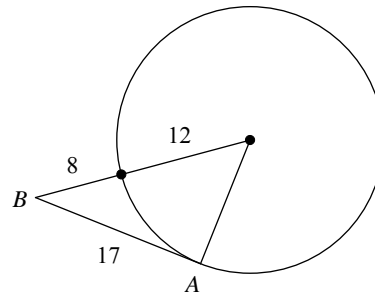
A) Not tangent B) Tangent

7)



A) Not tangent B) Tangent

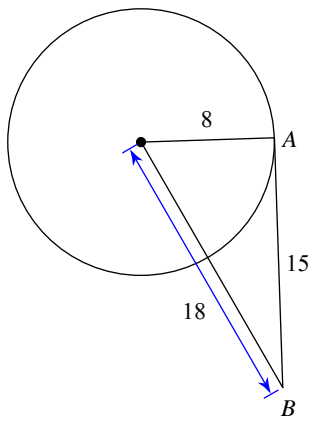
8)



A) Not tangent B) Tangent

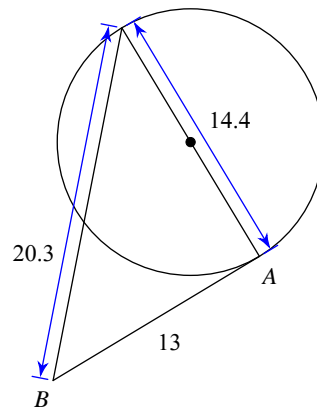


9)



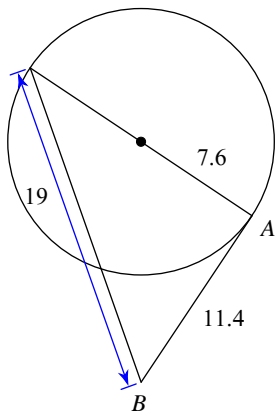
A) Not tangent B) Tangent

10)



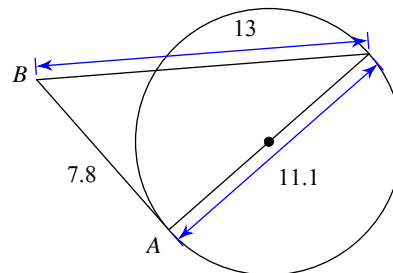
A) Not tangent B) Tangent

11)



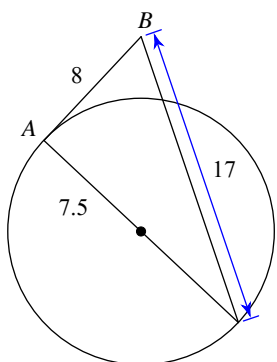
A) Tangent B) Not tangent

12)



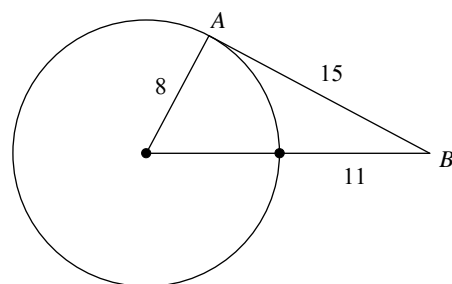
A) Tangent B) Not tangent

13)



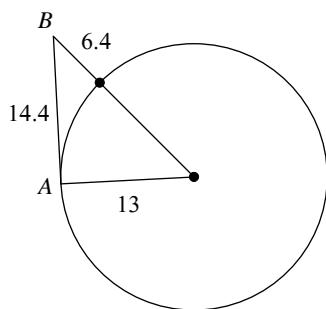
A) Not tangent B) Tangent

14)



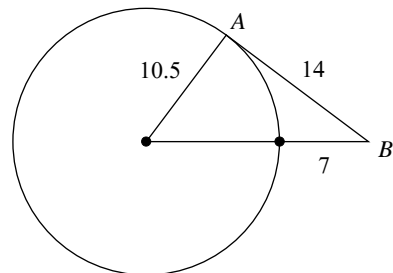
A) Not tangent B) Tangent

15)



A) Not tangent B) Tangent

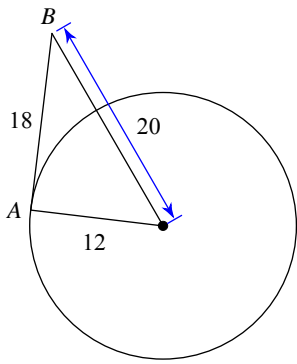
16)



A) Not tangent B) Tangent

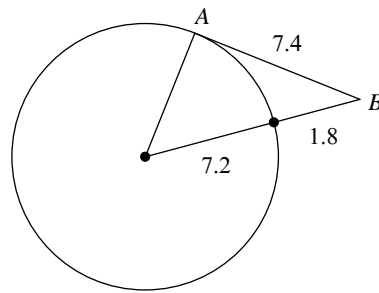


17)



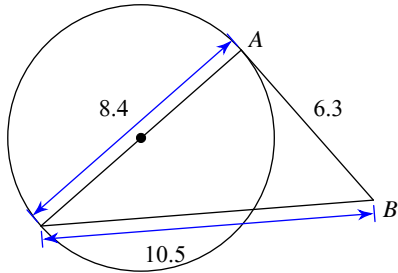
A) Tangent B) Not tangent

18)



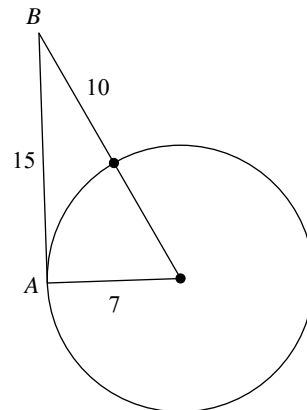
A) Not tangent B) Tangent

19)



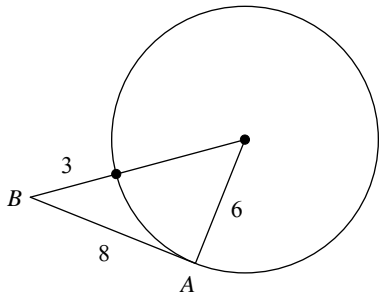
A) Not tangent B) Tangent

20)



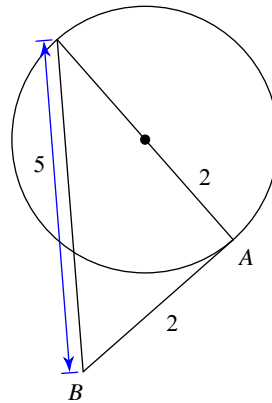
A) Tangent B) Not tangent

21)



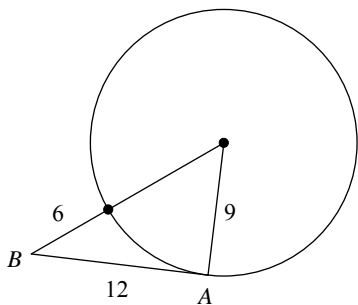
A) Not tangent B) Tangent

22)



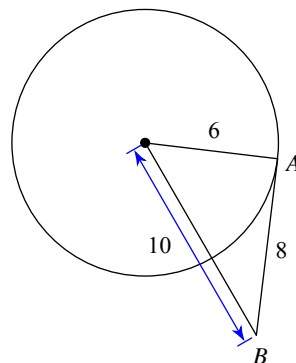
A) Tangent B) Not tangent

23)



A) Not tangent B) Tangent

24)



A) Tangent B) Not tangent



Answers to Assignment (ID: 9)

1) A
5) A
9) A
13) B
17) B
21) A

2) A
6) A
10) A
14) A
18) A
22) B

3) A
7) B
11) A
15) B
19) B
23) B

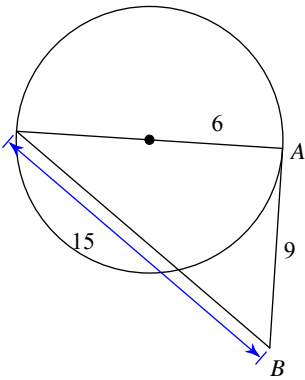
4) A
8) A
12) B
16) B
20) B
24) A



Assignment

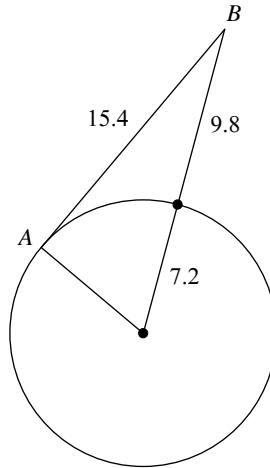
Determine if line AB is tangent to the circle.

1)



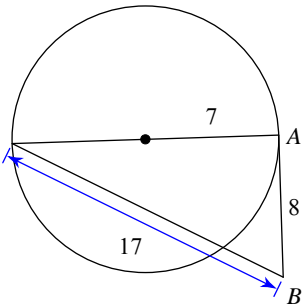
A) Tangent B) Not tangent

2)



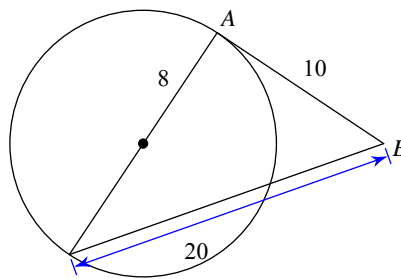
A) Tangent B) Not tangent

3)



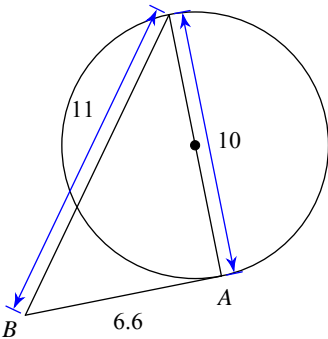
A) Not tangent B) Tangent

4)



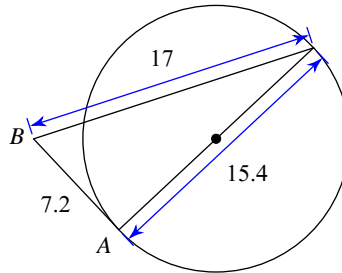
A) Not tangent B) Tangent

5)



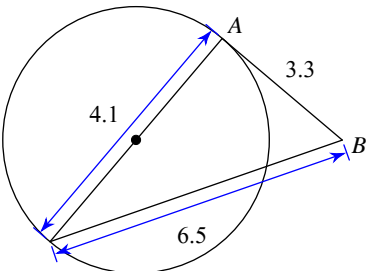
A) Tangent B) Not tangent

6)



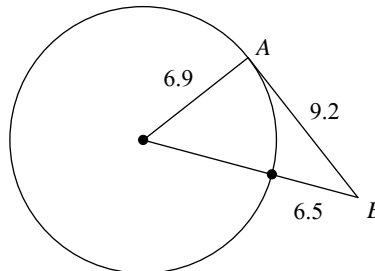
A) Tangent B) Not tangent

7)

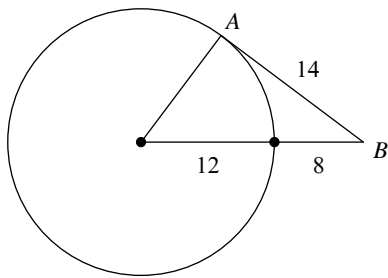


A) Not tangent B) Tangent

8)

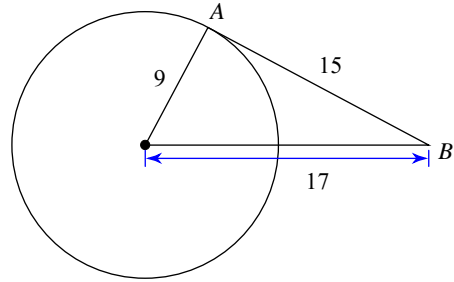


9)



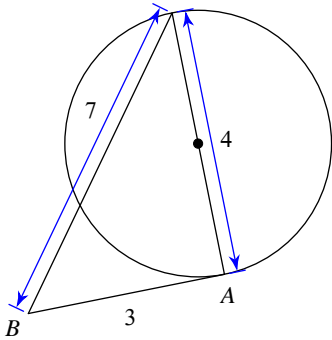
A) Tangent B) Not tangent

10)



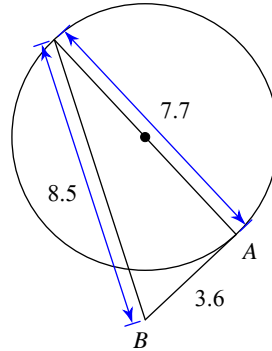
A) Not tangent B) Tangent

11)



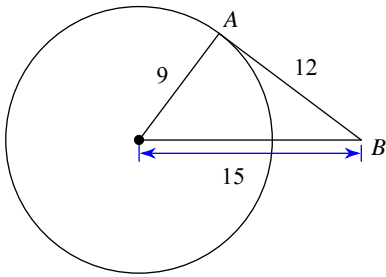
A) Tangent B) Not tangent

12)



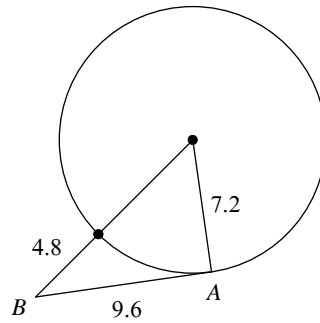
A) Not tangent B) Tangent

13)



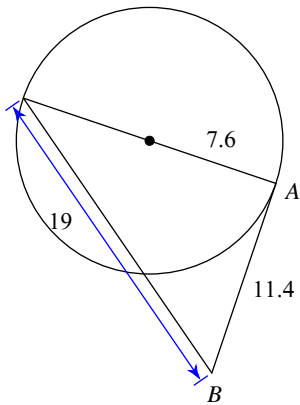
A) Tangent B) Not tangent

14)



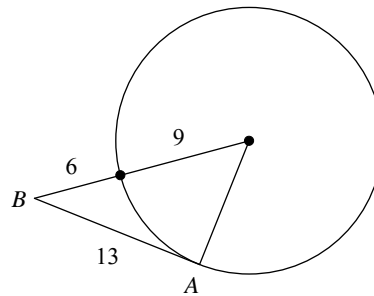
A) Not tangent B) Tangent

15)



A) Not tangent B) Tangent

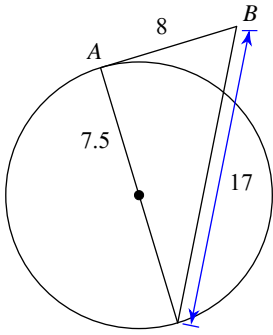
16)



A) Not tangent B) Tangent

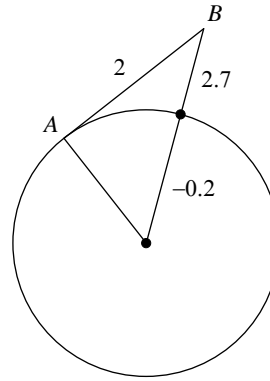


17)



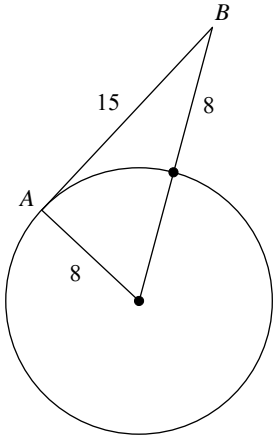
A) Tangent B) Not tangent

18)



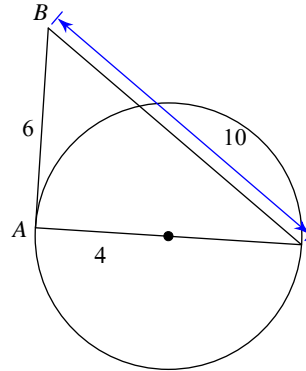
A) Tangent B) Not tangent

19)



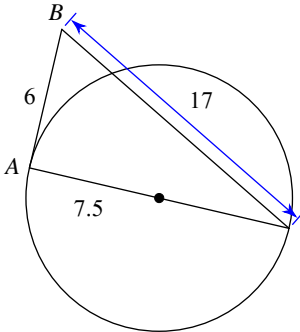
A) Not tangent B) Tangent

20)



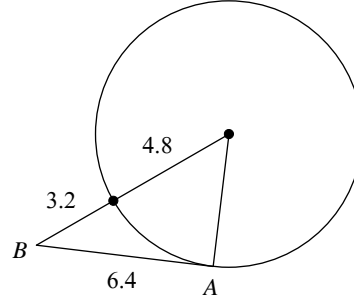
A) Not tangent B) Tangent

21)



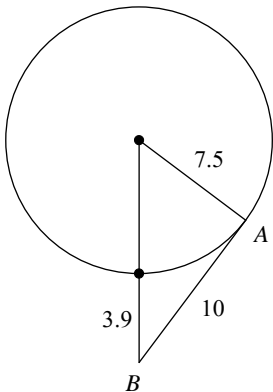
A) Tangent B) Not tangent

22)



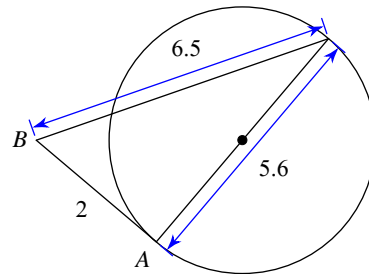
A) Not tangent B) Tangent

23)



A) Tangent B) Not tangent

24)



A) Not tangent B) Tangent



Answers to Assignment (ID: 10)

1) A
5) B
9) B
13) A
17) A
21) B

2) A
6) A
10) A
14) B
18) B
22) B

3) A
7) B
11) B
15) B
19) A
23) B

4) A
8) A
12) B
16) A
20) B
24) A

