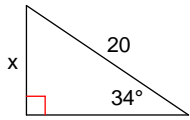


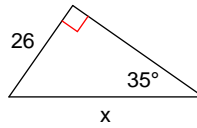
Assignment

Find the missing side. Round to the nearest tenth.

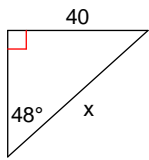
1)



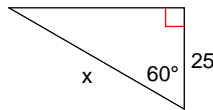
2)



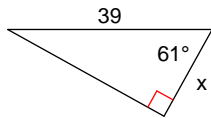
3)



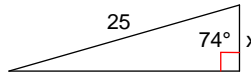
4)



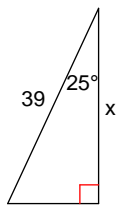
5)



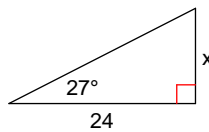
6)



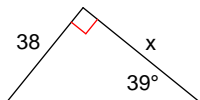
7)



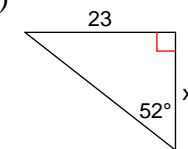
8)



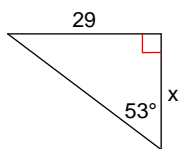
9)



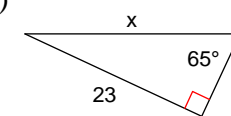
10)



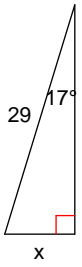
11)



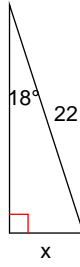
12)



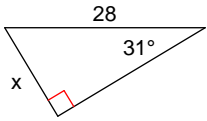
13)



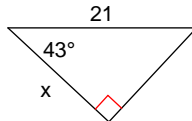
14)



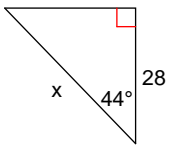
15)



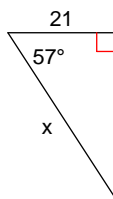
16)



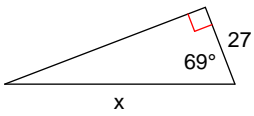
17)



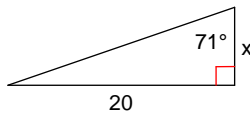
18)



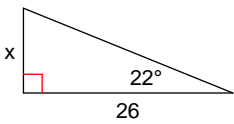
19)



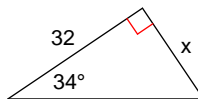
20)



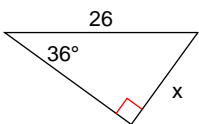
21)



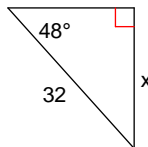
22)



23)



24)



Answers to Assignment (ID: 1)

1) 11.2
5) 18.9
9) 46.9
13) 8.5
17) 38.9
21) 10.5

2) 45.3
6) 6.9
10) 18.0
14) 6.8
18) 38.6
22) 21.6

3) 53.8
7) 35.3
11) 21.9
15) 14.4
19) 75.3
23) 15.3

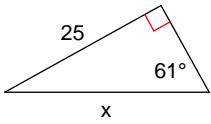
4) 50.0
8) 12.2
12) 25.4
16) 15.4
20) 6.9
24) 23.8



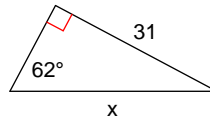
Assignment

Find the missing side. Round to the nearest tenth.

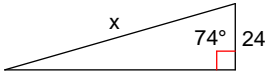
1)



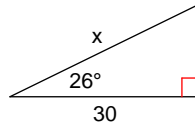
2)



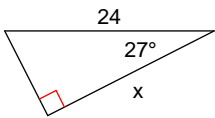
3)



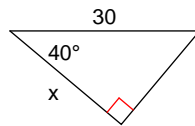
4)



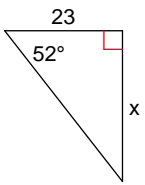
5)



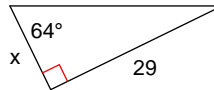
6)



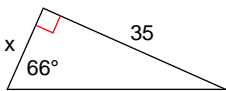
7)



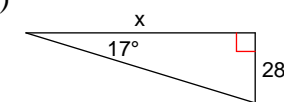
8)



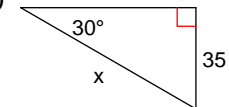
9)



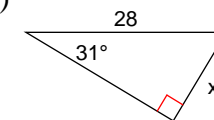
10)



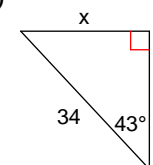
11)



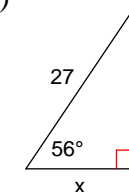
12)



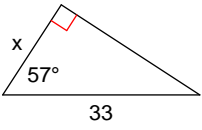
13)



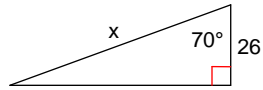
14)



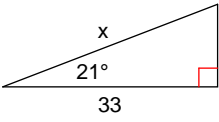
15)



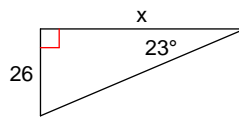
16)



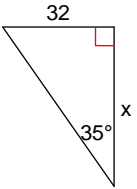
17)



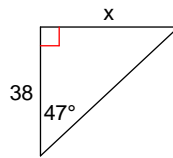
18)



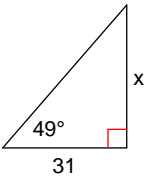
19)



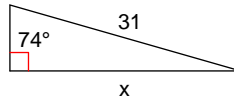
20)



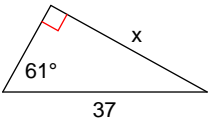
21)



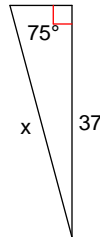
22)



23)



24)



Answers to Assignment (ID: 2)

1) 28.6

5) 21.4

9) 15.6

13) 23.2

17) 35.3

21) 35.7

2) 35.1

6) 23.0

10) 91.6

14) 15.1

18) 61.3

22) 29.8

3) 87.1

7) 29.4

11) 70.0

15) 18.0

19) 45.7

23) 32.4

4) 33.4

8) 14.1

12) 14.4

16) 76.0

20) 40.8

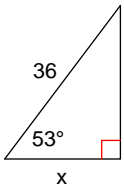
24) 38.3



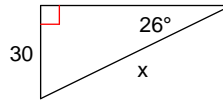
Assignment

Find the missing side. Round to the nearest tenth.

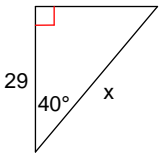
1)



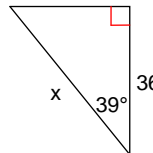
2)



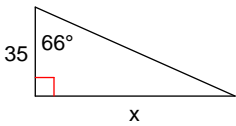
3)



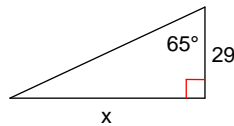
4)



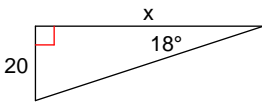
5)



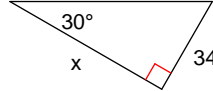
6)



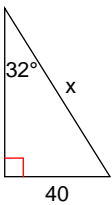
7)



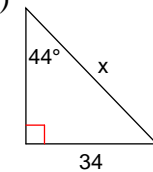
8)



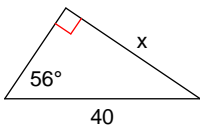
9)



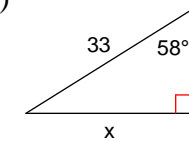
10)



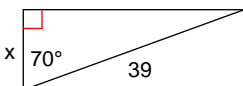
11)

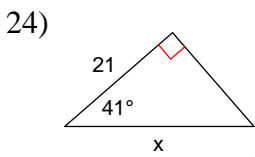
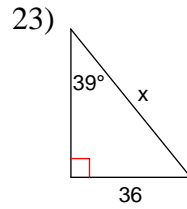
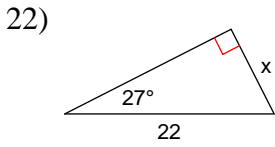
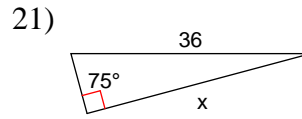
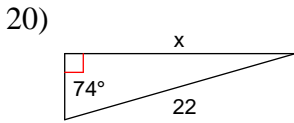
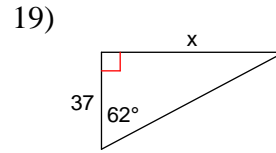
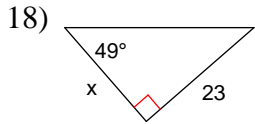
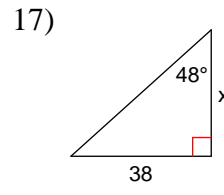
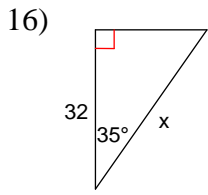
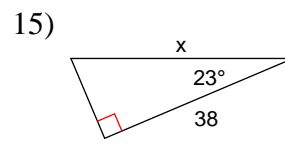
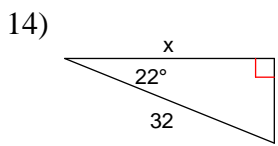


12)



13)





Answers to Assignment (ID: 3)

1) 21.7

5) 78.6

9) 75.5

13) 13.3

17) 34.2

21) 34.8

2) 68.4

6) 62.2

10) 48.9

14) 29.7

18) 20.0

22) 10.0

3) 37.9

7) 61.6

11) 33.2

15) 41.3

19) 69.6

23) 57.2

4) 46.3

8) 58.9

12) 28.0

16) 39.1

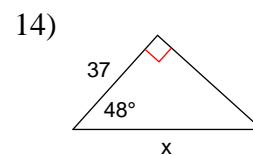
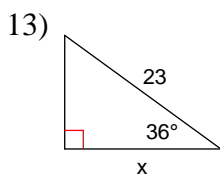
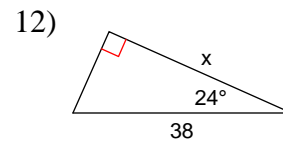
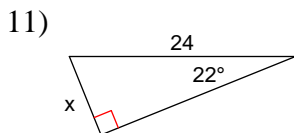
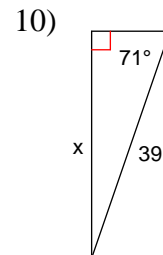
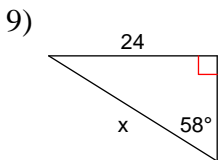
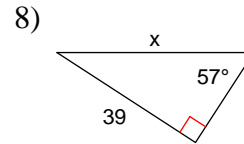
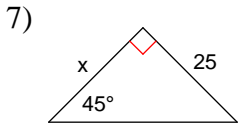
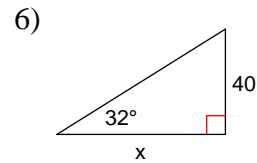
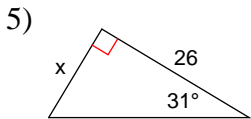
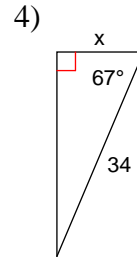
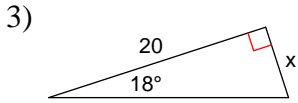
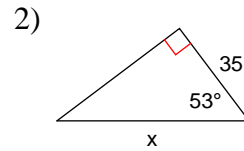
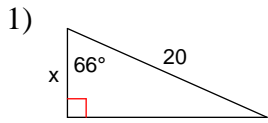
20) 21.1

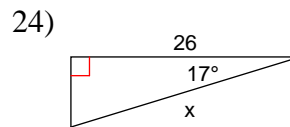
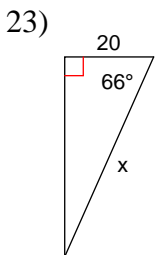
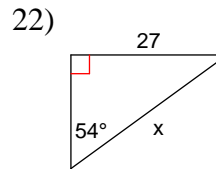
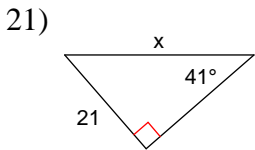
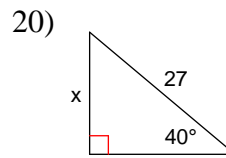
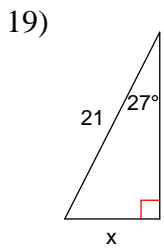
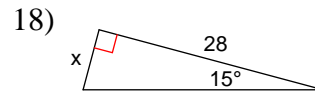
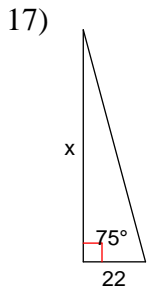
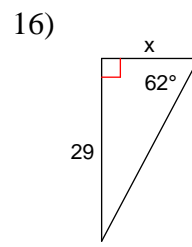
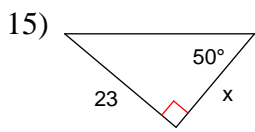
24) 27.8



Assignment

Find the missing side. Round to the nearest tenth.





Answers to Assignment (ID: 4)

1) 8.1
5) 15.6
9) 28.3
13) 18.6
17) 82.1
21) 32.0

2) 58.2
6) 64.0
10) 36.9
14) 55.3
18) 7.5
22) 33.4

3) 6.5
7) 25.0
11) 9.0
15) 19.3
19) 9.5
23) 49.2

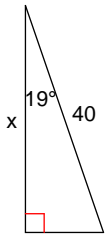
4) 13.3
8) 46.5
12) 34.7
16) 15.4
20) 17.4
24) 27.2



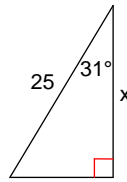
Assignment

Find the missing side. Round to the nearest tenth.

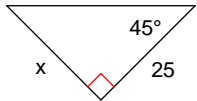
1)



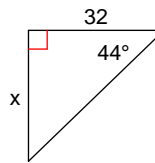
2)



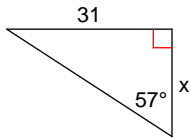
3)



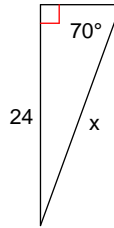
4)



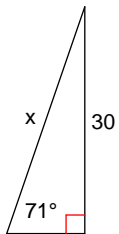
5)



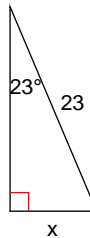
6)



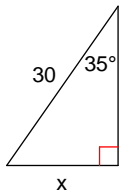
7)



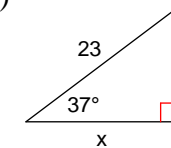
8)



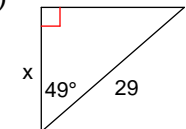
9)



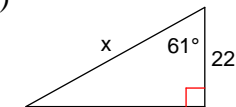
10)



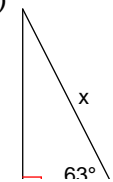
11)



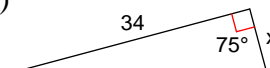
12)



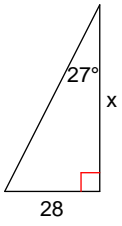
13)



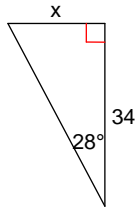
14)



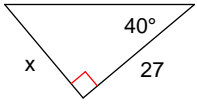
15)



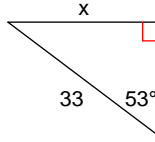
16)



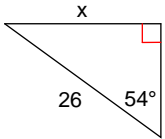
17)



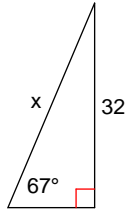
18)



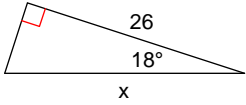
19)



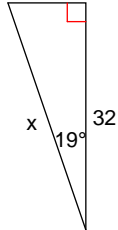
20)



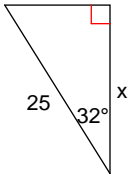
21)



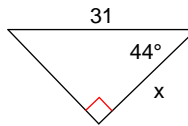
22)



23)



24)



Answers to Assignment (ID: 5)

1) 37.8
5) 20.1
9) 17.2
13) 61.7
17) 22.7
21) 27.3

2) 21.4
6) 25.5
10) 18.4
14) 9.1
18) 26.4
22) 33.8

3) 25.0
7) 31.7
11) 19.0
15) 55.0
19) 21.0
23) 21.2

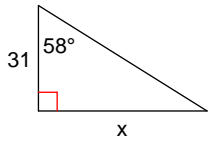
4) 30.9
8) 9.0
12) 45.4
16) 18.1
20) 34.8
24) 22.3



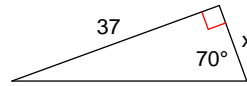
Assignment

Find the missing side. Round to the nearest tenth.

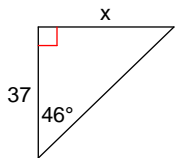
1)



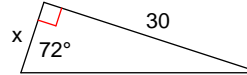
2)



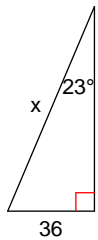
3)



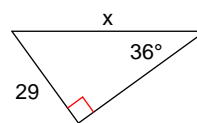
4)



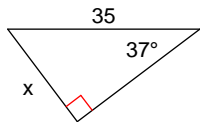
5)



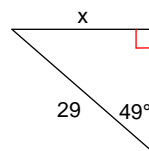
6)



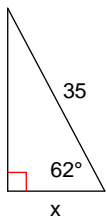
7)



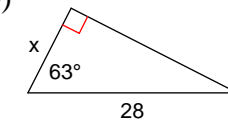
8)



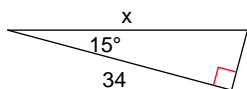
9)



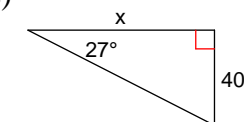
10)

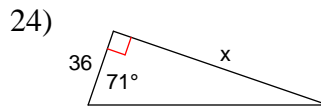
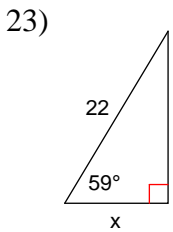
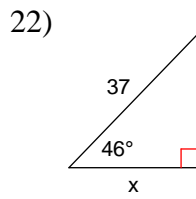
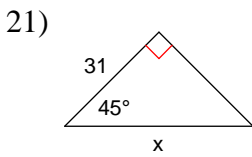
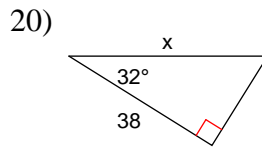
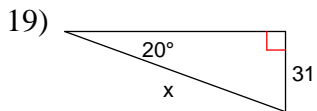
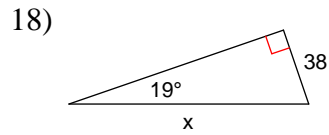
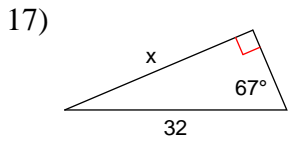
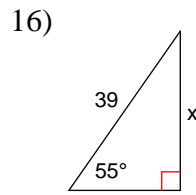
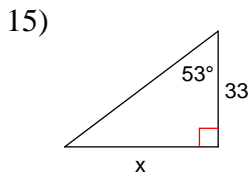
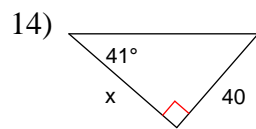
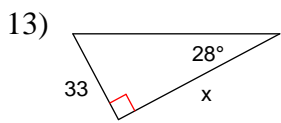


11)



12)





Answers to Assignment (ID: 6)

1) 49.6
5) 92.1
9) 16.4
13) 62.1
17) 29.5
21) 43.8

2) 13.5
6) 49.3
10) 12.7
14) 46.0
18) 116.7
22) 25.7

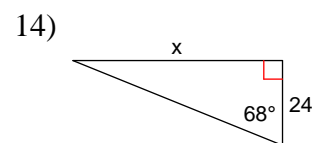
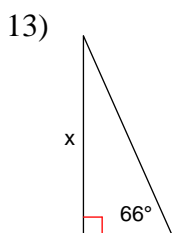
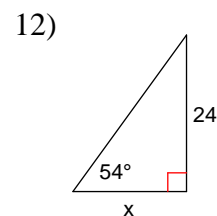
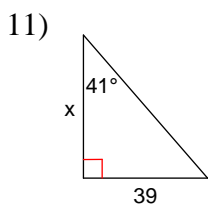
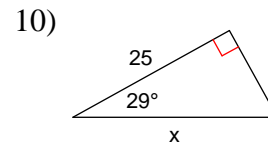
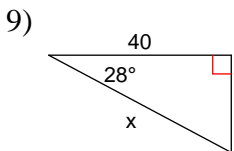
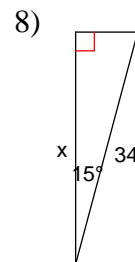
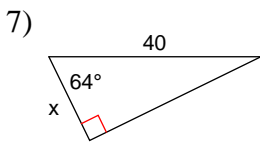
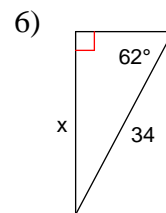
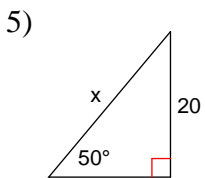
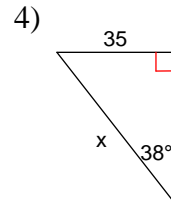
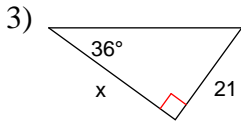
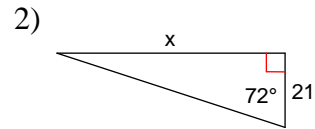
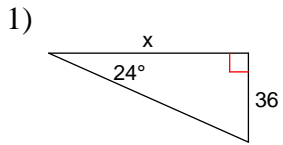
3) 38.3
7) 21.1
11) 35.2
15) 43.8
19) 90.6
23) 11.3

4) 9.7
8) 21.9
12) 78.5
16) 31.9
20) 44.8
24) 104.6

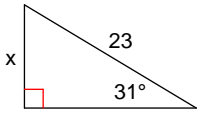


Assignment

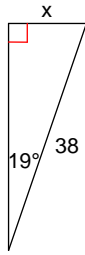
Find the missing side. Round to the nearest tenth.



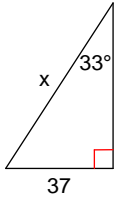
15)



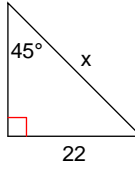
16)



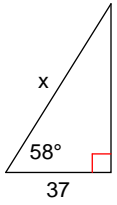
17)



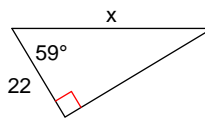
18)



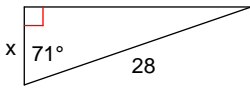
19)



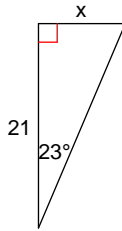
20)



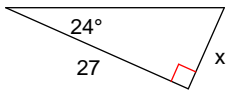
21)



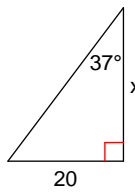
22)



23)



24)



Answers to Assignment (ID: 7)

1) 80.9

5) 26.1

9) 45.3

13) 87.6

17) 67.9

21) 9.1

2) 64.6

6) 30.0

10) 28.6

14) 59.4

18) 31.1

22) 8.9

3) 28.9

7) 17.5

11) 44.9

15) 11.8

19) 69.8

23) 12.0

4) 56.8

8) 32.8

12) 17.4

16) 12.4

20) 42.7

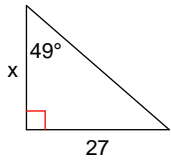
24) 26.5



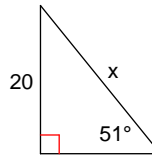
Assignment

Find the missing side. Round to the nearest tenth.

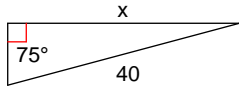
1)



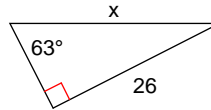
2)



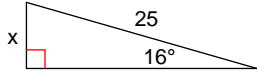
3)



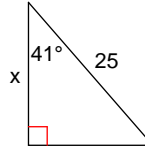
4)



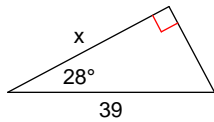
5)



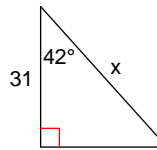
6)



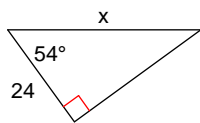
7)



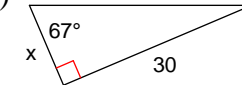
8)



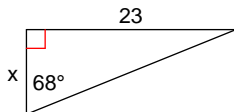
9)



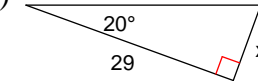
10)



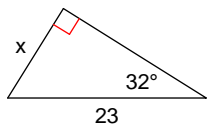
11)



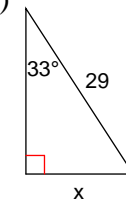
12)



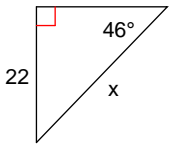
13)



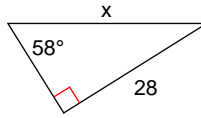
14)



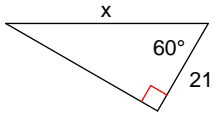
15)



16)



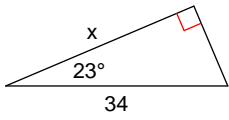
17)



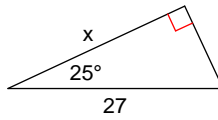
18)



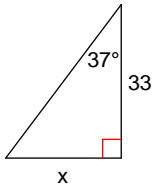
19)



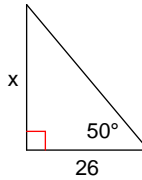
20)



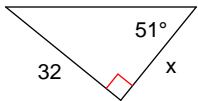
21)



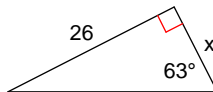
22)



23)



24)



Answers to Assignment (ID: 8)

1) 23.5

5) 6.9

9) 40.8

13) 12.2

17) 42.0

21) 24.9

2) 25.7

6) 18.9

10) 12.7

14) 15.8

18) 87.4

22) 31.0

3) 38.6

7) 34.4

11) 9.3

15) 30.6

19) 31.3

23) 25.9

4) 29.2

8) 41.7

12) 10.6

16) 33.0

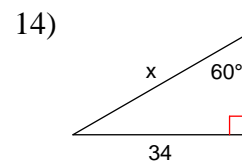
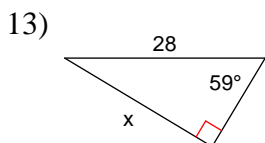
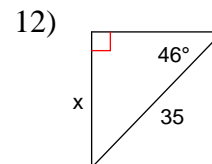
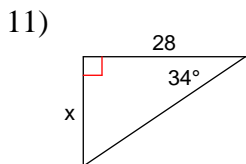
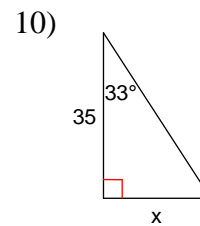
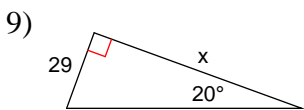
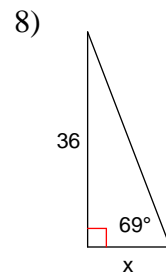
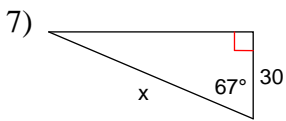
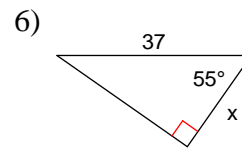
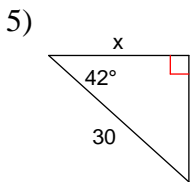
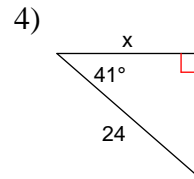
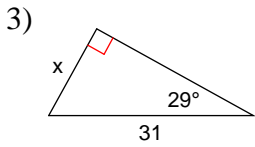
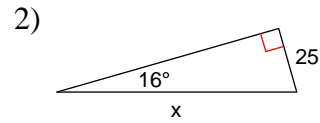
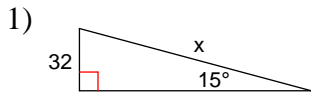
20) 24.5

24) 13.2

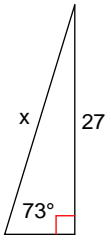


Assignment

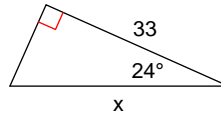
Find the missing side. Round to the nearest tenth.



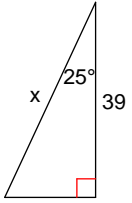
15)



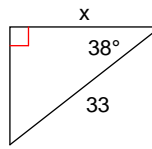
16)



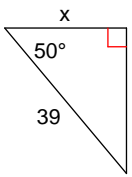
17)



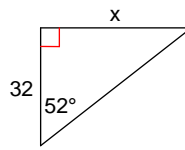
18)



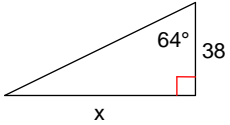
19)



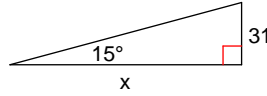
20)



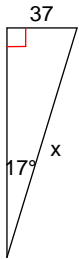
21)



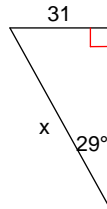
22)



23)



24)



Answers to Assignment (ID: 9)

1) 123.6
5) 22.3
9) 79.7
13) 24.0
17) 43.0
21) 77.9

2) 90.7
6) 21.2
10) 22.7
14) 39.3
18) 26.0
22) 115.7

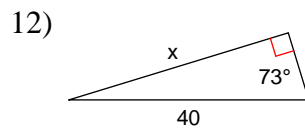
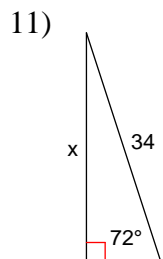
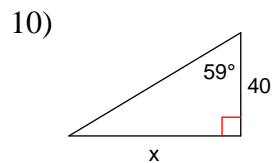
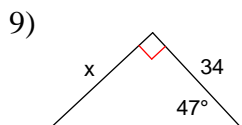
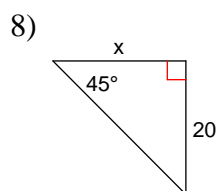
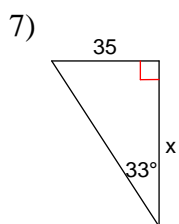
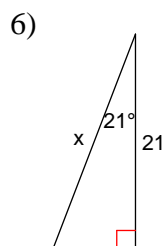
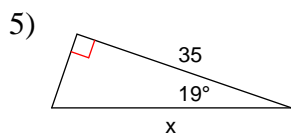
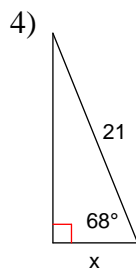
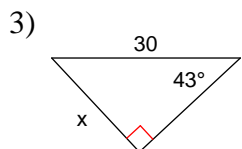
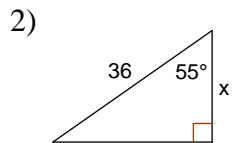
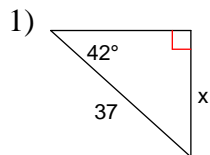
3) 15.0
7) 76.8
11) 18.9
15) 28.2
19) 25.1
23) 126.6

4) 18.1
8) 13.8
12) 25.2
16) 36.1
20) 41.0
24) 63.9

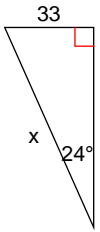


Assignment

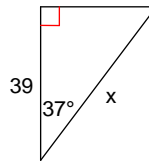
Find the missing side. Round to the nearest tenth.



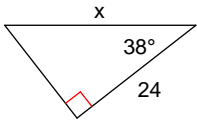
13)



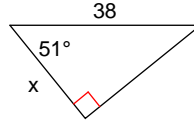
14)



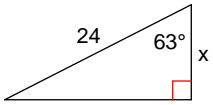
15)



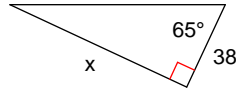
16)



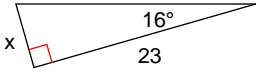
17)



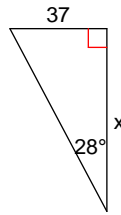
18)



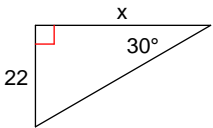
19)



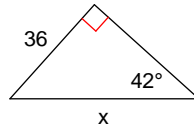
20)



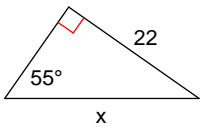
21)



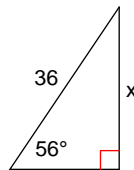
22)



23)



24)



Answers to Assignment (ID: 10)

1) 24.8
5) 37.0
9) 36.5
13) 81.1
17) 10.9
21) 38.1

2) 20.6
6) 22.5
10) 66.6
14) 48.8
18) 81.5
22) 53.8

3) 20.5
7) 53.9
11) 32.3
15) 30.5
19) 6.6
23) 26.9

4) 7.9
8) 20.0
12) 38.3
16) 23.9
20) 69.6
24) 29.8

