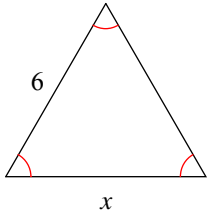


Assignment

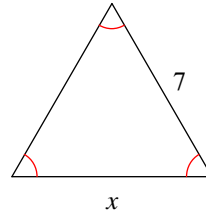
Find the value of  $x$ .

1)



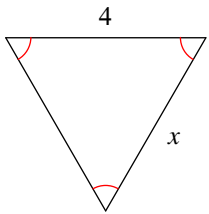
- A) 8      B) 10
- C) 6      D) 7

2)



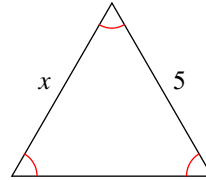
- A) 5      B) 6
- C) 10     D) 7

3)



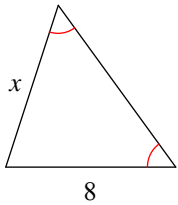
- A) 10     B) 6
- C) 4      D) 8

4)



- A) 7      B) 5
- C) 8      D) 6

5)



- A) 8      B) 10
- C) 6      D) 5



## Answers to Assignment (ID: 1)

1) C  
5) A

2) D

3) C

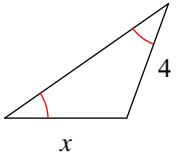
4) B



Assignment

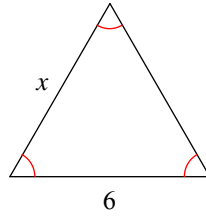
Find the value of  $x$ .

1)



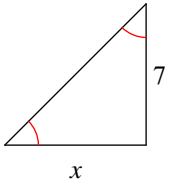
- A) 5
- B) 10
- C) 9
- D) 4

2)



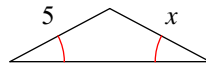
- A) 6
- B) 10
- C) 9
- D) 8

3)



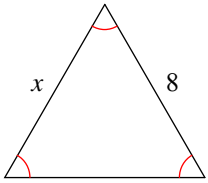
- A) 7
- B) 10
- C) 9
- D) 8

4)



- A) 6
- B) 9
- C) 10
- D) 5

5)



- A) 5
- B) 8
- C) 7
- D) 10



## Answers to Assignment (ID: 2)

1) D  
5) B

2) A

3) A

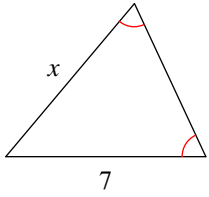
4) D



Assignment

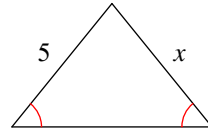
Find the value of  $x$ .

1)



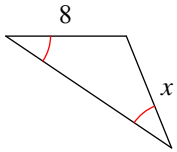
- A) 7      B) 6
- C) 5      D) 9

2)



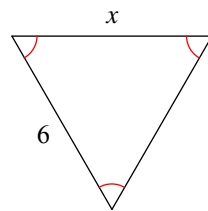
- A) 5      B) 10
- C) 9      D) 7

3)



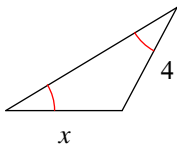
- A) 5      B) 8
- C) 9      D) 7

4)



- A) 6      B) 8
- C) 10      D) 9

5)



- A) 4      B) 6
- C) 8      D) 10



## Answers to Assignment (ID: 3)

1) A  
5) A

2) A

3) B

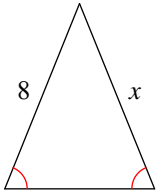
4) A



Assignment

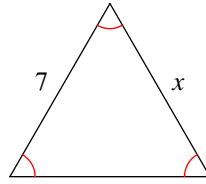
Find the value of  $x$ .

1)



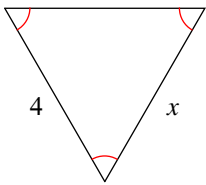
- A) 9
- B) 8
- C) 10
- D) 6

2)



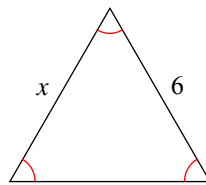
- A) 8
- B) 9
- C) 6
- D) 7

3)



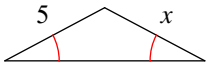
- A) 9
- B) 10
- C) 6
- D) 4

4)



- A) 8
- B) 10
- C) 5
- D) 6

5)



- A) 10
- B) 5
- C) 9
- D) 8



## Answers to Assignment (ID: 4)

1) B  
5) B

2) D

3) D

4) D

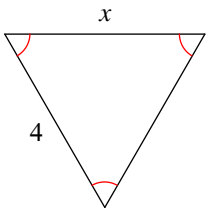




Assignment

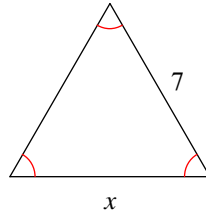
Find the value of  $x$ .

1)



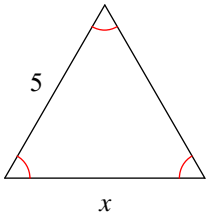
- A) 6
- B) 7
- C) 10
- D) 4

2)



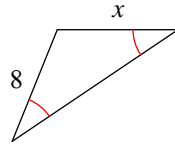
- A) 9
- B) 10
- C) 6
- D) 7

3)



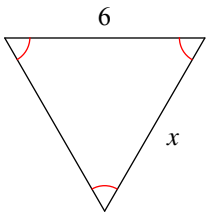
- A) 7
- B) 10
- C) 5
- D) 8

4)



- A) 10
- B) 5
- C) 7
- D) 8

5)



- A) 9
- B) 5
- C) 7
- D) 6



## Answers to Assignment (ID: 5)

1) D  
5) D

2) D

3) C

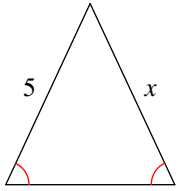
4) D



Assignment

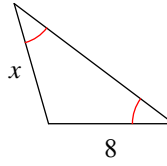
Find the value of  $x$ .

1)



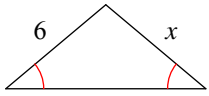
- A) 9      B) 5
- C) 6      D) 7

2)



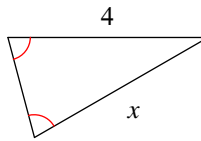
- A) 9      B) 5
- C) 8      D) 6

3)



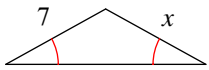
- A) 6      B) 7
- C) 5      D) 10

4)



- A) 4      B) 6
- C) 8      D) 9

5)



- A) 5      B) 6
- C) 9      D) 7



## Answers to Assignment (ID: 6)

1) B  
5) D

2) C

3) A

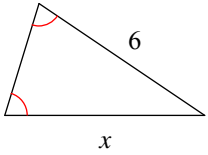
4) A



Assignment

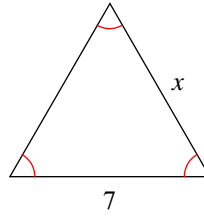
Find the value of  $x$ .

1)



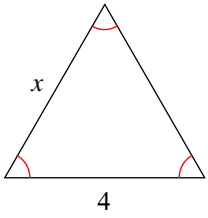
- A) 6      B) 5  
C) 7      D) 8

2)



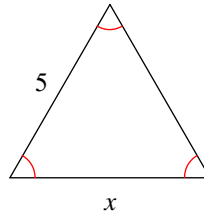
- A) 5      B) 7  
C) 8      D) 9

3)



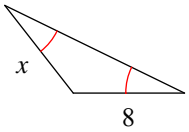
- A) 7      B) 5  
C) 6      D) 4

4)



- A) 7      B) 8  
C) 10     D) 5

5)



- A) 7      B) 8  
C) 10     D) 9



## Answers to Assignment (ID: 7)

1) A  
5) B

2) B

3) D

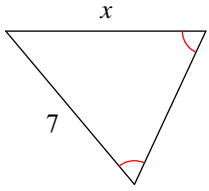
4) D



Assignment

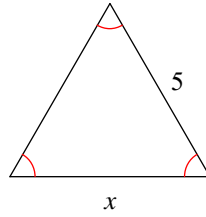
Find the value of  $x$ .

1)



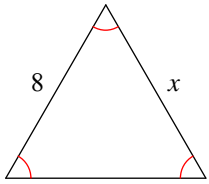
- A) 6
- B) 10
- C) 9
- D) 7

2)



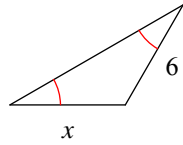
- A) 9
- B) 5
- C) 6
- D) 8

3)



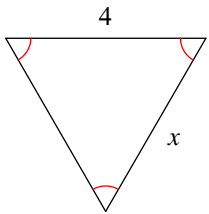
- A) 9
- B) 7
- C) 10
- D) 8

4)



- A) 10
- B) 5
- C) 9
- D) 6

5)



- A) 6
- B) 4
- C) 10
- D) 9



## Answers to Assignment (ID: 8)

1) D  
5) B

2) B

3) D

4) D

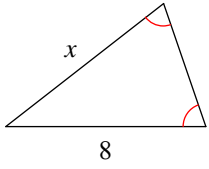




Assignment

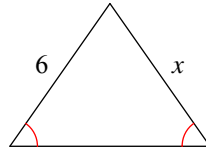
Find the value of  $x$ .

1)



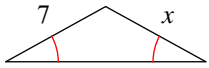
- A) 8      B) 9
- C) 7      D) 5

2)



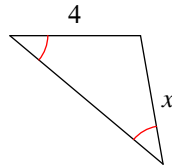
- A) 10      B) 6
- C) 9      D) 7

3)



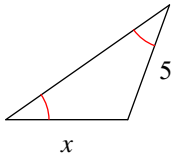
- A) 5      B) 8
- C) 9      D) 7

4)



- A) 6      B) 4
- C) 9      D) 7

5)



- A) 9      B) 5
- C) 10      D) 6



## Answers to Assignment (ID: 9)

1) A  
5) B

2) B

3) D

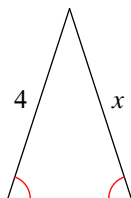
4) B



## Assignment

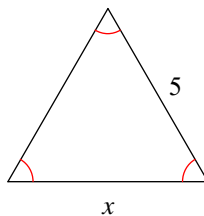
Find the value of  $x$ .

1)



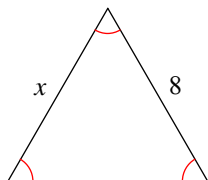
- A) 5      B) 6  
C) 7      D) 4

2)



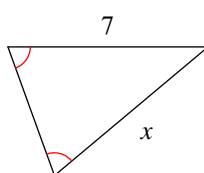
- A) 5      B) 10  
C) 8      D) 6

3)



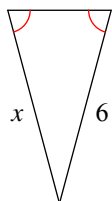
- A) 5      B) 10  
C) 8      D) 7

4)



- A) 8      B) 9  
C) 7      D) 6

5)



- A) 10      B) 9  
C) 6      D) 5



## Answers to Assignment (ID: 10)

1) D  
5) C

2) A

3) C

4) C

