

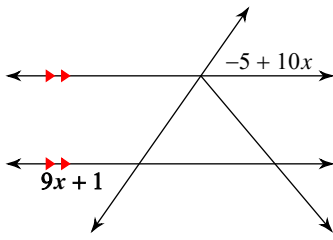
Assignment

Name _____

Date _____ Period _____

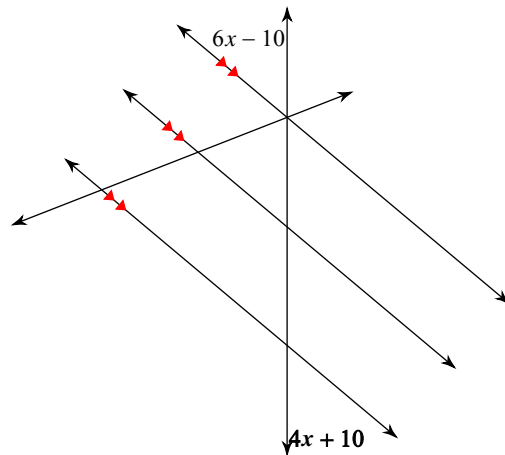
Find the measure of the angle indicated in bold.

1)



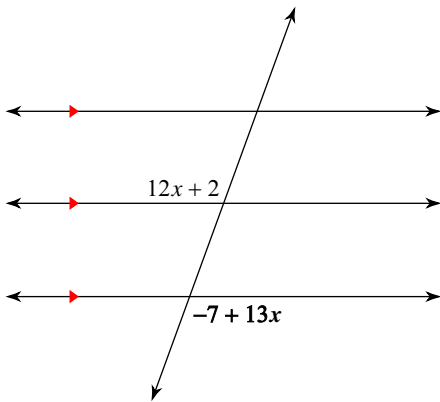
- A) 135°
- B) 45°
- C) 100°
- D) 55°

2)



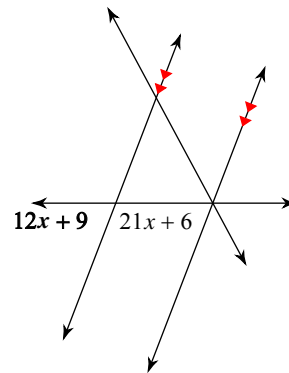
- A) 50°
- B) 61°
- C) 130°
- D) 145°

3)



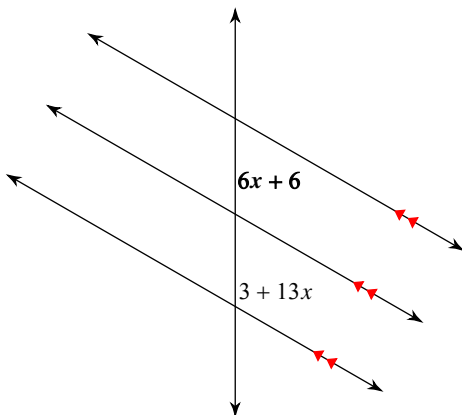
- A) 110°
- B) 85°
- C) 99°
- D) 115°

4)



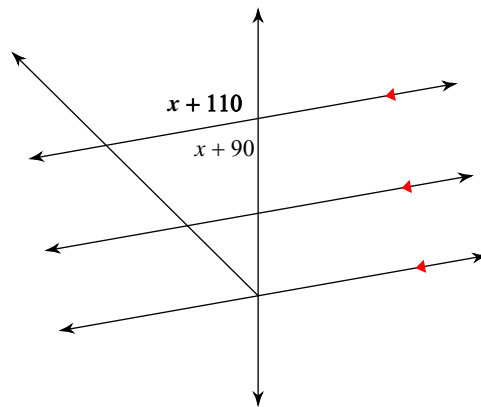
- A) 73°
- B) 69°
- C) 81°
- D) 122°

5)



- A) 40°
- B) 145°
- C) 80°
- D) 60°

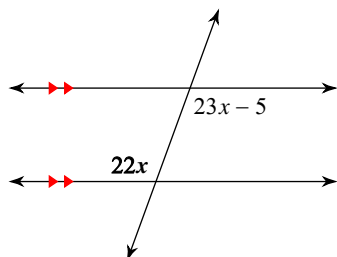
6)



- A) 105°
- B) 63°
- C) 75°
- D) 100°

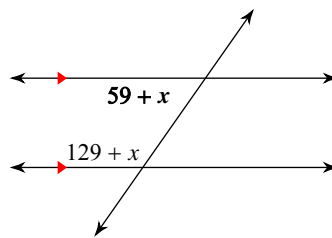


7)



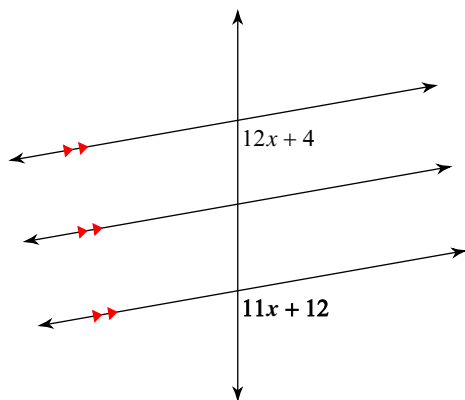
- A) 45° B) 50°
 C) 110° D) 143°

8)



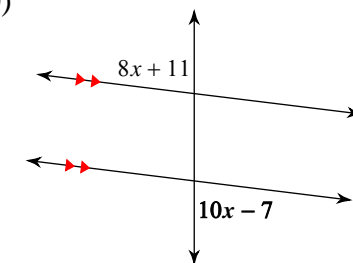
- A) 45° B) 40°
 C) 55° D) 115°

9)



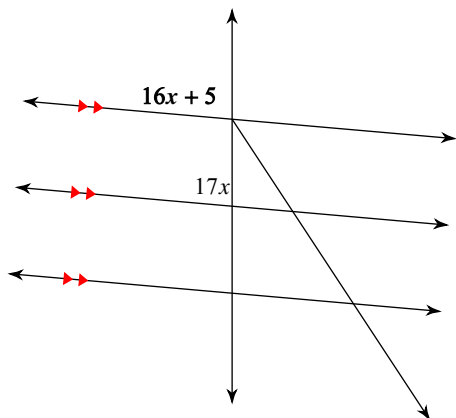
- A) 110° B) 130°
 C) 95° D) 100°

10)



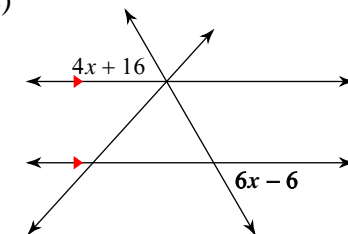
- A) 89° B) 109°
 C) 83° D) 84°

11)



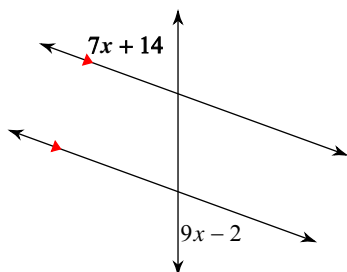
- A) 80° B) 63°
 C) 85° D) 95°

12)



- A) 75° B) 40°
 C) 60° D) 73°

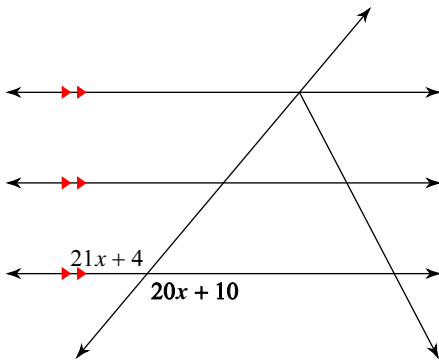
13)



- A) 61° B) 135°
 C) 70° D) 65°

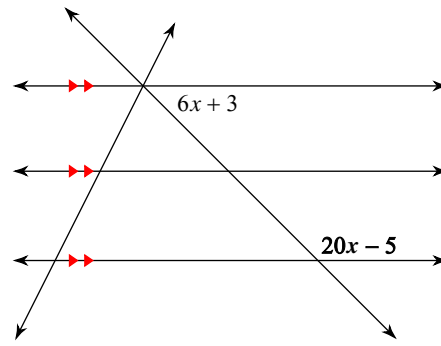


14)



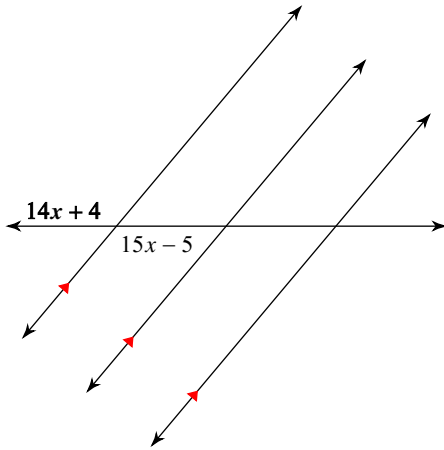
- A) 105° B) 40°
 C) 110° D) 130°

15)



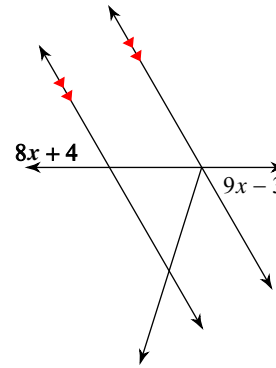
- A) 135° B) 105°
 C) 50° D) 120°

16)



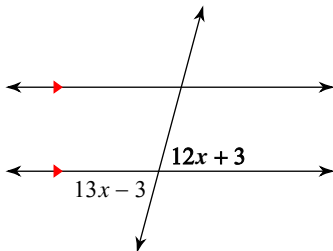
- A) 110° B) 105°
 C) 130° D) 125°

17)



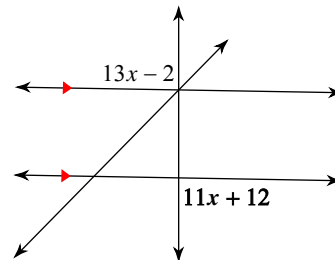
- A) 45° B) 60°
 C) 65° D) 48°

18)



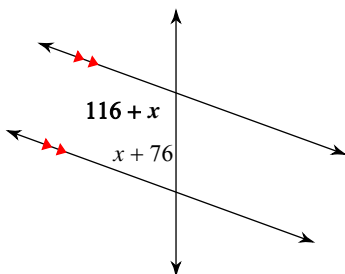
- A) 75° B) 88°
 C) 55° D) 80°

19)



- A) 120° B) 89°
 C) 85° D) 86°

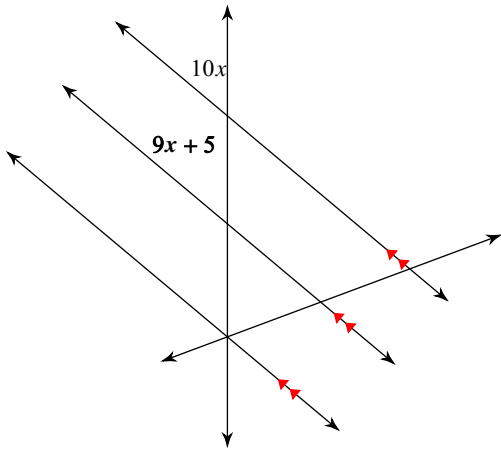
20)



- A) 135° B) 110°
 C) 115° D) 106°

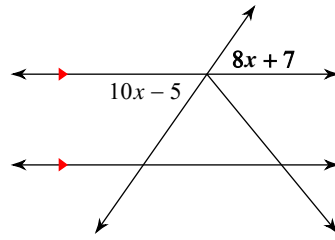


21)



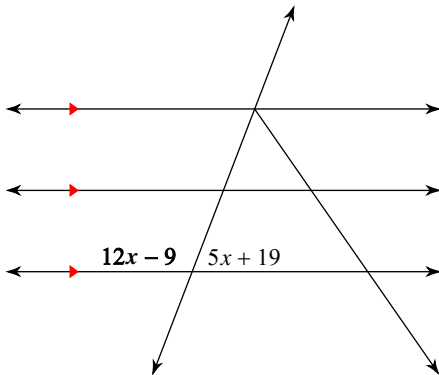
- A) 55°
- B) 115°
- C) 35°
- D) 50°

22)



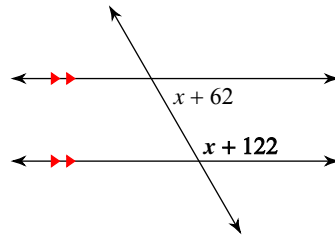
- A) 120°
- B) 50°
- C) 55°
- D) 143°

23)



- A) 112°
- B) 94°
- C) 118°
- D) 111°

24)



- A) 110°
- B) 125°
- C) 140°
- D) 120°



Answers to Assignment (ID: 1)

- 1) D
- 5) D
- 9) D
- 13) C
- 17) B
- 21) D

- 2) A
- 6) D
- 10) C
- 14) D
- 18) A
- 22) C

- 3) A
- 7) C
- 11) C
- 15) A
- 19) B
- 23) D

- 4) B
- 8) C
- 12) C
- 16) C
- 20) B
- 24) D

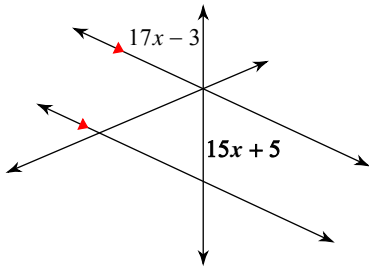


Assignment

Date _____ Period _____

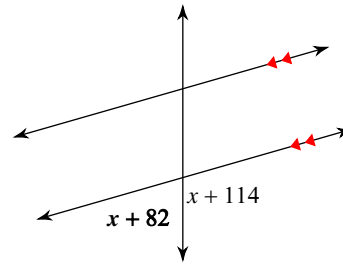
Find the measure of the angle indicated in bold.

1)



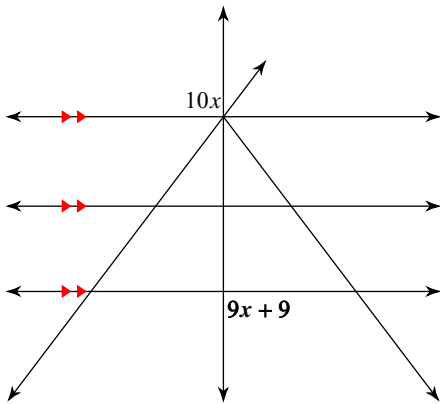
- A) 65°
- B) 60°
- C) 95°
- D) 75°

2)



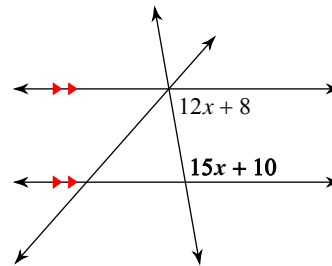
- A) 74°
- B) 54°
- C) 49°
- D) 79°

3)



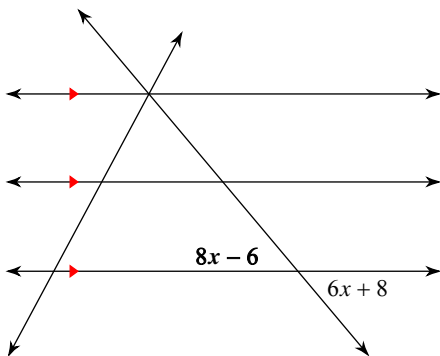
- A) 107°
- B) 65°
- C) 90°
- D) 60°

4)



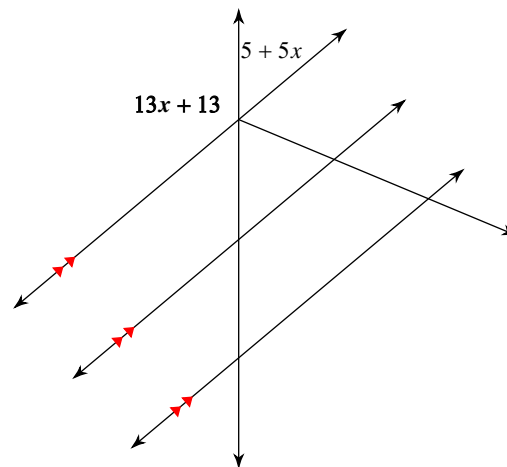
- A) 71°
- B) 99°
- C) 65°
- D) 100°

5)



- A) 50°
- B) 52°
- C) 40°
- D) 130°

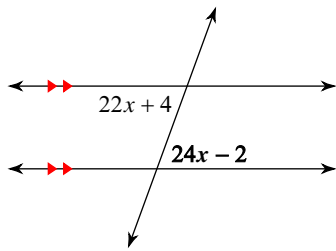
6)



- A) 46°
- B) 130°
- C) 145°
- D) 68°

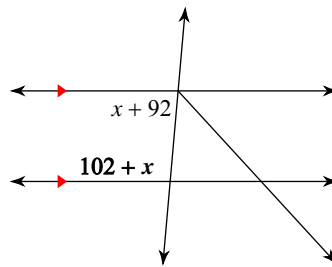


7)



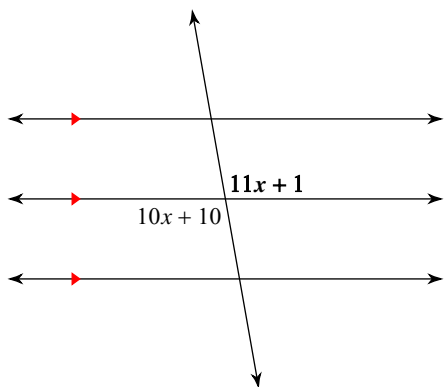
- A) 70° B) 108°
 C) 66° D) 50°

8)



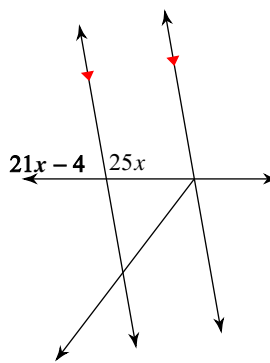
- A) 125° B) 100°
 C) 105° D) 95°

9)



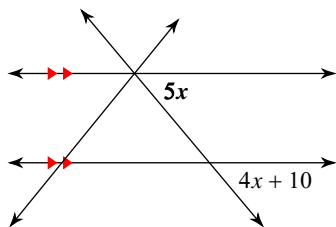
- A) 130° B) 100°
 C) 125° D) 121°

10)



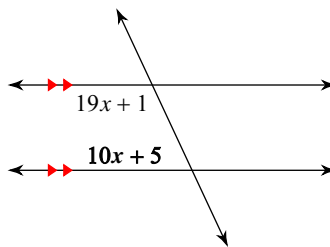
- A) 70° B) 58°
 C) 80° D) 60°

11)



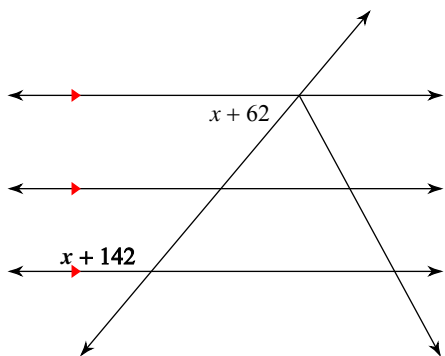
- A) 50° B) 58°
 C) 60° D) 45°

12)



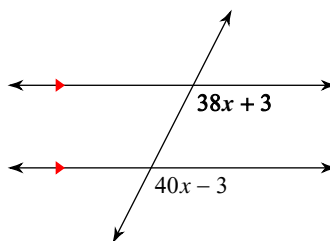
- A) 135° B) 65°
 C) 75° D) 66°

13)



- A) 125° B) 95°
 C) 130° D) 107°

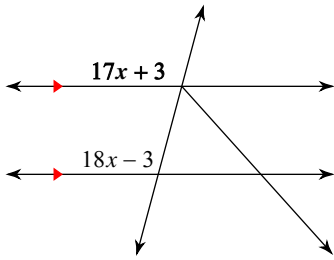
14)



- A) 117° B) 98°
 C) 144° D) 129°

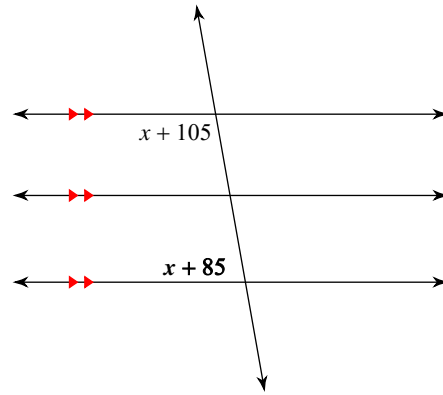


15)



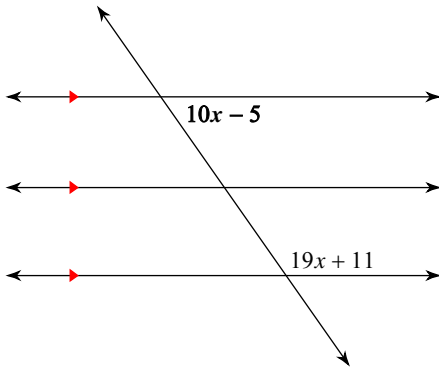
- A) 50° B) 110°
 C) 114° D) 105°

16)



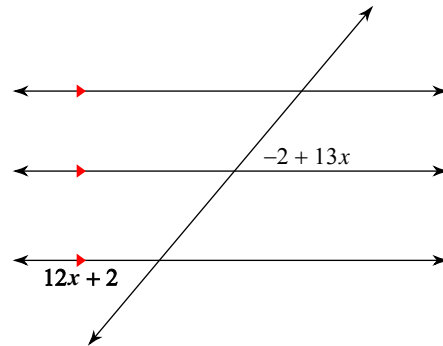
- A) 80° B) 50°
 C) 60° D) 65°

17)



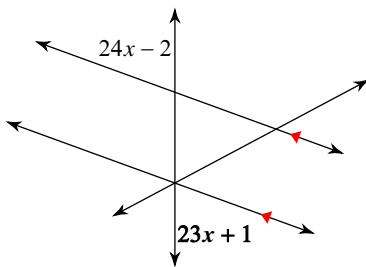
- A) 55° B) 120°
 C) 115° D) 70°

18)



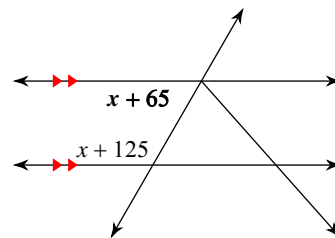
- A) 50° B) 38°
 C) 40° D) 111°

19)



- A) 83° B) 61°
 C) 114° D) 70°

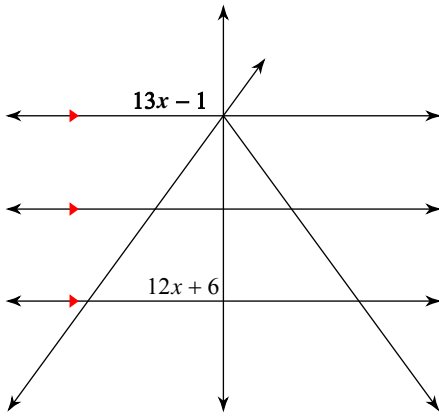
20)



- A) 60° B) 40°
 C) 115° D) 50°

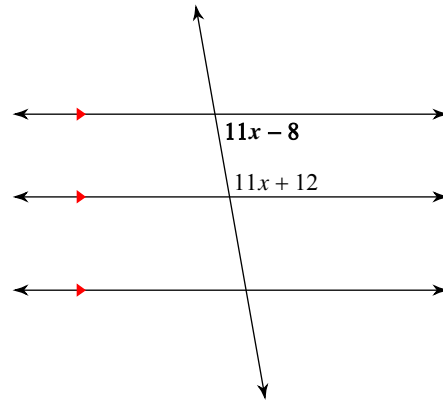


21)



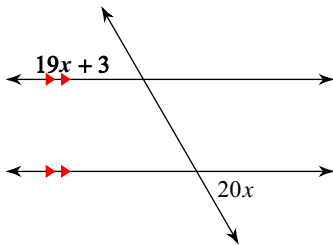
- A) 110°
- B) 65°
- C) 105°
- D) 90°

22)



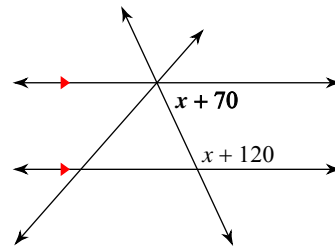
- A) 116°
- B) 65°
- C) 80°
- D) 125°

23)



- A) 60°
- B) 99°
- C) 65°
- D) 80°

24)



- A) 65°
- B) 80°
- C) 130°
- D) 50°



Answers to Assignment (ID: 2)

1) A
5) A
9) B
13) C
17) A
21) D

2) A
6) B
10) C
14) A
18) A
22) C

3) C
7) A
11) A
15) D
19) D
23) A

4) D
8) D
12) B
16) A
20) A
24) A



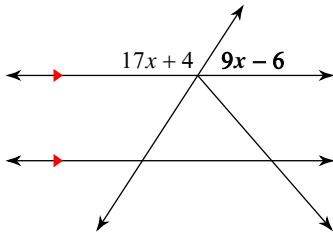
Assignment

Name _____

Date _____ Period _____

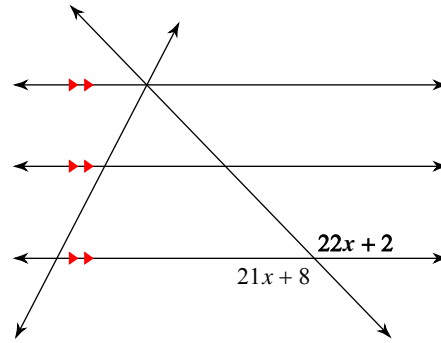
Find the measure of the angle indicated in bold.

1)



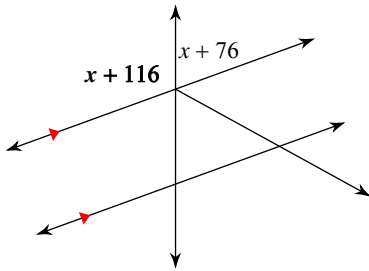
- A) **57°**
- B) **62°**
- C) **37°**
- D) **44°**

2)



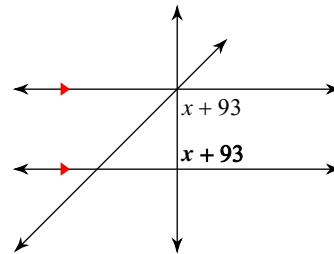
- A) **120°**
- B) **134°**
- C) **141°**
- D) **47°**

3)



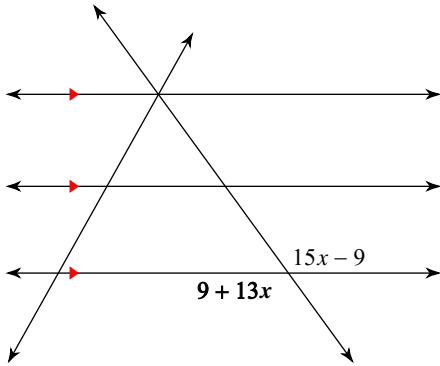
- A) **110°**
- B) **135°**
- C) **85°**
- D) **75°**

4)



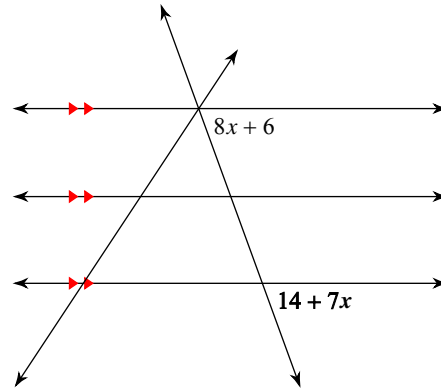
- A) **121°**
- B) **88°**
- C) **90°**
- D) **102°**

5)



- A) **135°**
- B) **126°**
- C) **116°**
- D) **138°**

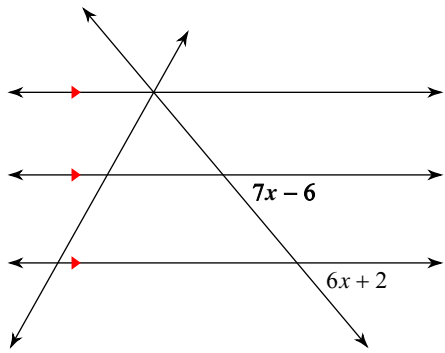
6)



- A) **70°**
- B) **77°**
- C) **83°**
- D) **80°**

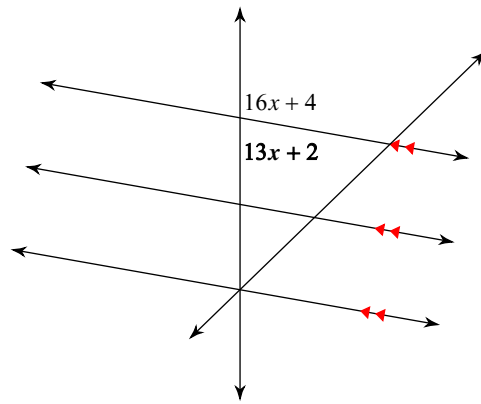


7)



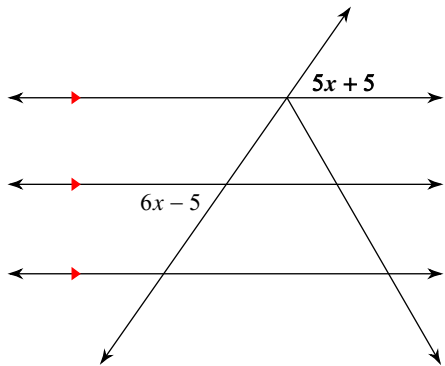
- A) 50° B) 65°
 C) 125° D) 35°

8)



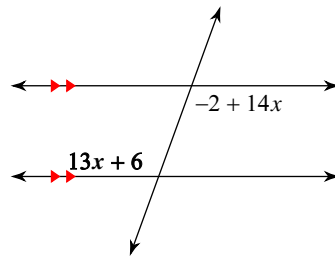
- A) 56° B) 85°
 C) 50° D) 80°

9)



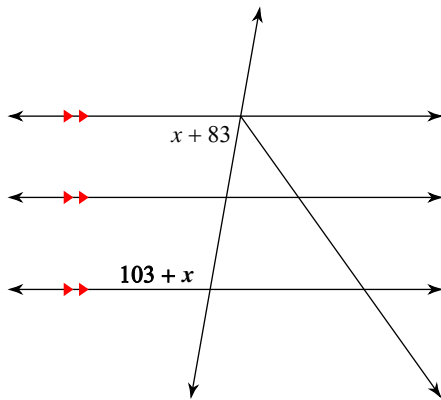
- A) 65° B) 45°
 C) 55° D) 115°

10)



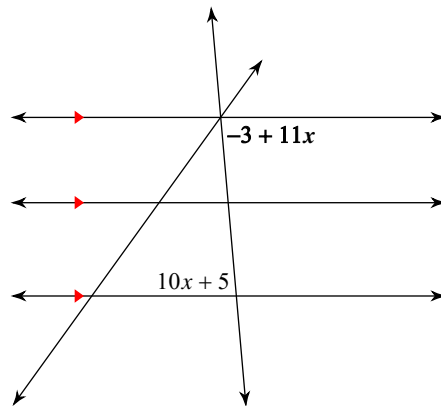
- A) 130° B) 110°
 C) 69° D) 95°

11)



- A) 91° B) 125°
 C) 100° D) 70°

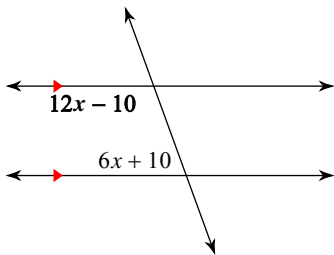
12)



- A) 75° B) 85°
 C) 83° D) 110°

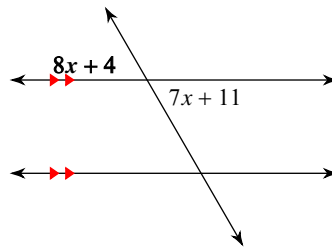


13)



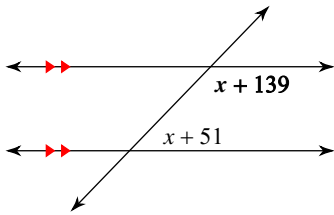
- A) 120° B) 111°
 C) 110° D) 83°

14)



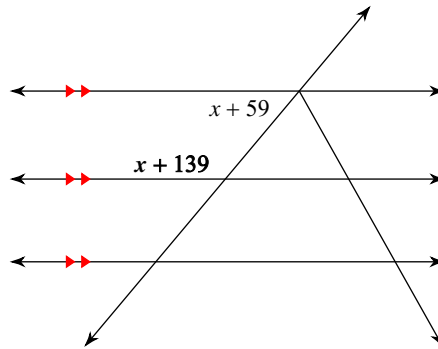
- A) 92° B) 60°
 C) 75° D) 63°

15)



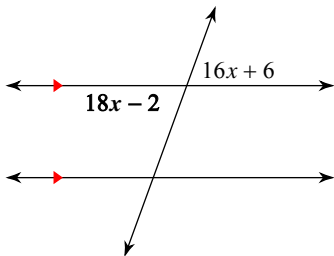
- A) 101° B) 102°
 C) 134° D) 135°

16)



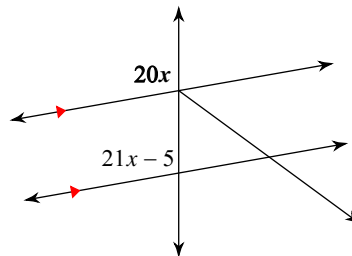
- A) 125° B) 142°
 C) 45° D) 130°

17)



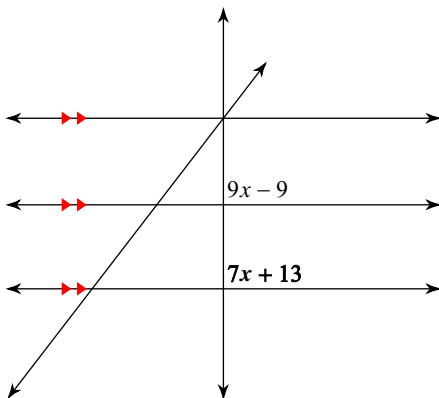
- A) 105° B) 70°
 C) 102° D) 84°

18)



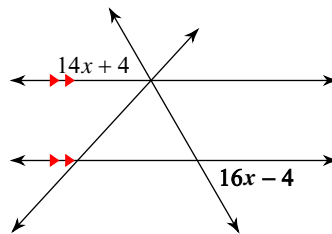
- A) 130° B) 120°
 C) 117° D) 100°

19)



- A) 120° B) 105°
 C) 75° D) 90°

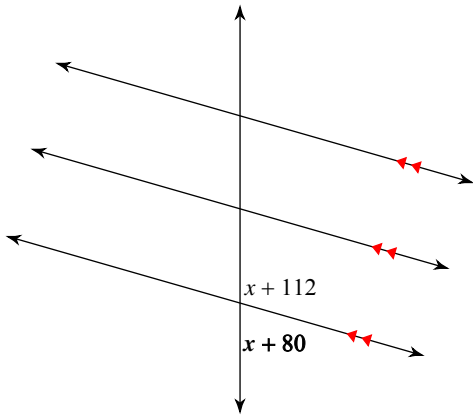
20)



- A) 55° B) 60°
 C) 140° D) 75°

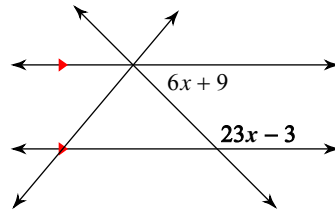


21)



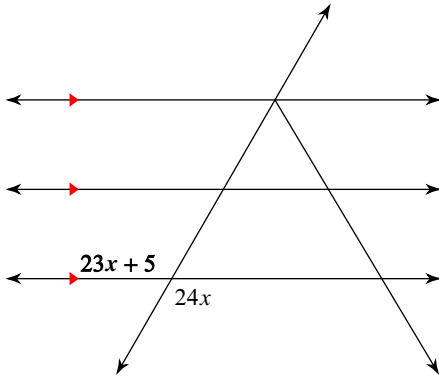
- A) 80° B) 115°
 C) 74° D) 62°

22)



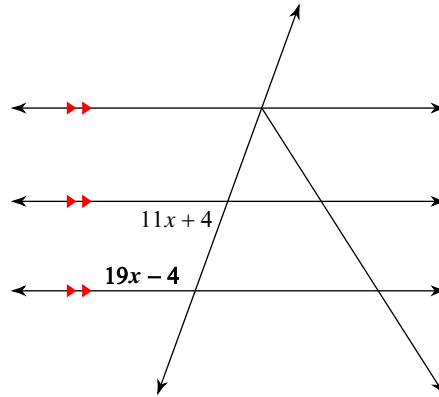
- A) 95° B) 106°
 C) 50° D) 135°

23)



- A) 120° B) 136°
 C) 110° D) 65°

24)



- A) 46° B) 130°
 C) 126° D) 110°



Answers to Assignment (ID: 3)

- 1) A
- 5) B
- 9) C
- 13) C
- 17) B
- 21) C

- 2) B
- 6) A
- 10) B
- 14) B
- 18) D
- 22) D

- 3) A
- 7) A
- 11) C
- 15) C
- 19) D
- 23) A

- 4) C
- 8) D
- 12) B
- 16) D
- 20) B
- 24) D



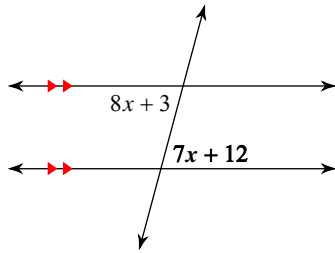
Assignment

Name _____

Date _____ Period _____

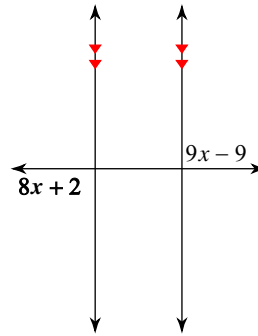
Find the measure of the angle indicated in bold.

1)



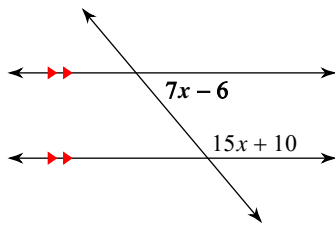
- A) 82°
- B) 135°
- C) 75°
- D) 85°

2)



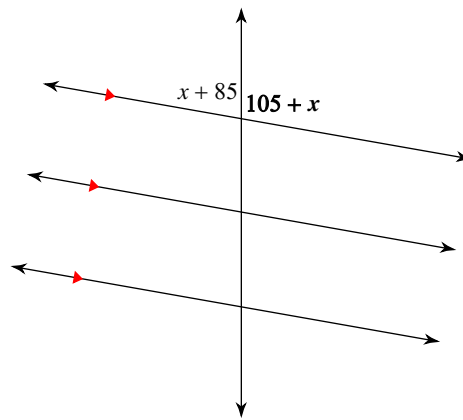
- A) 65°
- B) 100°
- C) 90°
- D) 75°

3)



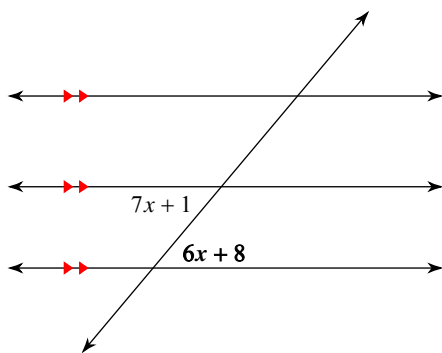
- A) 46°
- B) 50°
- C) 40°
- D) 55°

4)



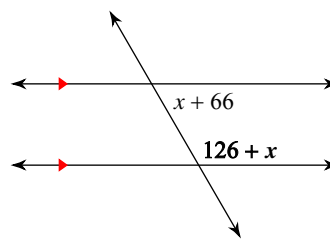
- A) 65°
- B) 125°
- C) 100°
- D) 75°

5)



- A) 50°
- B) 130°
- C) 95°
- D) 55°

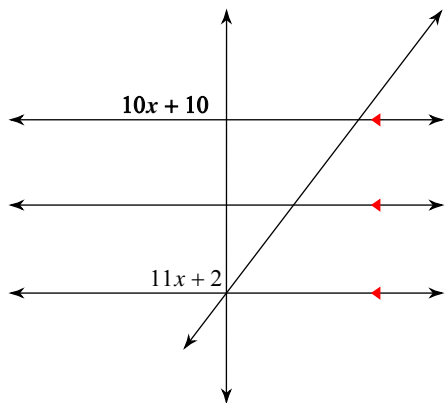
6)



- A) 79°
- B) 45°
- C) 120°
- D) 60°

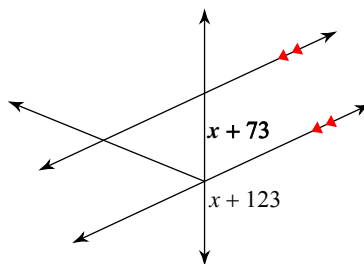


7)



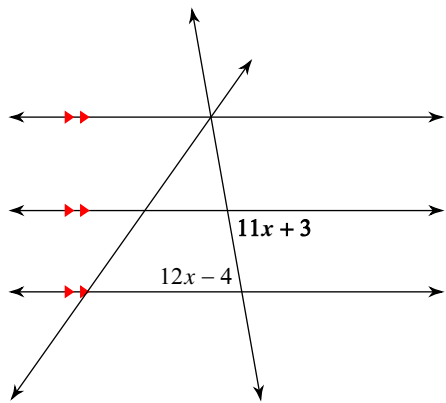
- A) 90° B) 120°
 C) 85° D) 87°

8)



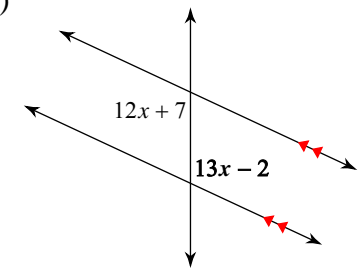
- A) 80° B) 85°
 C) 88° D) 65°

9)



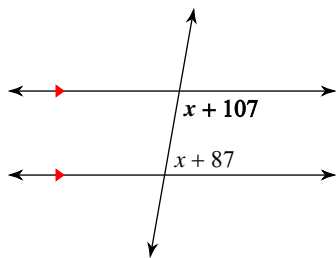
- A) 125° B) 100°
 C) 80° D) 105°

10)



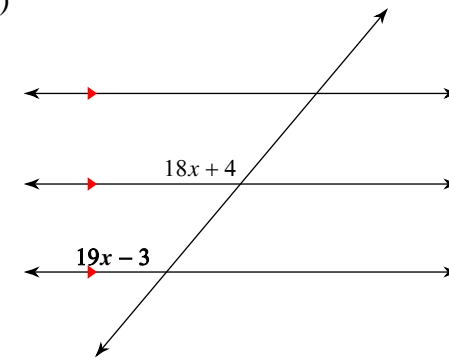
- A) 75° B) 115°
 C) 95° D) 105°

11)



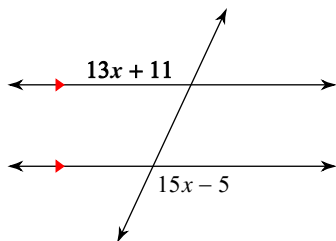
- A) 125° B) 100°
 C) 70° D) 115°

12)



- A) 130° B) 125°
 C) 105° D) 118°

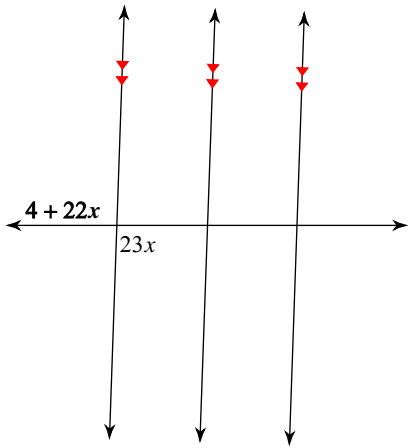
13)



- A) 144° B) 116°
 C) 110° D) 115°

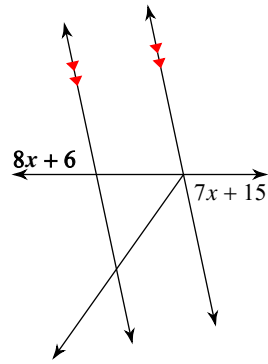


14)



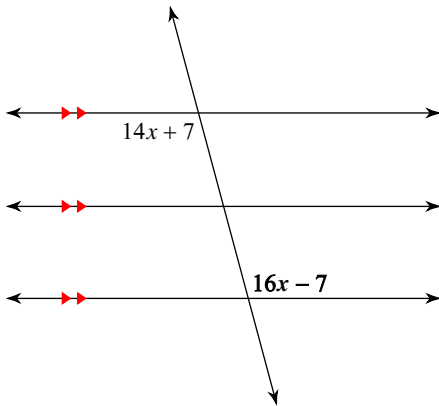
- A) 95°
- B) 92°
- C) 96°
- D) 100°

15)



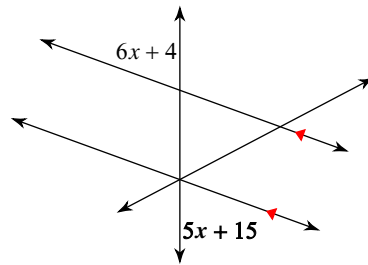
- A) 79°
- B) 78°
- C) 124°
- D) 70°

16)



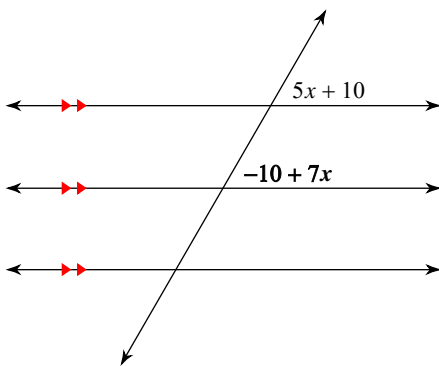
- A) 60°
- B) 105°
- C) 85°
- D) 65°

17)



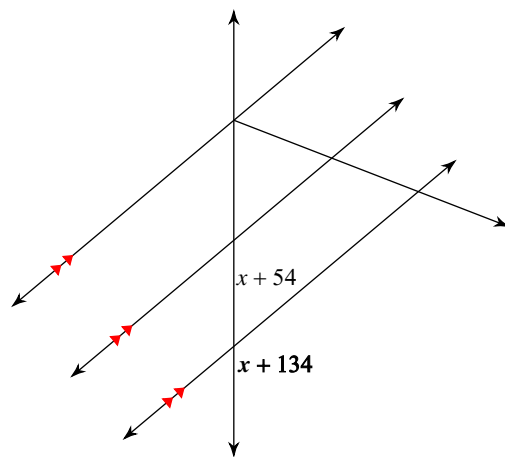
- A) 135°
- B) 70°
- C) 58°
- D) 125°

18)



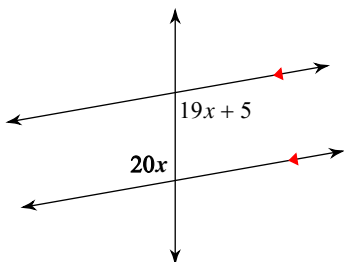
- A) 120°
- B) 50°
- C) 60°
- D) 80°

19)



- A) 40°
- B) 130°
- C) 115°
- D) 52°

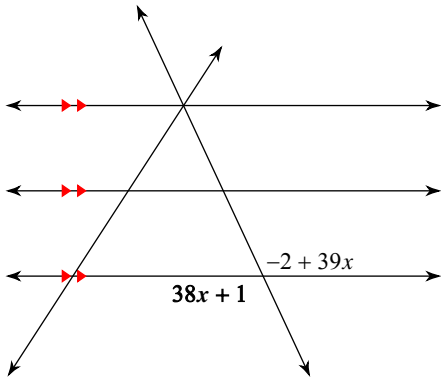
20)



- A) 100°
- B) 125°

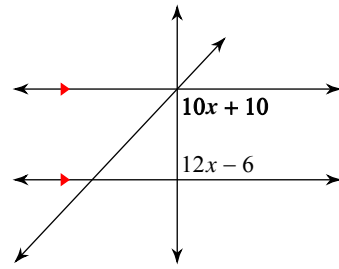


21)



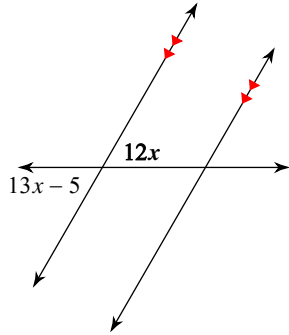
- A) 115°
- B) 85°
- C) 120°
- D) 95°

22)



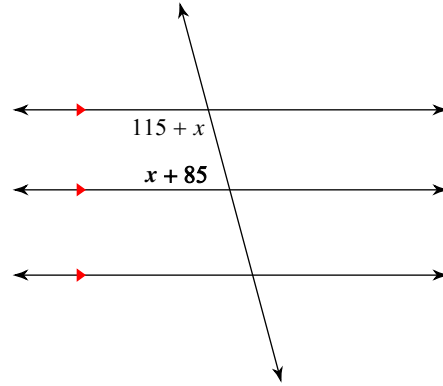
- A) 90°
- B) 75°
- C) 115°
- D) 120°

23)



- A) 94°
- B) 50°
- C) 40°
- D) 60°

24)



- A) 110°
- B) 75°
- C) 60°
- D) 50°



Answers to Assignment (ID: 4)

- 1) C
- 5) A
- 9) C
- 13) D
- 17) B
- 21) A

- 2) C
- 6) C
- 10) B
- 14) B
- 18) C
- 22) A

- 3) B
- 7) A
- 11) B
- 15) B
- 19) B
- 23) D

- 4) C
- 8) D
- 12) A
- 16) B
- 20) A
- 24) B



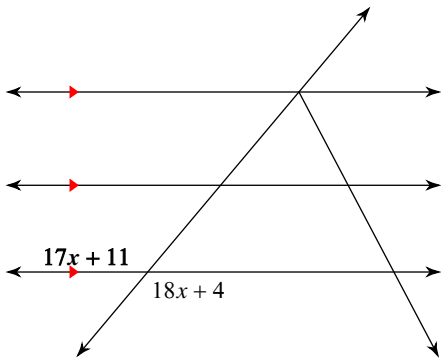
Assignment

Name _____

Date _____ Period ____

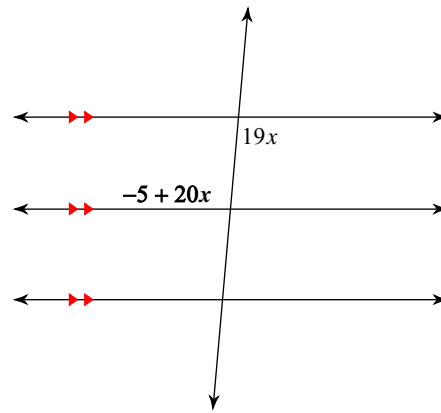
Find the measure of the angle indicated in bold.

1)



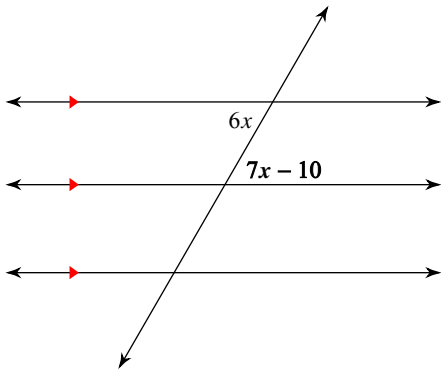
- A) 45° B) 115°
- C) 130° D) 140°

2)



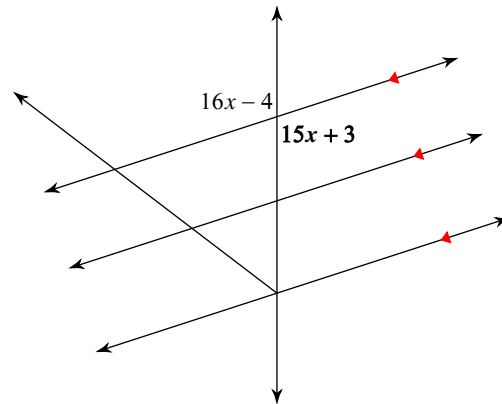
- A) 110° B) 65°
- C) 102° D) 95°

3)



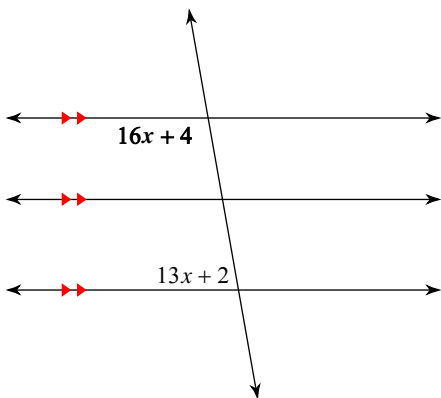
- A) 60° B) 66°
- C) 100° D) 45°

4)



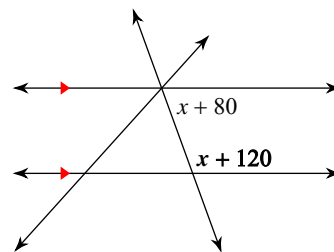
- A) 60° B) 108°
- C) 137° D) 133°

5)



- A) 95° B) 125°
- C) 100° D) 120°

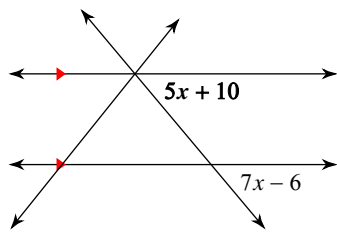
6)



- A) 110° B) 102°
- C) 105° D) 95°

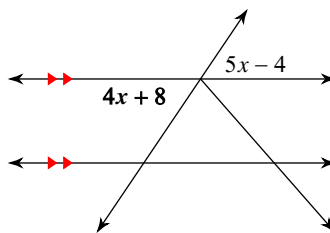


7)



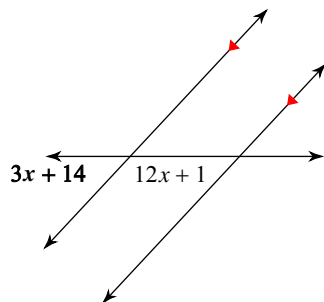
- A) 114° B) 50°
 C) 55° D) 35°

8)



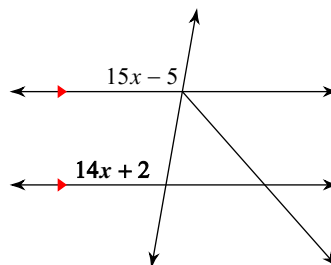
- A) 53° B) 41°
 C) 56° D) 122°

9)



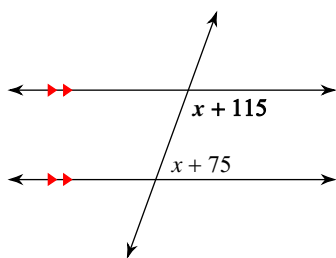
- A) 58° B) 57°
 C) 55° D) 47°

10)



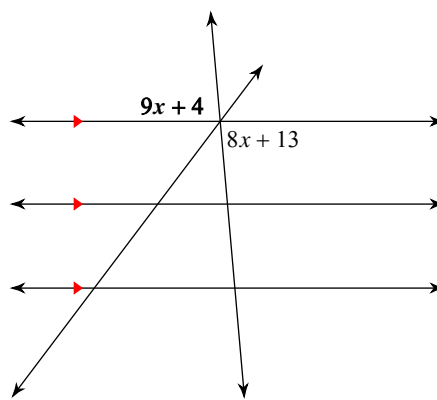
- A) 50° B) 79°
 C) 89° D) 100°

11)



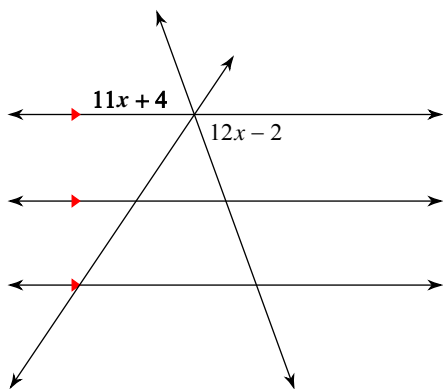
- A) 110° B) 60°
 C) 115° D) 105°

12)



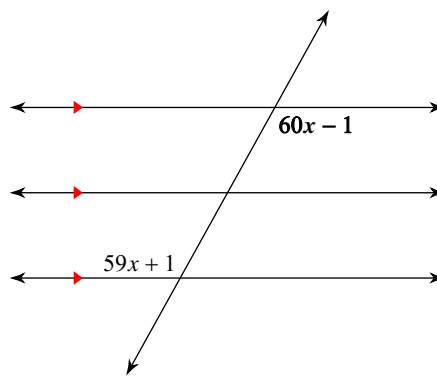
- A) 80° B) 75°
 C) 85° D) 94°

13)



- A) 100° B) 120°
 C) 70° D) 45°

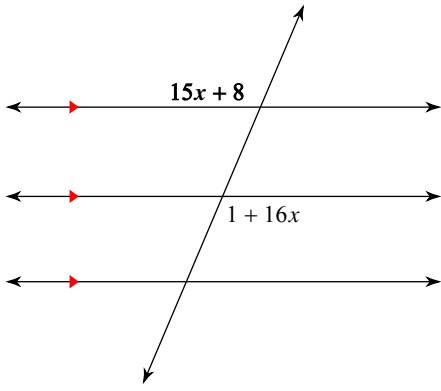
14)



- A) 134° B) 139°
 C) 119° D) 95°

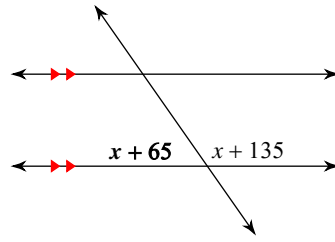


15)



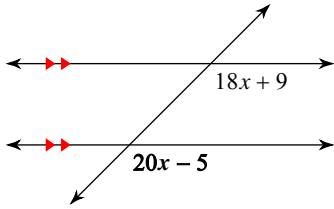
- A) 119°
- B) 104°
- C) 113°
- D) 56°

16)



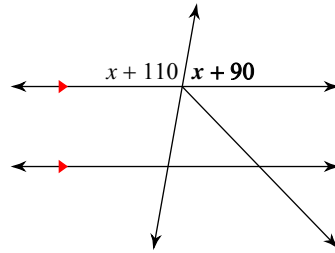
- A) 144°
- B) 50°
- C) 35°
- D) 55°

17)



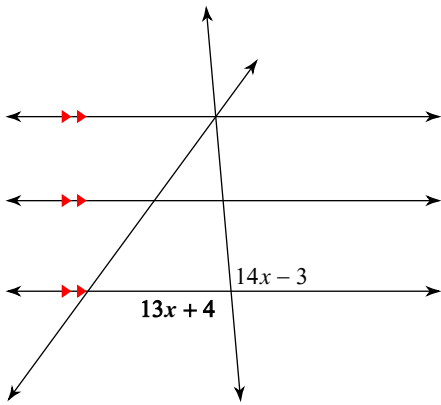
- A) 120°
- B) 42°
- C) 135°
- D) 95°

18)



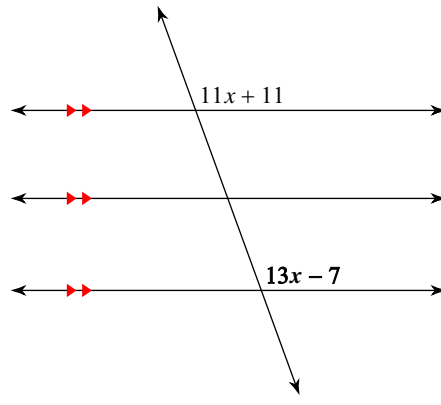
- A) 55°
- B) 80°
- C) 84°
- D) 135°

19)



- A) 65°
- B) 104°
- C) 105°
- D) 95°

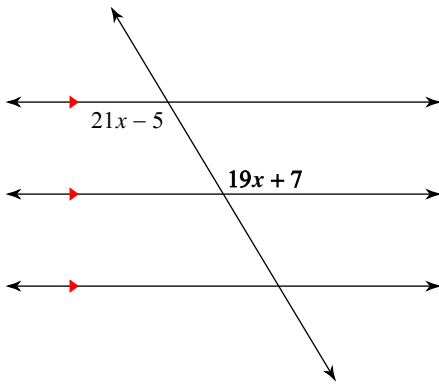
20)



- A) 115°
- B) 120°
- C) 110°
- D) 95°

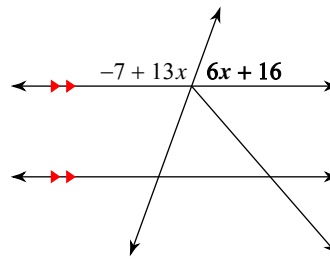


21)



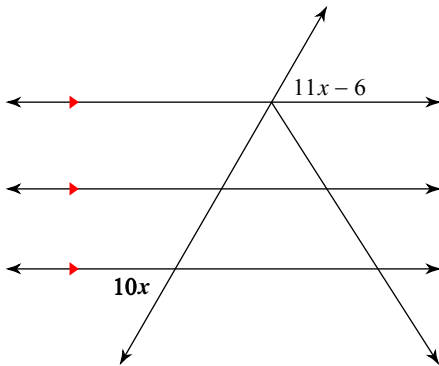
- A) 137° B) 140°
 C) 50° D) 121°

22)



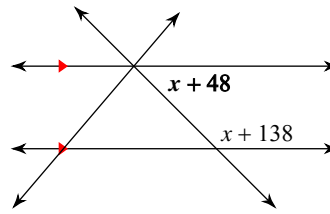
- A) 55° B) 70°
 C) 130° D) 50°

23)



- A) 70° B) 60°
 C) 55° D) 105°

24)



- A) 122° B) 144°
 C) 45° D) 60°



Answers to Assignment (ID: 5)

- 1) C
- 5) C
- 9) D
- 13) C
- 17) C
- 21) D

- 2) D
- 6) A
- 10) D
- 14) C
- 18) B
- 22) B

- 3) A
- 7) B
- 11) A
- 15) C
- 19) D
- 23) B

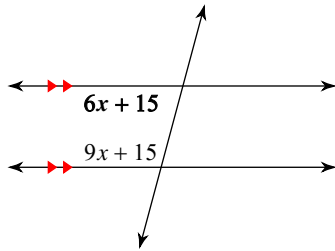
- 4) B
- 8) C
- 12) C
- 16) D
- 20) C
- 24) C



Assignment

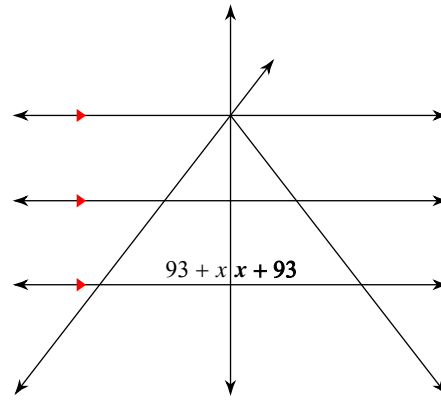
Find the measure of the angle indicated in bold.

1)



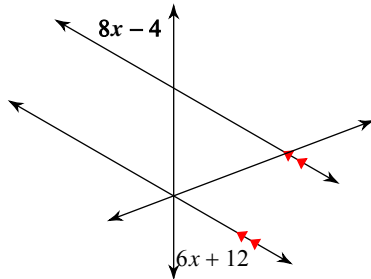
- A) 118°
- B) 50°
- C) 85°
- D) 75°

2)



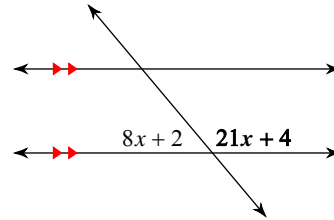
- A) 103°
- B) 90°
- C) 108°
- D) 120°

3)



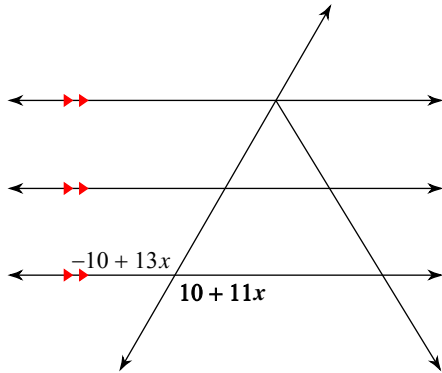
- A) 40°
- B) 80°
- C) 60°
- D) 70°

4)



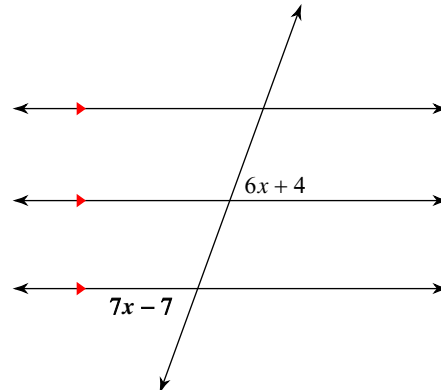
- A) 125°
- B) 100°
- C) 130°
- D) 110°

5)



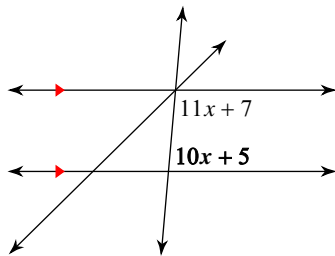
- A) 115°
- B) 75°
- C) 116°
- D) 120°

6)



- A) 70°
- B) 100°
- C) 97°
- D) 45°

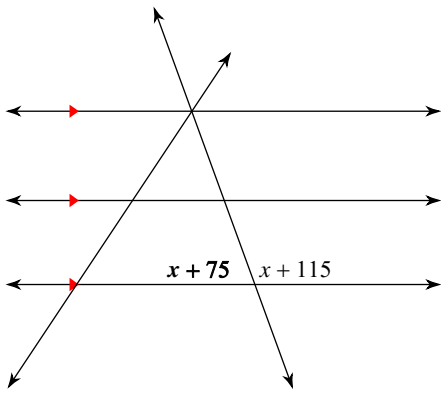
7)



- A) 07°
- B) 60°

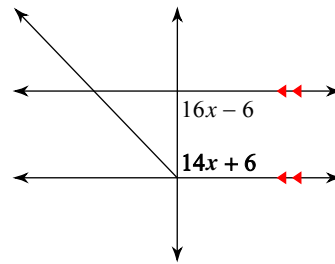


8)



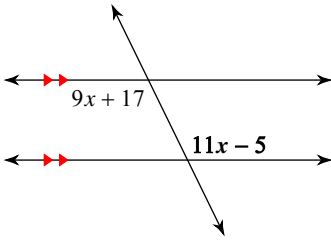
- A) 60° B) 47°
 C) 70° D) 95°

9)



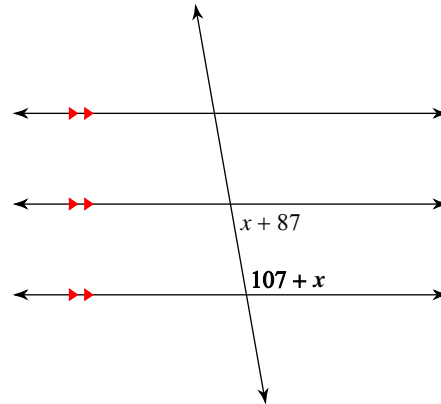
- A) 90° B) 80°
 C) 70° D) 60°

10)



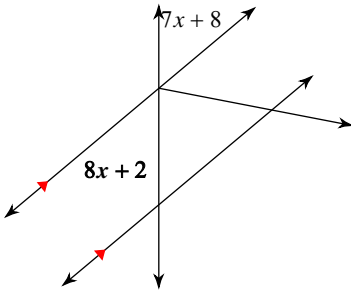
- A) 140° B) 116°
 C) 130° D) 53°

11)



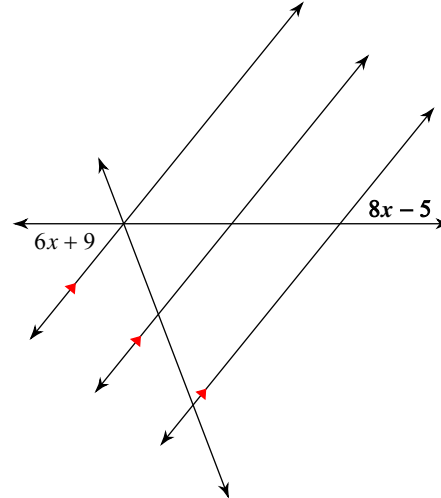
- A) 100° B) 99°
 C) 101° D) 52°

12)



- A) 40° B) 140°
 C) 45° D) 50°

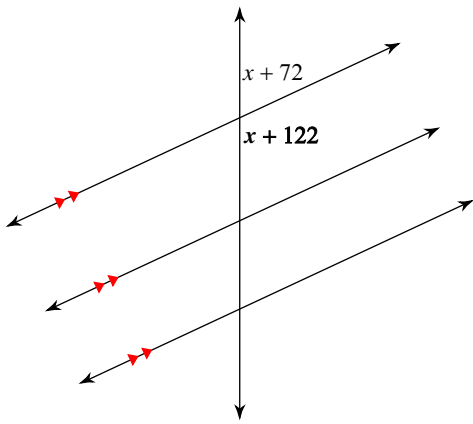
13)



- A) 51° B) 42°
 C) 60° D) 57°

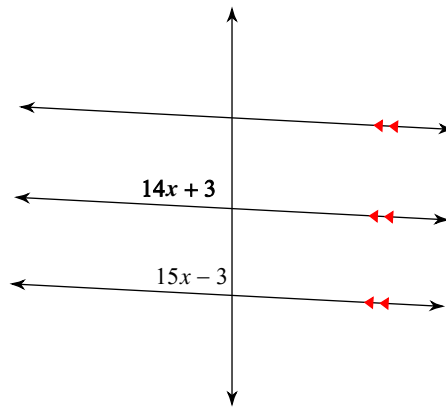


14)



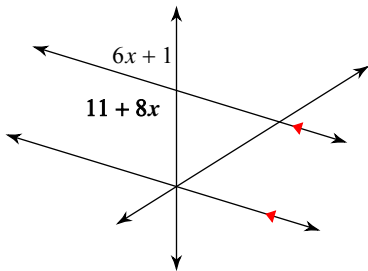
- A) 101° B) 115°
 C) 100° D) 105°

15)



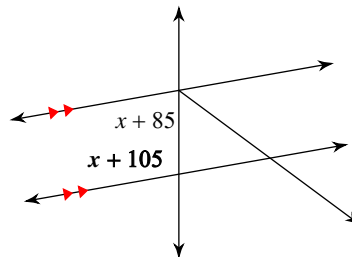
- A) 70° B) 96°
 C) 87° D) 83°

16)



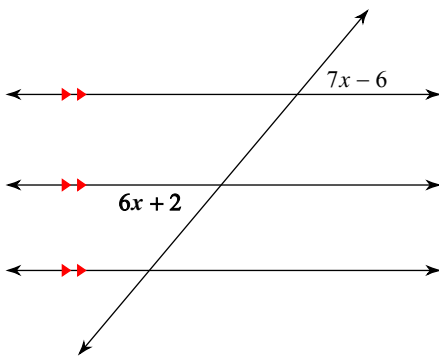
- A) 47° B) 68°
 C) 126° D) 107°

17)



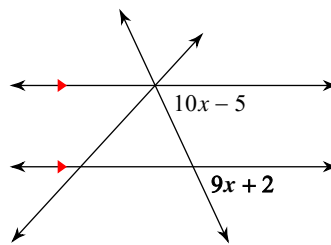
- A) 100° B) 120°
 C) 114° D) 115°

18)



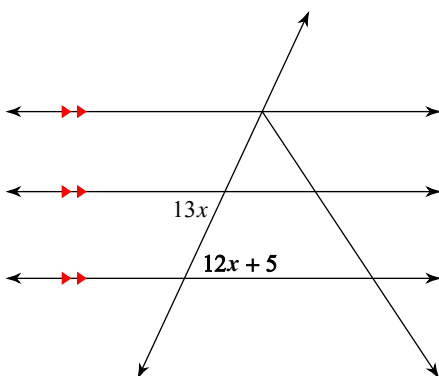
- A) 65° B) 50°
 C) 60° D) 40°

19)



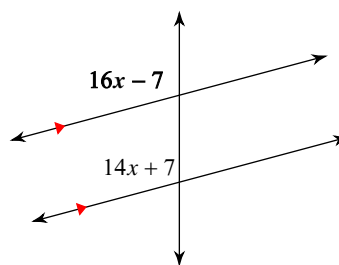
- A) 65° B) 45°
 C) 120° D) 50°

20)



- A) 65° B) 75°
 C) 85° D) 50°

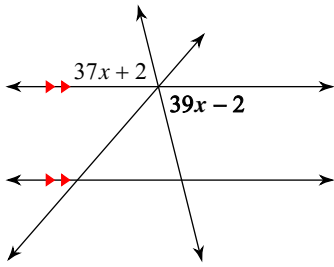
21)



- A) 72° B) 105°
 C) 135° D) 76°

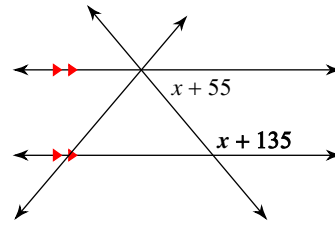


22)



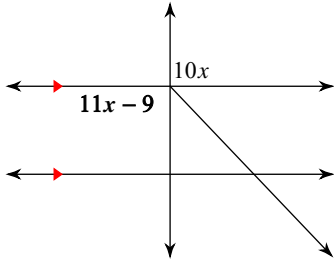
- A) 76°
- B) 82°
- C) 87°
- D) 56°

23)



- A) 65°
- B) 110°
- C) 130°
- D) 56°

24)



- A) 99°
- B) 90°
- C) 73°
- D) 85°



Answers to Assignment (ID: 6)

1) D
5) D
9) A
13) A
17) A
21) B

2) B
6) A
10) B
14) B
18) B
22) A

3) C
7) D
11) A
15) C
19) A
23) C

4) C
8) C
12) D
16) D
20) A
24) B

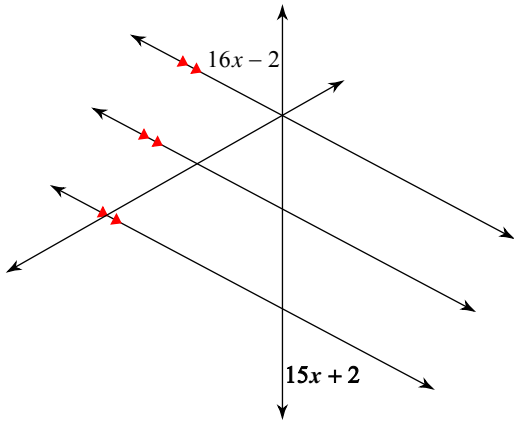


Assignment

Date _____ Period _____

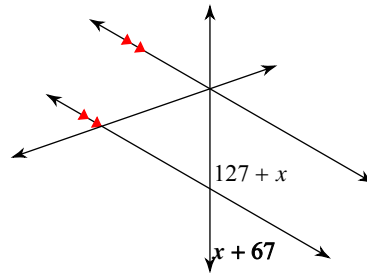
Find the measure of the angle indicated in bold.

1)



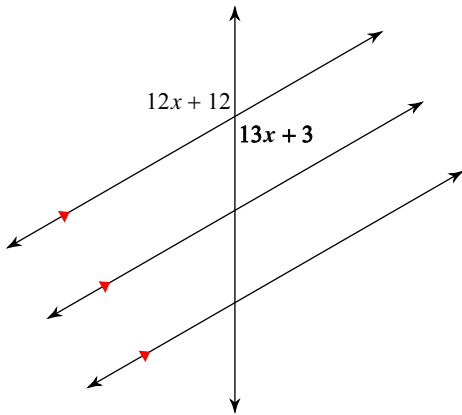
- A) 62°
- B) 117°
- C) 69°
- D) 76°

2)



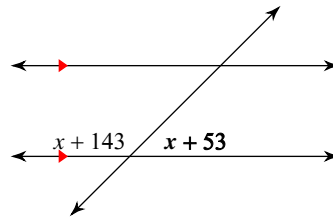
- A) 60°
- B) 135°
- C) 120°
- D) 125°

3)



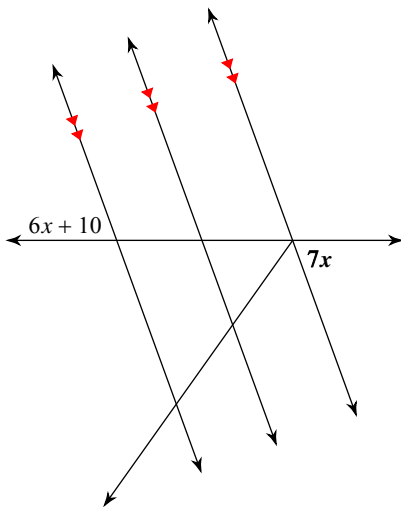
- A) 55°
- B) 120°
- C) 76°
- D) 48°

4)



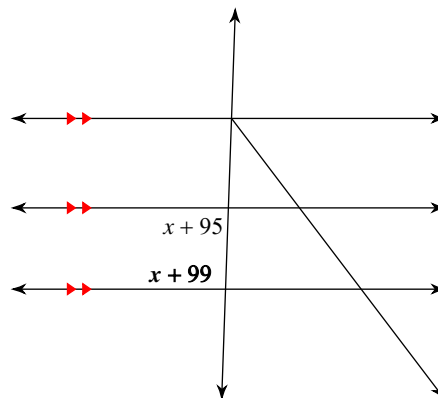
- A) 122°
- B) 60°
- C) 45°
- D) 50°

5)



- A) 47°
- B) 70°
- C) 80°
- D) 85°

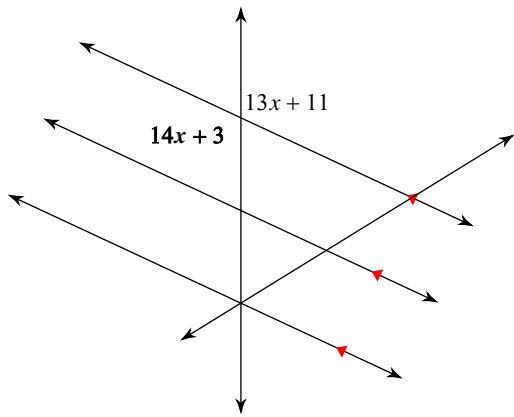
6)



- A) 92°
- B) 70°
- C) 84°
- D) 112°

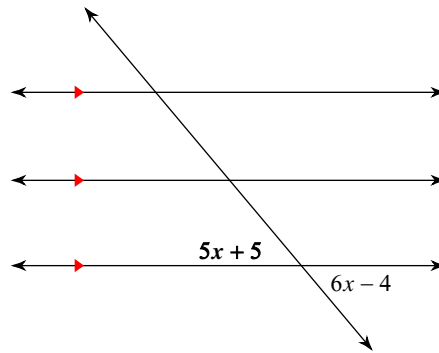


7)



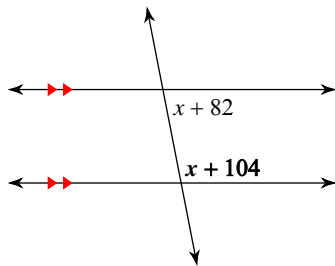
- A) 94° B) 55°
 C) 115° D) 130°

8)



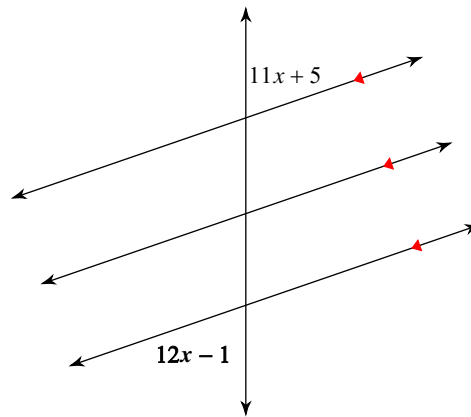
- A) 60° B) 55°
 C) 50° D) 95°

9)



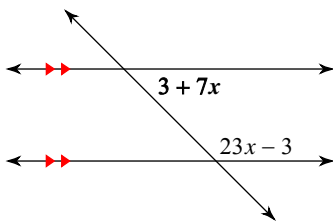
- A) 135° B) 70°
 C) 101° D) 53°

10)



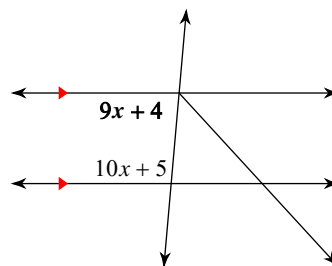
- A) 55° B) 71°
 C) 70° D) 100°

11)



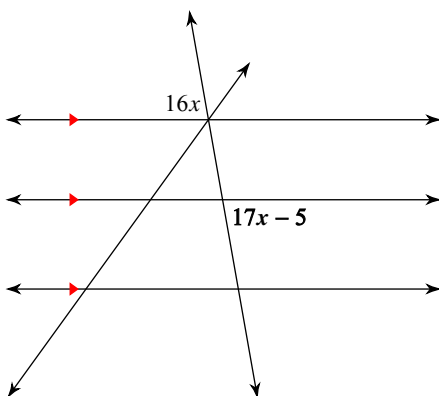
- A) 104° B) 95°
 C) 45° D) 60°

12)



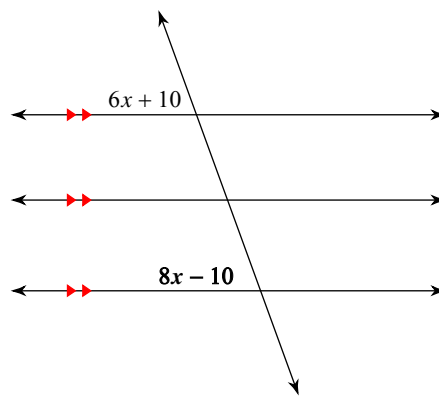
- A) 81° B) 85°
 C) 84° D) 55°

13)



- A) 80° B) 60°

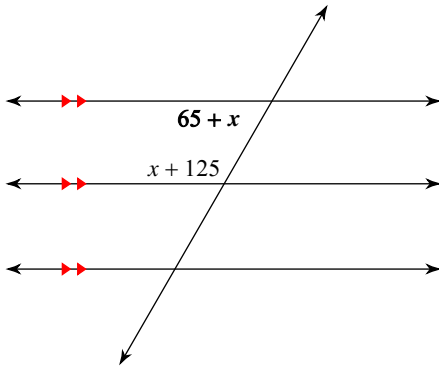
14)



- A) 75° B) 50°
 C) 70° D) 65°

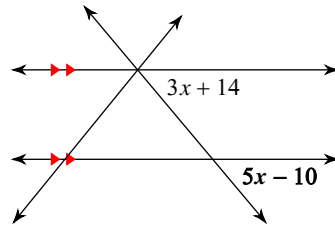


15)



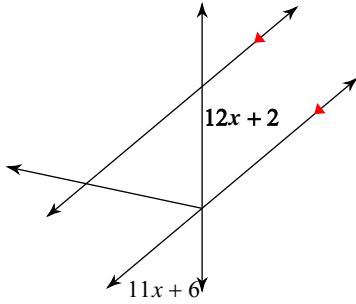
- A) 60° B) 40°
 C) 55° D) 50°

16)



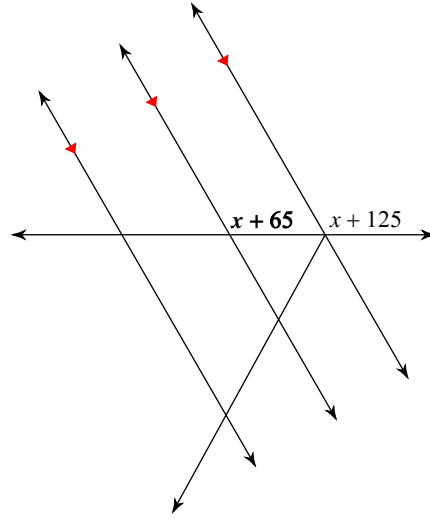
- A) 125° B) 50°
 C) 40° D) 115°

17)



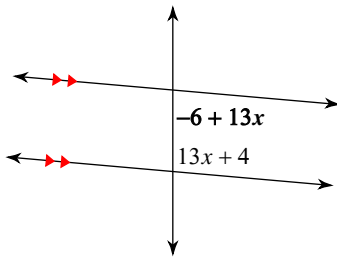
- A) 40° B) 50°
 C) 115° D) 139°

18)



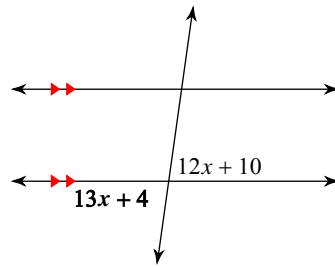
- A) 60° B) 42°
 C) 100° D) 140°

19)



- A) 85° B) 110°
 C) 60° D) 75°

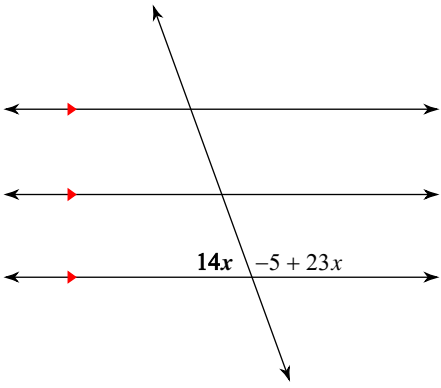
20)



- A) 120° B) 82°
 C) 112° D) 53°

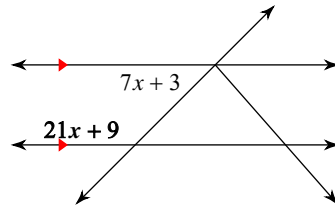


21)



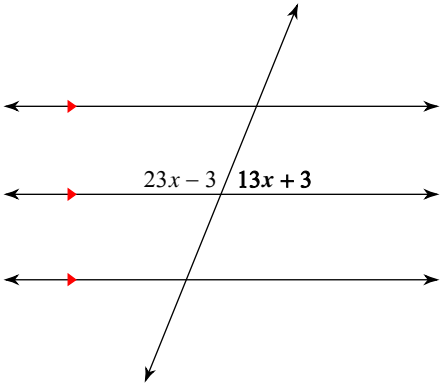
- A) 70°
- B) 51°
- C) 55°
- D) 110°

22)



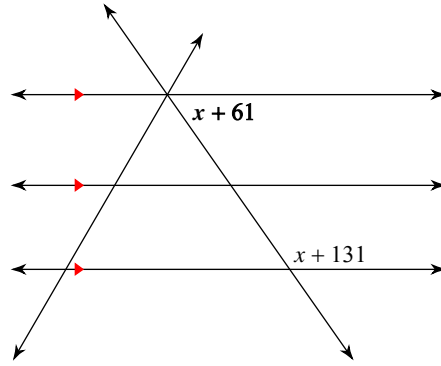
- A) 51°
- B) 40°
- C) 135°
- D) 50°

23)



- A) 77°
- B) 68°
- C) 65°
- D) 45°

24)



- A) 73°
- B) 75°
- C) 55°
- D) 135°



Answers to Assignment (ID: 7)

1) A
5) B
9) C
13) A
17) B
21) A

2) A
6) A
10) B
14) C
18) A
22) C

3) B
7) C
11) C
15) A
19) A
23) B

4) C
8) C
12) B
16) B
20) B
24) C



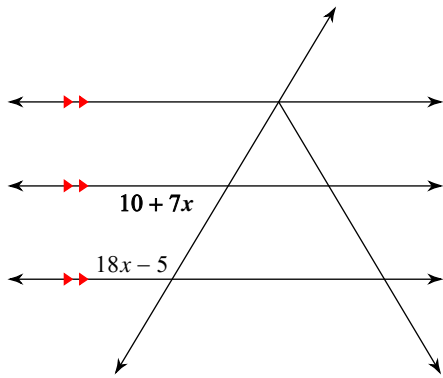
Assignment

Name _____

Date _____ Period ____

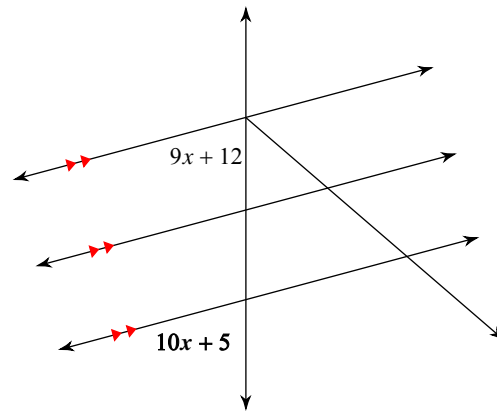
Find the measure of the angle indicated in bold.

1)



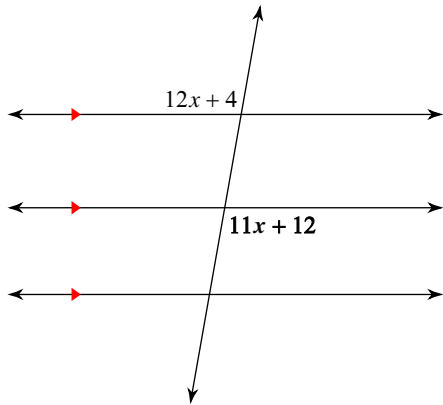
- A) 59° B) 47°
- C) 45° D) 40°

2)



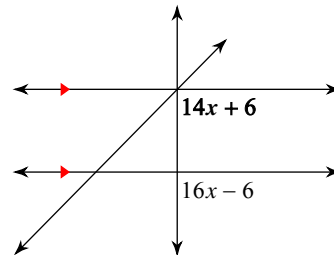
- A) 70° B) 125°
- C) 65° D) 75°

3)



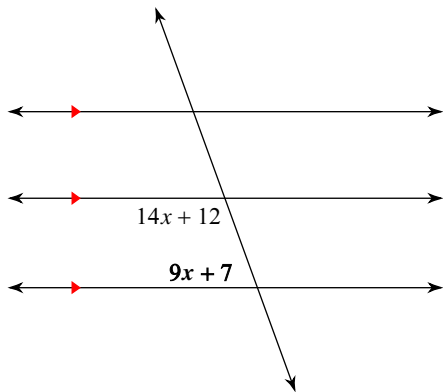
- A) 110° B) 135°
- C) 100° D) 115°

4)



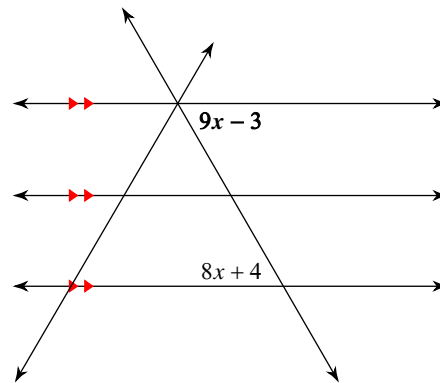
- A) 64° B) 85°
- C) 110° D) 90°

5)



- A) 49° B) 70°
- C) 102° D) 85°

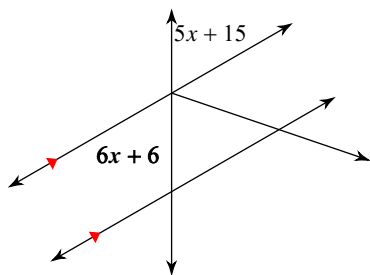
6)



- A) 100° B) 60°
- C) 50° D) 55°

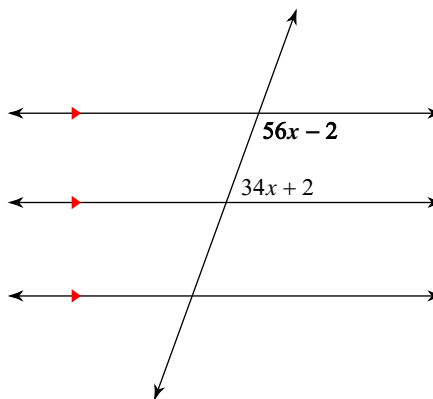


7)



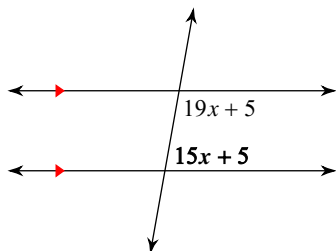
- A) 65° B) 62°
 C) 60° D) 80°

8)



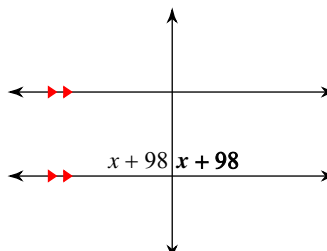
- A) 105° B) 60°
 C) 110° D) 120°

9)



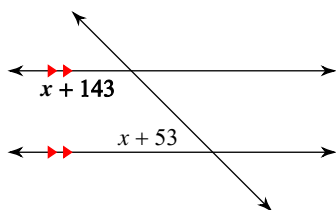
- A) 94° B) 70°
 C) 80° D) 75°

10)



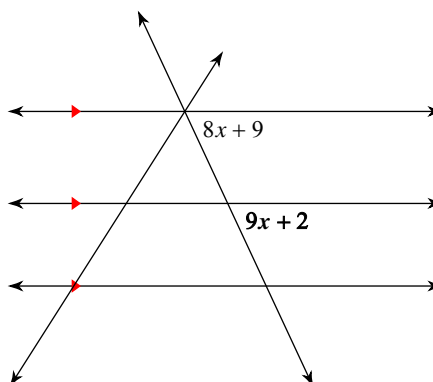
- A) 60° B) 95°
 C) 120° D) 90°

11)



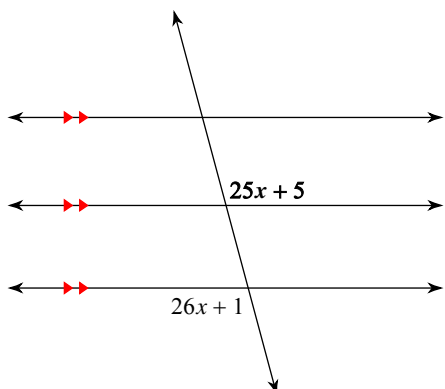
- A) 40° B) 95°
 C) 55° D) 135°

12)



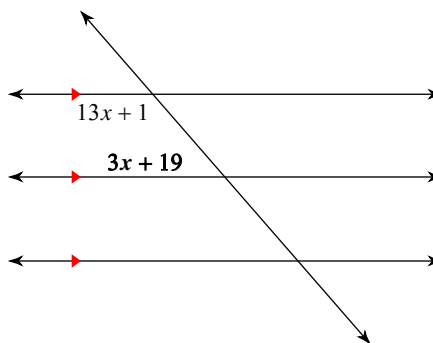
- A) 55° B) 130°
 C) 65° D) 85°

13)



- A) 138° B) 134°

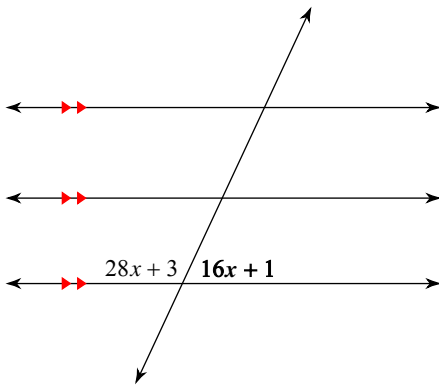
14)



- A) 141° B) 44°
 C) 49° D) 40°

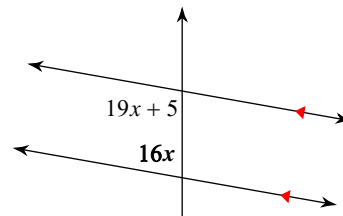


15)



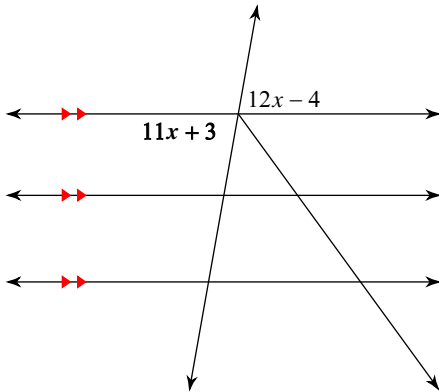
- A) 60° B) 65°
 C) 80° D) 74°

16)



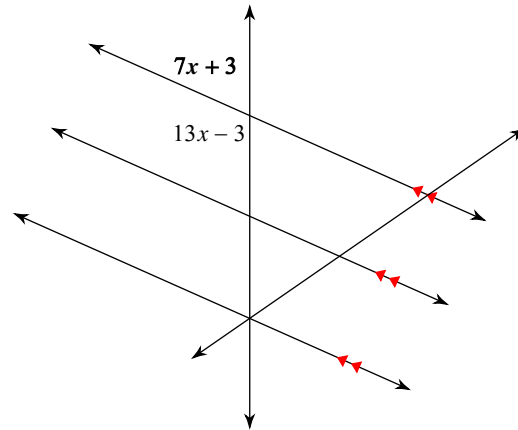
- A) 80° B) 83°
 C) 85° D) 75°

17)



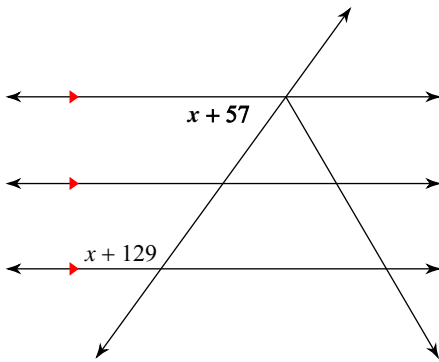
- A) 55° B) 125°
 C) 80° D) 81°

18)



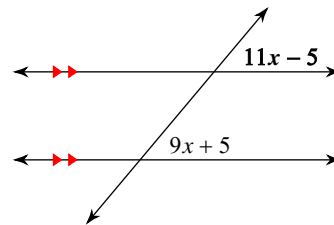
- A) 43° B) 66°
 C) 58° D) 76°

19)



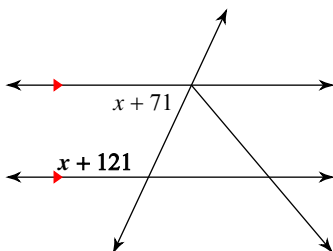
- A) 96° B) 60°
 C) 59° D) 54°

20)



- A) 65° B) 50°
 C) 40° D) 45°

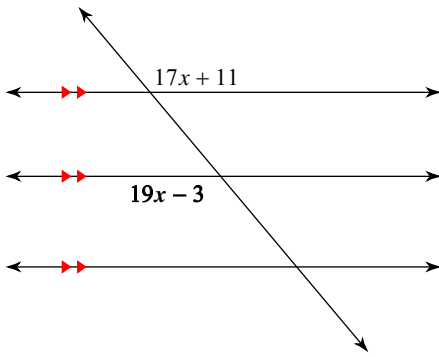
21)



- A) 70° B) 95°
 C) 115° D) 100°

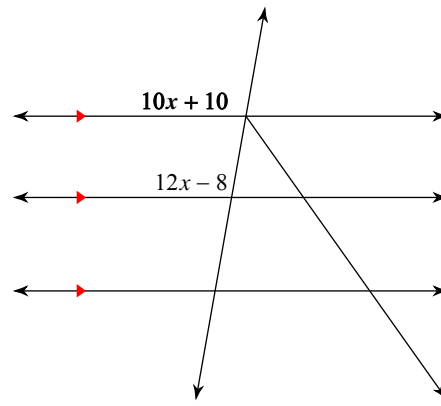


22)



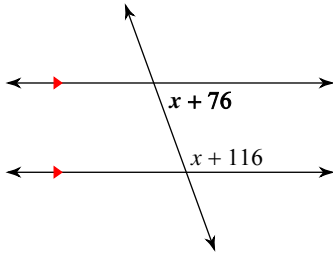
- A) 130° B) 140°
 C) 135° D) 115°

23)



- A) 115° B) 95°
 C) 60° D) 100°

24)



- A) 140° B) 130°
 C) 60° D) 70°



Answers to Assignment (ID: 8)

- 1) A
- 5) B
- 9) C
- 13) C
- 17) C
- 21) C

- 2) D
- 6) B
- 10) D
- 14) C
- 18) B
- 22) A

- 3) C
- 7) C
- 11) D
- 15) B
- 19) D
- 23) D

- 4) D
- 8) C
- 12) C
- 16) A
- 20) B
- 24) D



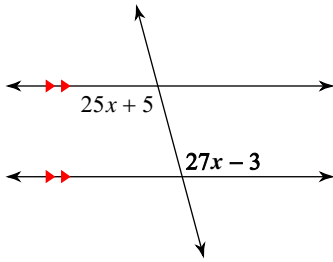
Assignment

Name _____

Date _____ Period _____

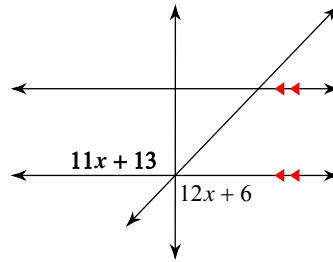
Find the measure of the angle indicated in bold.

1)



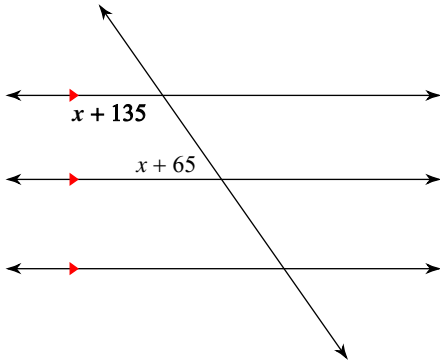
- A) 87° B) 120°
- C) 105° D) 115°

2)



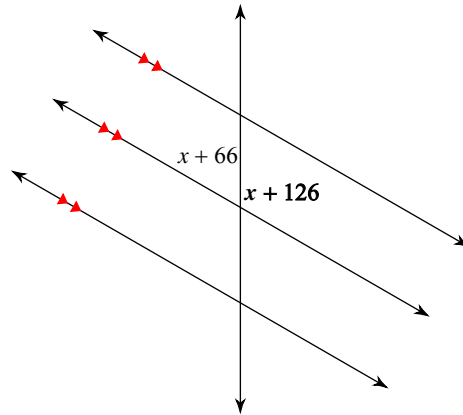
- A) 100° B) 80°
- C) 90° D) 95°

3)



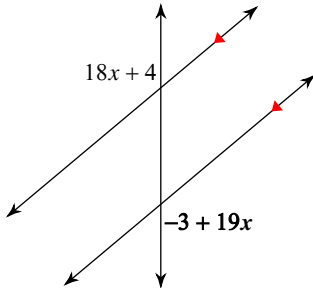
- A) 94° B) 45°
- C) 40° D) 125°

4)



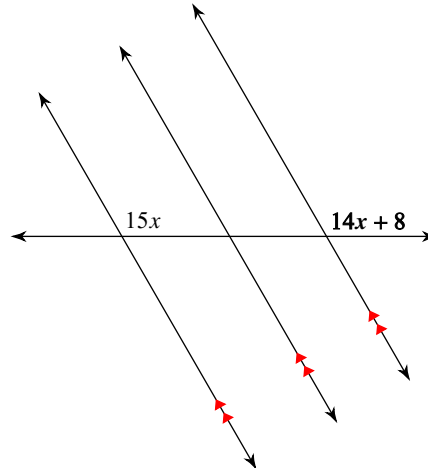
- A) 120° B) 140°
- C) 126° D) 104°

5)



- A) 117° B) 145°
- C) 130° D) 139°

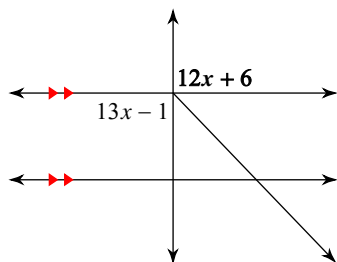
6)



- A) 120° B) 94°
- C) 129° D) 131°

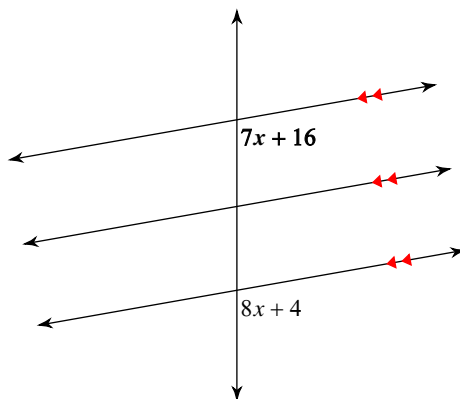


7)



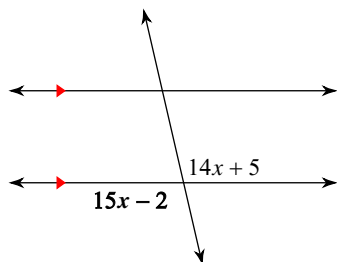
- A) 105° B) 100°
 C) 61° D) 90°

8)



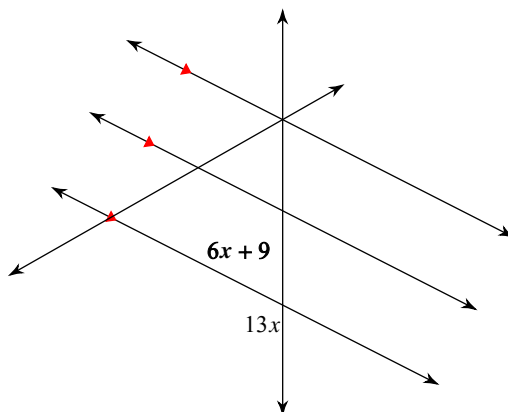
- A) 100° B) 105°
 C) 95° D) 115°

9)



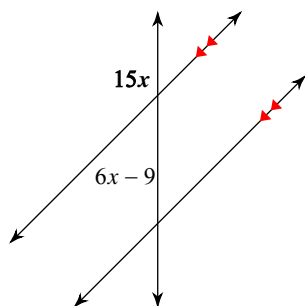
- A) 103° B) 96°
 C) 114° D) 100°

10)



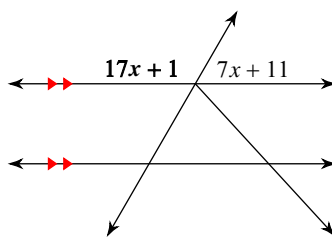
- A) 101° B) 102°
 C) 60° D) 63°

11)



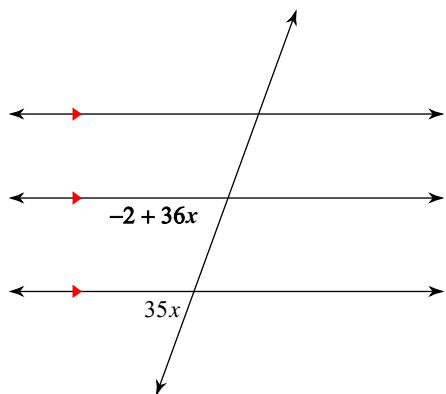
- A) 135° B) 50°
 C) 110° D) 105°

12)



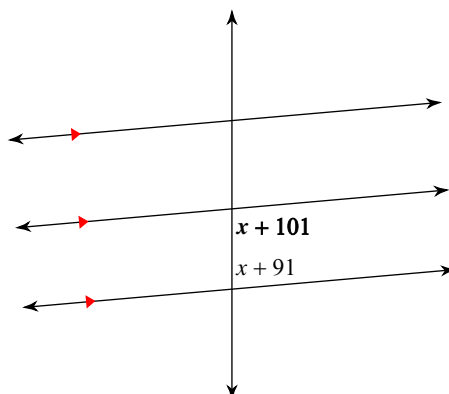
- A) 120° B) 140°
 C) 110° D) 127°

13)



- A) 135° B) 50°

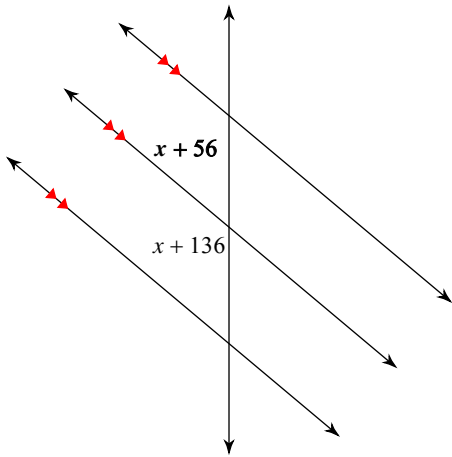
14)



- A) 120° B) 115°
 C) 95° D) 110°

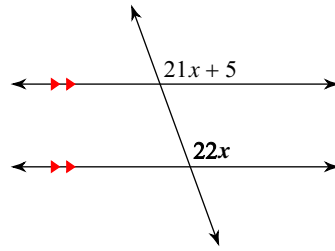


15)



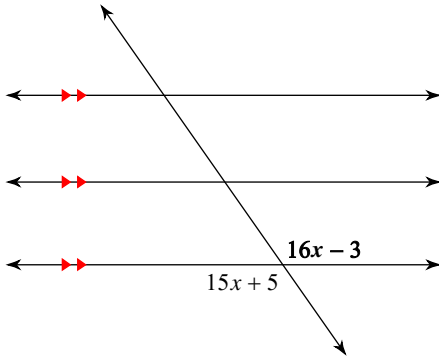
- A) 40°
- B) 65°
- C) 50°
- D) 60°

16)



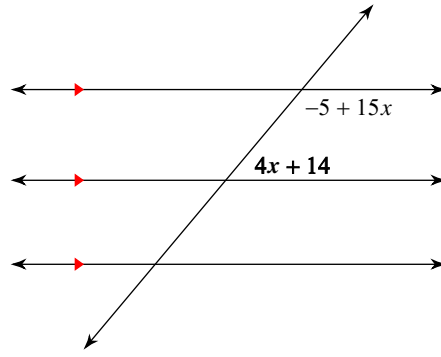
- A) 45°
- B) 65°
- C) 70°
- D) 110°

17)



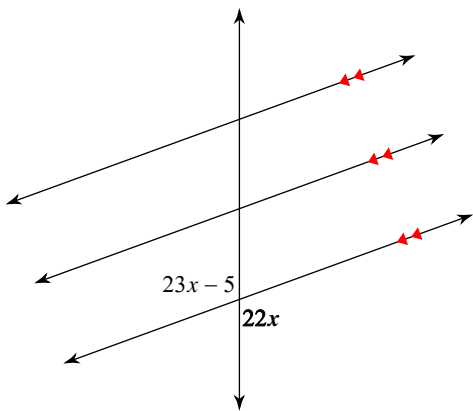
- A) 40°
- B) 140°
- C) 115°
- D) 125°

18)



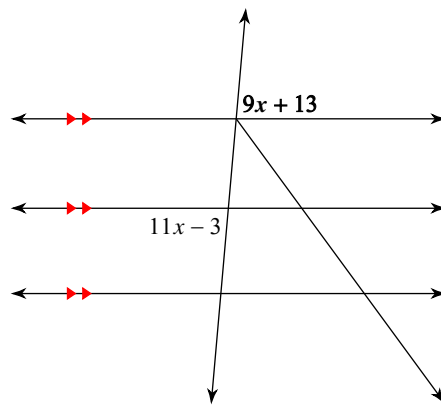
- A) 117°
- B) 70°
- C) 60°
- D) 50°

19)



- A) 91°
- B) 100°
- C) 105°
- D) 110°

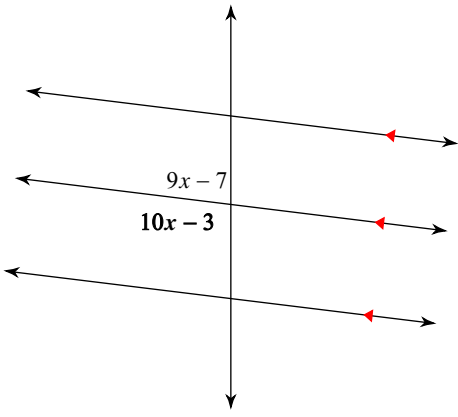
20)



- A) 70°
- B) 60°
- C) 62°
- D) 85°

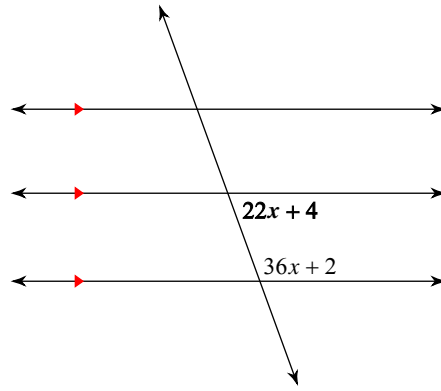


21)



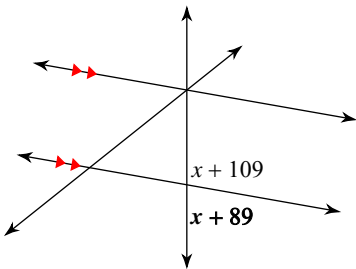
- A) 75° B) 115°
 C) 131° D) 97°

22)



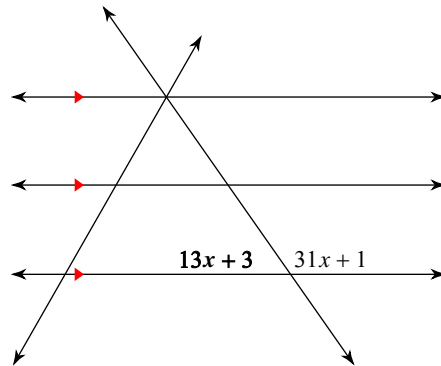
- A) 70° B) 45°
 C) 105° D) 75°

23)



- A) 62° B) 115°
 C) 65° D) 80°

24)



- A) 40° B) 55°
 C) 60° D) 50°



Answers to Assignment (ID: 9)

1) C
5) C
9) A
13) D
17) D
21) D

2) C
6) A
10) D
14) C
18) D
22) A

3) D
7) D
11) A
15) C
19) D
23) D

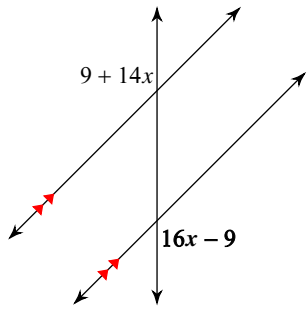
4) A
8) A
12) A
16) D
20) D
24) B



Assignment

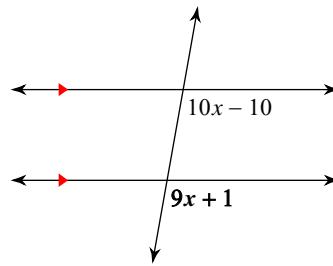
Find the measure of the angle indicated in bold.

1)



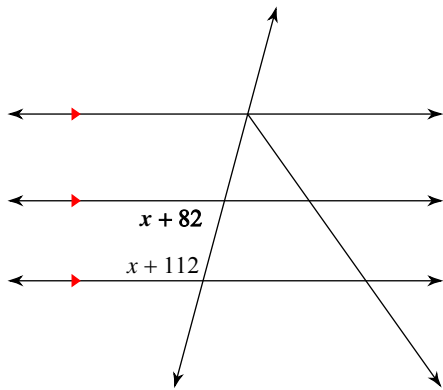
- A) 40° B) 101°
- C) 135° D) 100°

2)



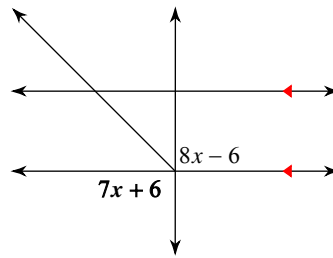
- A) 100° B) 129°
- C) 120° D) 110°

3)



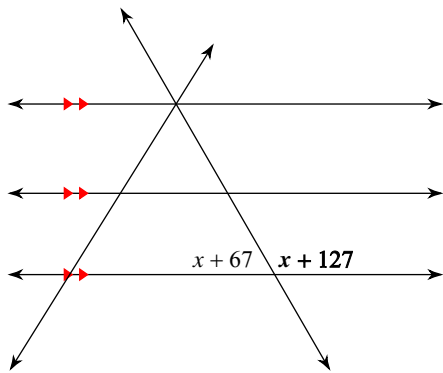
- A) 75° B) 70°
- C) 60° D) 130°

4)



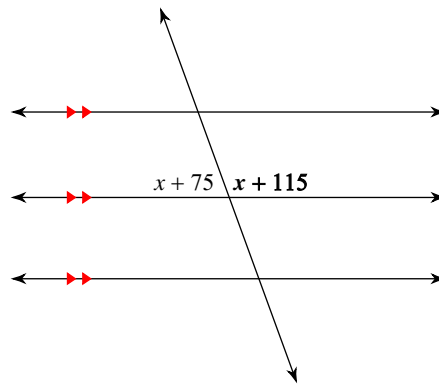
- A) 90° B) 105°
- C) 70° D) 100°

5)



- A) 131° B) 120°
- C) 130° D) 125°

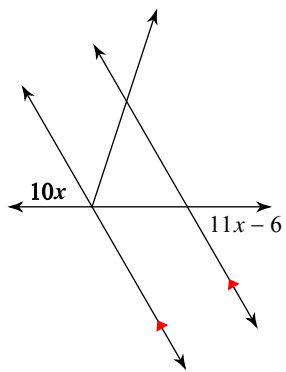
6)



- A) 95° B) 75°
- C) 60° D) 110°

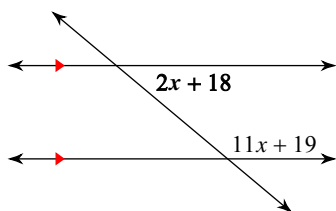


7)



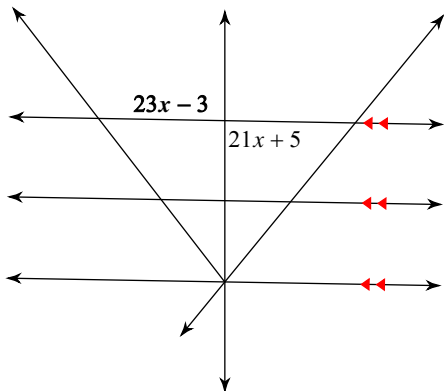
- A) 70° B) 65°
 C) 60° D) 45°

9)



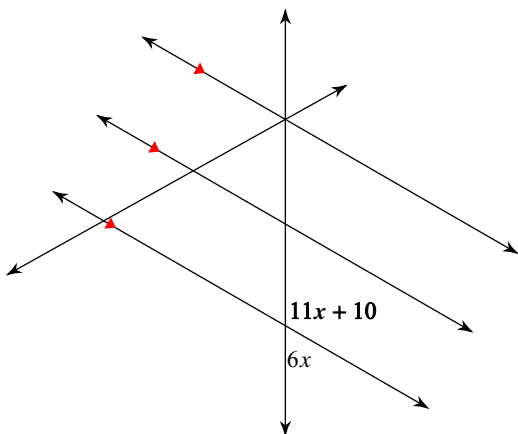
- A) 45° B) 50°
 C) 40° D) 35°

11)

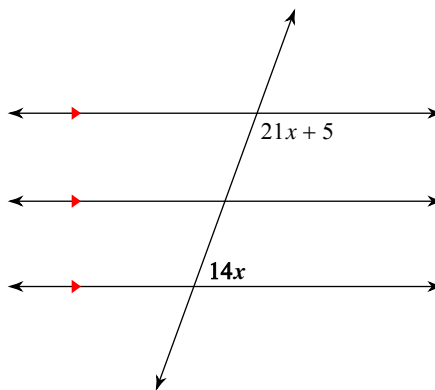


- A) 80° B) 61°
 C) 110° D) 89°

13)

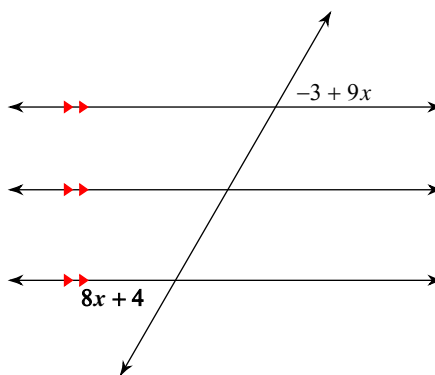


8)



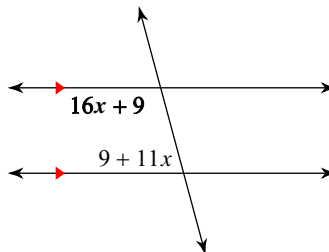
- A) 50° B) 110°
 C) 55° D) 70°

10)



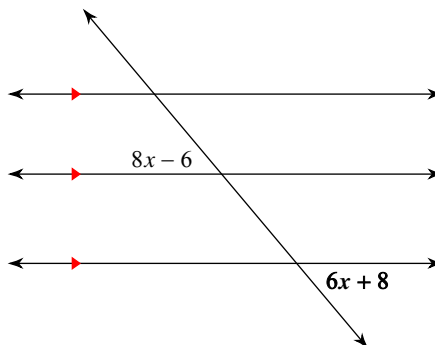
- A) 99° B) 60°
 C) 75° D) 120°

12)



- A) 50° B) 105°
 C) 49° D) 70°

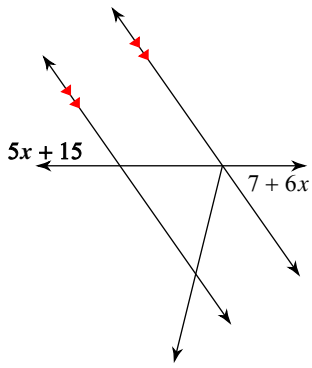
14)



- A) 50° B) 120°
 C) 45° D) 65°

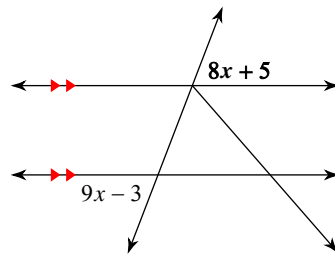


15)



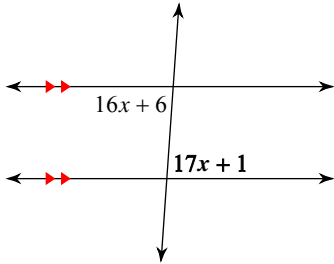
- A) 55° B) 51°
 C) 50° D) 133°

16)



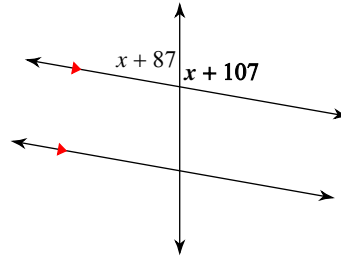
- A) 69° B) 85°
 C) 120° D) 76°

17)



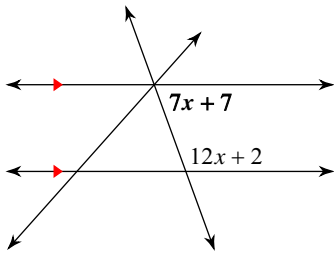
- A) 80° B) 56°
 C) 86° D) 100°

18)



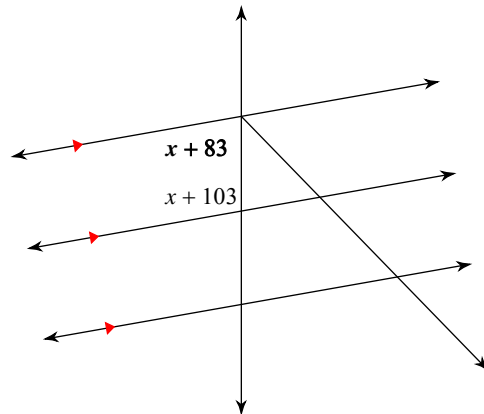
- A) 110° B) 130°
 C) 100° D) 109°

19)



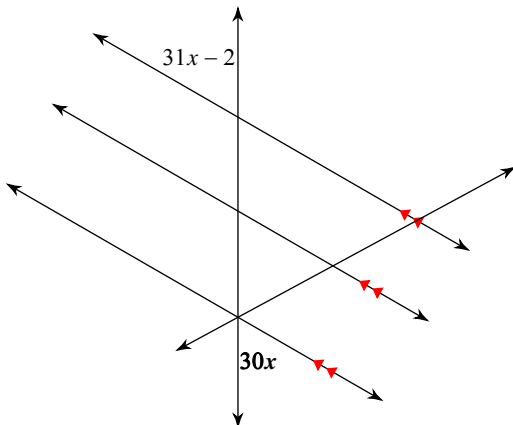
- A) 125° B) 80°
 C) 75° D) 70°

20)



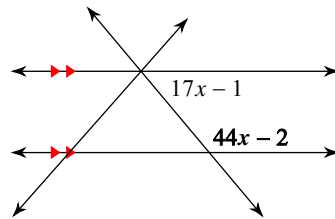
- A) 70° B) 55°
 C) 107° D) 80°

21)



- A) 80° B) 60°
 C) 130° D) 75°

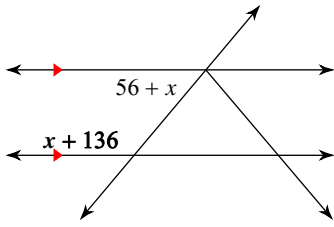
22)



- A) 45° B) 95°
 C) 130° D) 105°

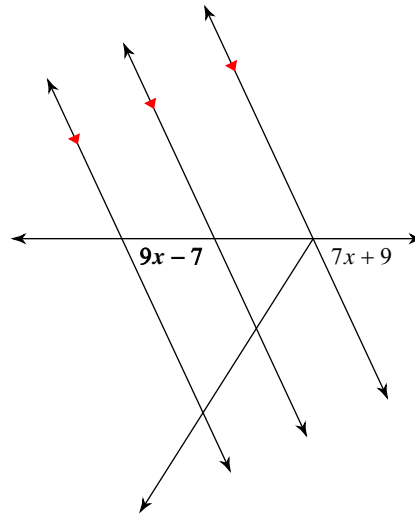


23)



- A) 135°
- B) 125°
- C) 110°
- D) 130°

24)



- A) 44°
- B) 100°
- C) 45°
- D) 65°



Answers to Assignment (ID: 10)

1) C
5) B
9) C
13) A
17) C
21) B

2) A
6) D
10) B
14) A
18) C
22) C

3) A
7) C
11) D
15) A
19) D
23) D

4) A
8) D
12) B
16) A
20) D
24) D

